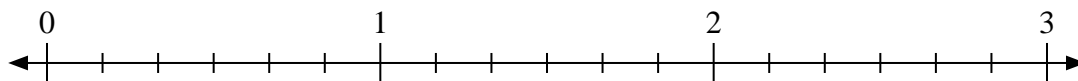




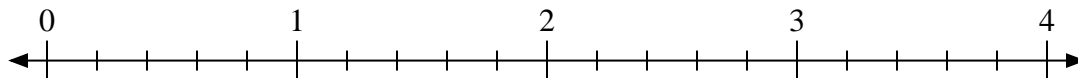
Utilisez la droite numérique pour résoudre les problèmes.

Réponses

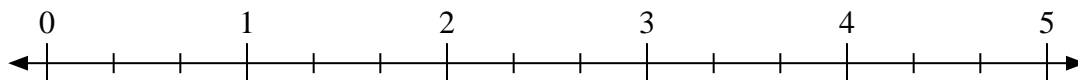
1) $3 \div \frac{3}{6}$



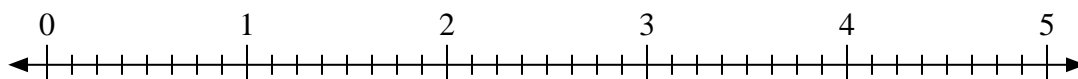
2) $2 \div \frac{4}{5}$



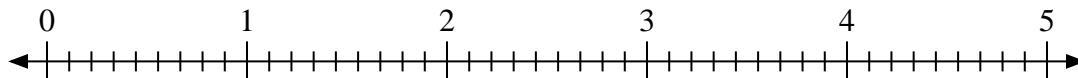
3) $5 \div \frac{1}{3}$



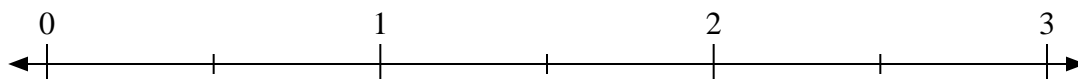
4) $3 \div \frac{5}{8}$



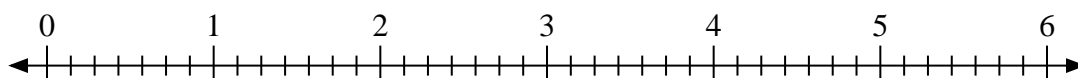
5) $3 \div \frac{7}{9}$



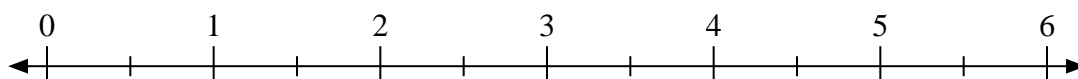
6) $3 \div \frac{1}{2}$



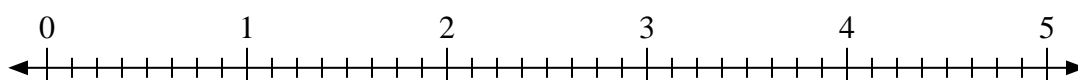
7) $5 \div \frac{3}{7}$



8) $5 \div \frac{1}{2}$



9) $4 \div \frac{4}{8}$



1. _____

2. _____

3. _____

4. _____

5. _____

6. _____

7. _____

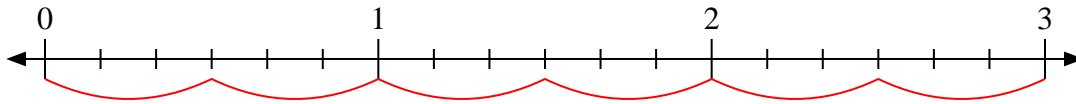
8. _____

9. _____

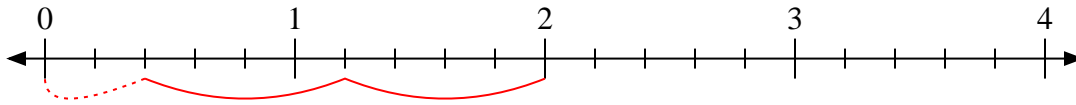


Utilisez la droite numérique pour résoudre les problèmes.

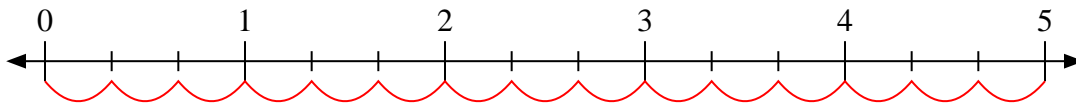
1) $3 \div \frac{3}{6}$



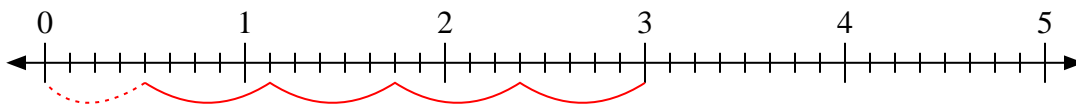
2) $2 \div \frac{4}{5}$



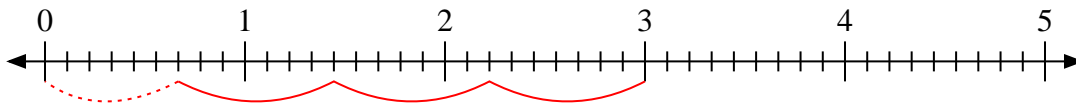
3) $5 \div \frac{1}{3}$



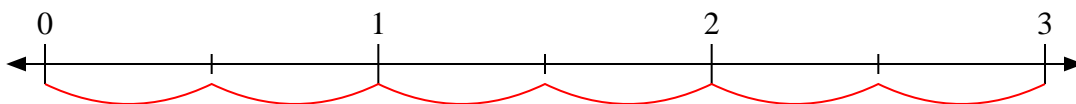
4) $3 \div \frac{5}{8}$



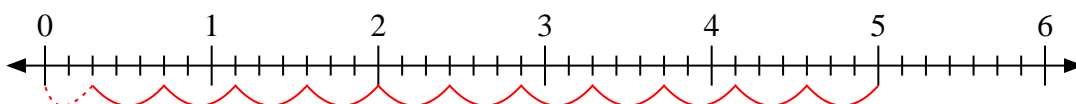
5) $3 \div \frac{7}{9}$



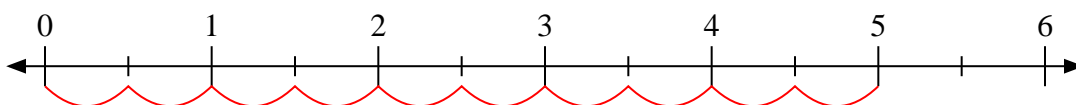
6) $3 \div \frac{1}{2}$



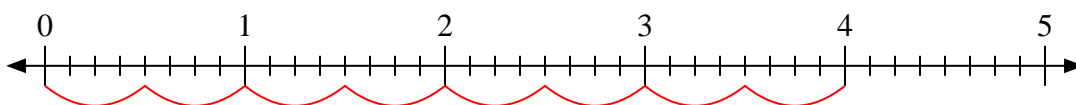
7) $5 \div \frac{3}{7}$



8) $5 \div \frac{1}{2}$



9) $4 \div \frac{4}{8}$



Réponses

1. 6

2. $2 \frac{2}{4}$

3. 15

4. $4 \frac{4}{5}$

5. $3 \frac{6}{7}$

6. 6

7. $11 \frac{2}{3}$

8. 10

9. 8