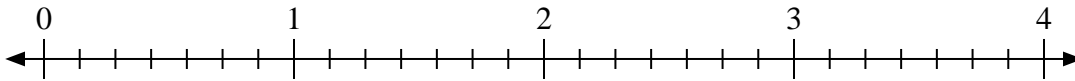




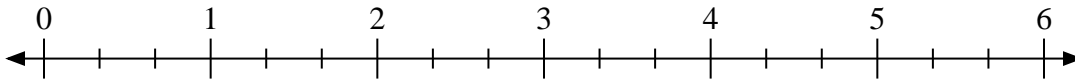
Utilisez la droite numérique pour résoudre les problèmes.

Réponses

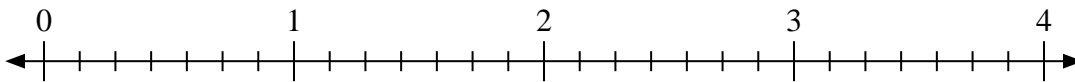
1) $2 \div \frac{4}{7}$



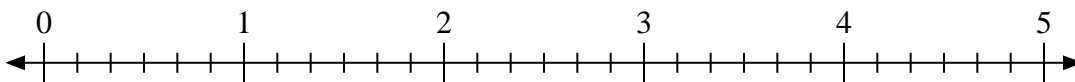
2) $3 \div \frac{2}{3}$



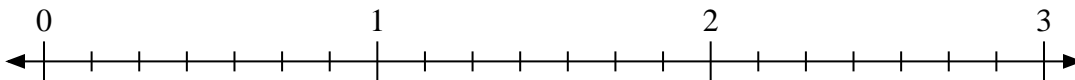
3) $3 \div \frac{2}{7}$



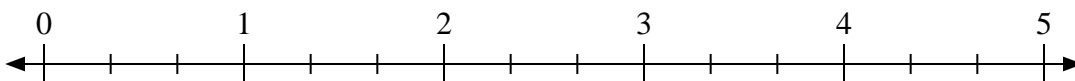
4) $3 \div \frac{1}{6}$



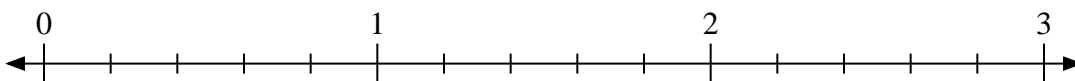
5) $3 \div \frac{2}{7}$



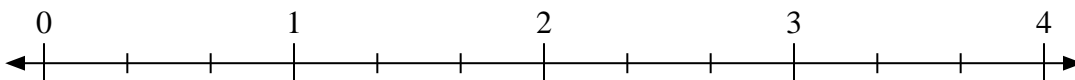
6) $4 \div \frac{2}{3}$



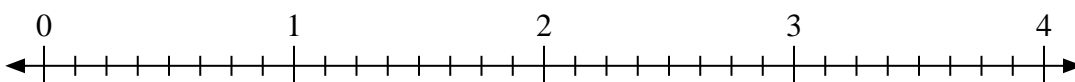
7) $2 \div \frac{1}{5}$



8) $4 \div \frac{2}{3}$



9) $3 \div \frac{7}{8}$



1. _____

2. _____

3. _____

4. _____

5. _____

6. _____

7. _____

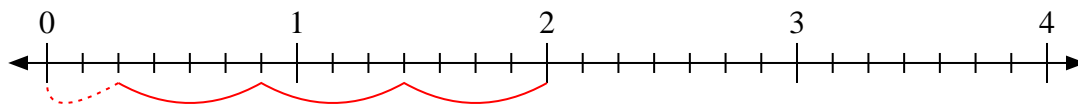
8. _____

9. _____

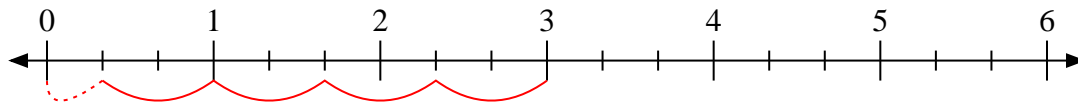


Utilisez la droite numérique pour résoudre les problèmes.

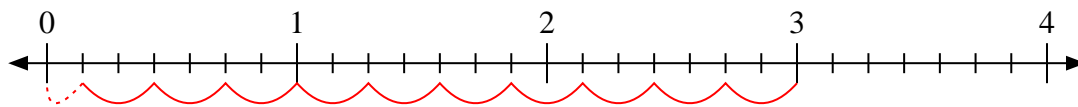
1) $2 \div \frac{4}{7}$



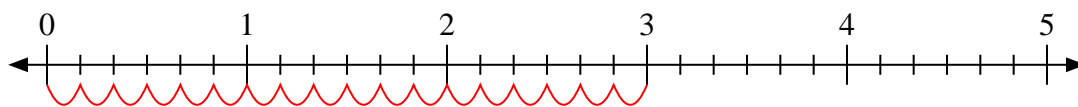
2) $3 \div \frac{2}{3}$



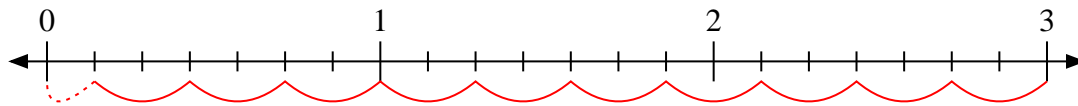
3) $3 \div \frac{2}{7}$



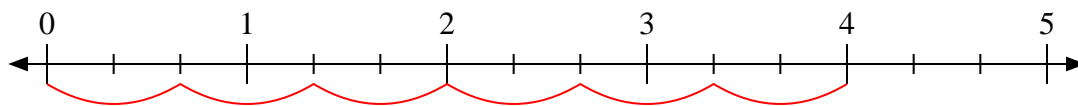
4) $3 \div \frac{1}{6}$



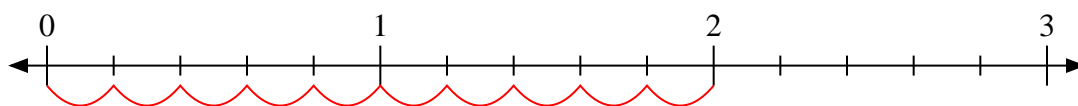
5) $3 \div \frac{2}{7}$



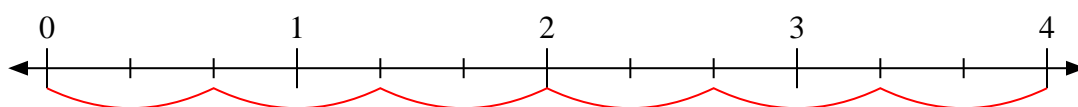
6) $4 \div \frac{2}{3}$



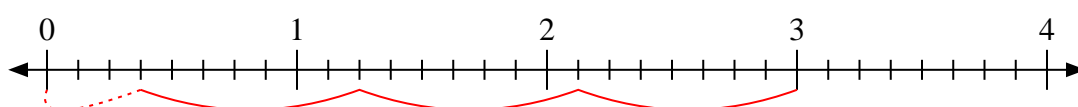
7) $2 \div \frac{1}{5}$



8) $4 \div \frac{2}{3}$



9) $3 \div \frac{7}{8}$



Réponses

1. 3 $\frac{2}{4}$

2. 4 $\frac{1}{2}$

3. 10 $\frac{1}{2}$

4. 18

5. 10 $\frac{1}{2}$

6. 6

7. 10

8. 6

9. 3 $\frac{3}{7}$