




Utilisez la méthode visuelle pour résoudre chaque problème.

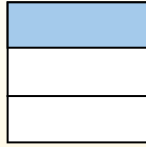
Réponses

$\frac{1}{3} \div 4 = ?$



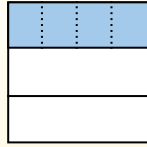
Para resolverlo, comience con un todo.

Divida el conjunto en 3 piezas y complete 1 sección.



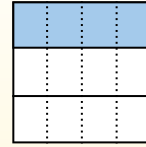
Ahora puedes ver el tamaño de $\frac{1}{3}$

Em seguida, divide a $\frac{1}{3}$ em 4 grupos.



Esto muestra el tamaño de cada pieza.

Para calcular el tamaño de cada pieza en comparación con el conjunto, divide el conjunto en 4 grupos.




Each piece is $\frac{1}{12}$ of the whole.

Or:


$\frac{1}{3} \div 4 = \frac{1}{12}$

1. _____
2. _____
3. _____
4. _____
5. _____
6. _____
7. _____
8. _____
9. _____
10. _____
11. _____
12. _____


1) $\frac{1}{3} \div 7 =$




2) $\frac{1}{7} \div 7 =$




3) $\frac{1}{7} \div 3 =$




4) $\frac{1}{2} \div 2 =$




5) $\frac{1}{6} \div 5 =$



6) $\frac{1}{8} \div 9 =$




7) $\frac{1}{6} \div 7 =$




8) $\frac{1}{3} \div 2 =$




9) $\frac{1}{3} \div 9 =$




10) $\frac{1}{6} \div 3 =$



11) $\frac{1}{5} \div 7 =$



12) $\frac{1}{8} \div 6 =$






Utilisez la méthode visuelle pour résoudre chaque problème.

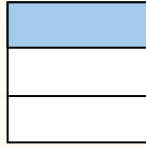
Réponses

$\frac{1}{3} \div 4 = ?$



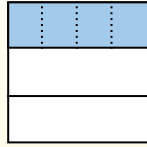
Para resolverlo, comience con un todo.

Divida el conjunto en 3 piezas y complete 1 sección.



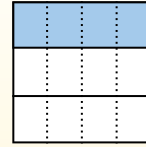
Ahora puedes ver el tamaño de $\frac{1}{3}$

Em seguida, divide a $\frac{1}{3}$ em 4 grupos.



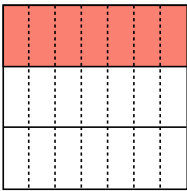
Esto muestra el tamaño de cada pieza.

Para calcular el tamaño de cada pieza en comparación con el conjunto, divide el conjunto en 4 grupos.

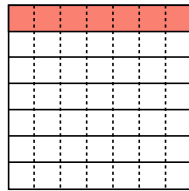


Each piece is $\frac{1}{12}$ of the whole.
Or:
 $\frac{1}{3} \div 4 = \frac{1}{12}$

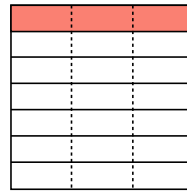
1) $\frac{1}{3} \div 7 =$



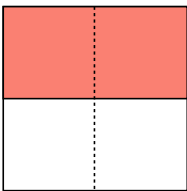
2) $\frac{1}{7} \div 7 =$



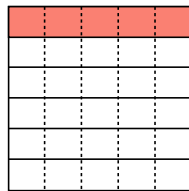
3) $\frac{1}{7} \div 3 =$



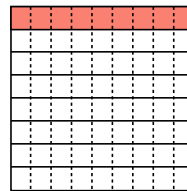
4) $\frac{1}{2} \div 2 =$



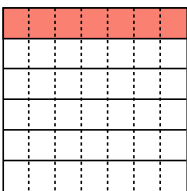
5) $\frac{1}{6} \div 5 =$



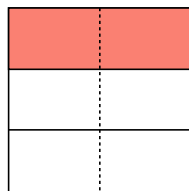
6) $\frac{1}{8} \div 9 =$



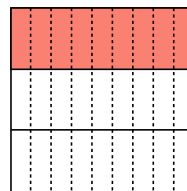
7) $\frac{1}{6} \div 7 =$



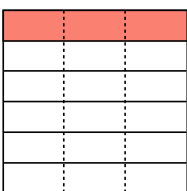
8) $\frac{1}{3} \div 2 =$



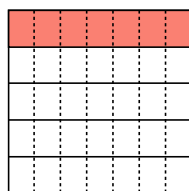
9) $\frac{1}{3} \div 9 =$



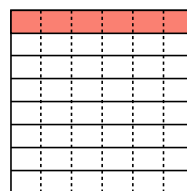
10) $\frac{1}{6} \div 3 =$



11) $\frac{1}{5} \div 7 =$



12) $\frac{1}{8} \div 6 =$



1. $\frac{1}{21}$
2. $\frac{1}{49}$
3. $\frac{1}{21}$
4. $\frac{1}{4}$
5. $\frac{1}{30}$
6. $\frac{1}{72}$
7. $\frac{1}{42}$
8. $\frac{1}{6}$
9. $\frac{1}{27}$
10. $\frac{1}{18}$
11. $\frac{1}{35}$
12. $\frac{1}{48}$