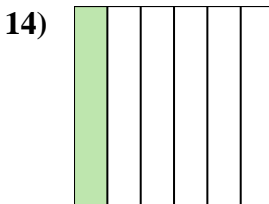
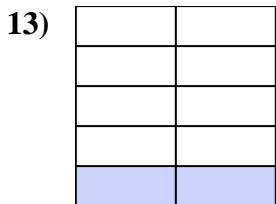
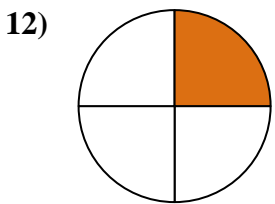
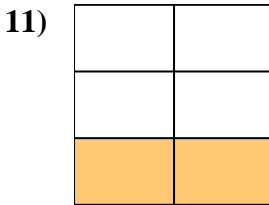
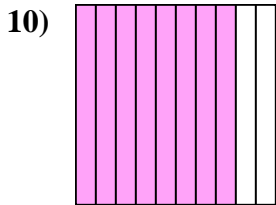
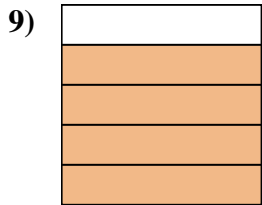
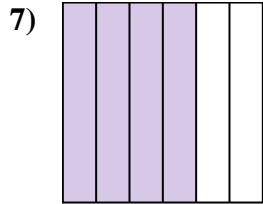
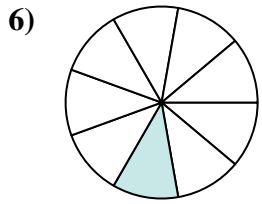
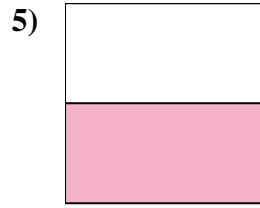
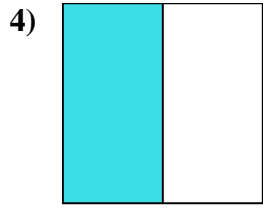
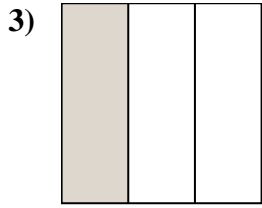
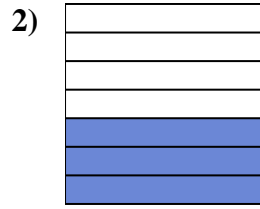
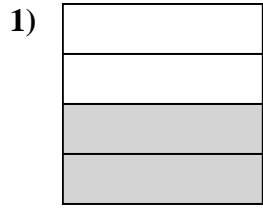
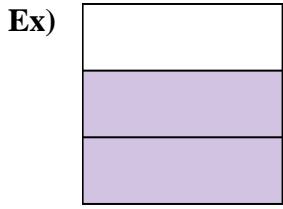




Écrivez le montant ombré sous forme de mot.



**Réponses**

Ex. **les deux tiers**

1. \_\_\_\_\_

2. \_\_\_\_\_

3. \_\_\_\_\_

4. \_\_\_\_\_

5. \_\_\_\_\_

6. \_\_\_\_\_

7. \_\_\_\_\_

8. \_\_\_\_\_

9. \_\_\_\_\_

10. \_\_\_\_\_

11. \_\_\_\_\_

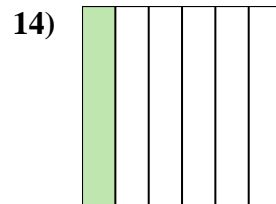
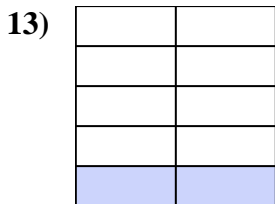
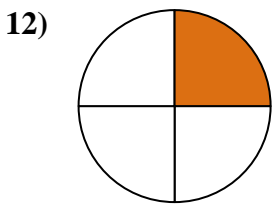
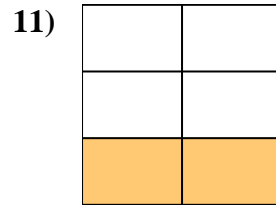
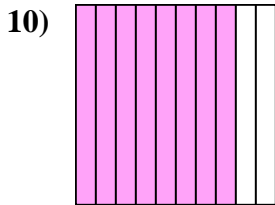
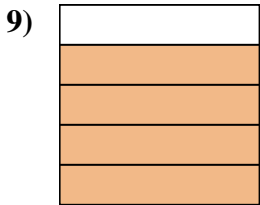
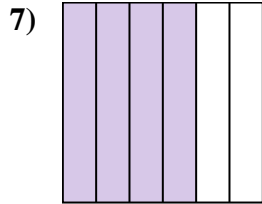
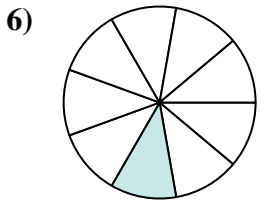
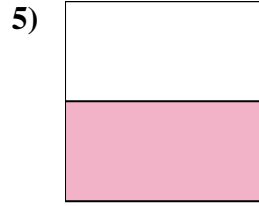
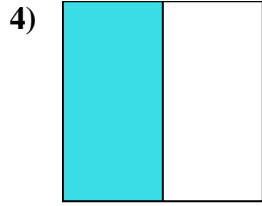
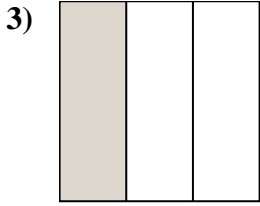
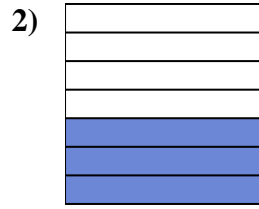
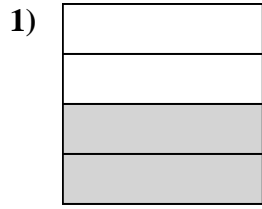
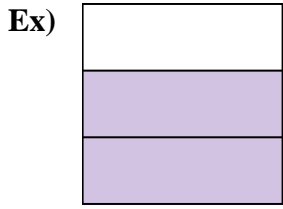
12. \_\_\_\_\_

13. \_\_\_\_\_

14. \_\_\_\_\_



Écrivez le montant ombré sous forme de mot.



**Réponses**

Ex. les deux tiers

1. les deux quarts

2. trois-septièmes

3. un tiers

4. une moitié

5. une moitié

6. un neuvième

7. quatre sixièmes

8. sept huitièmes

9. quatre cinquièmes

10. huit dixièmes

11. deux cinquièmes

12. un quart

13. deux neuvièmes

14. un sixième