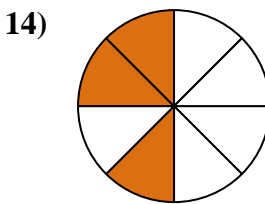
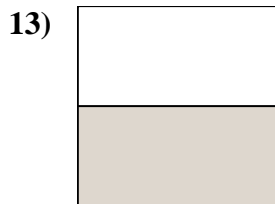
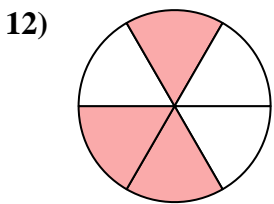
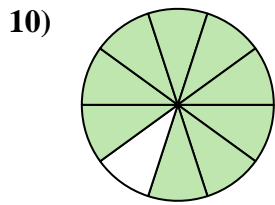
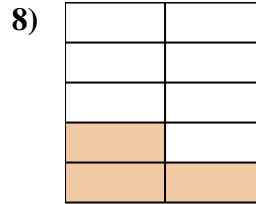
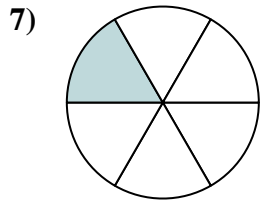
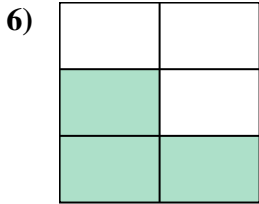
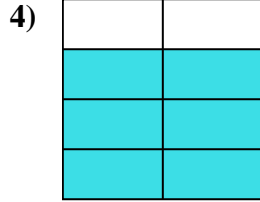
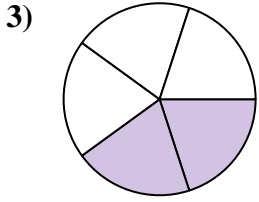
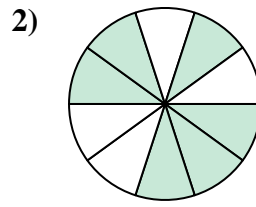
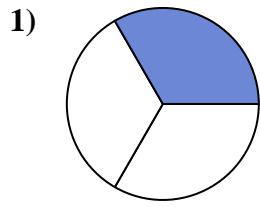
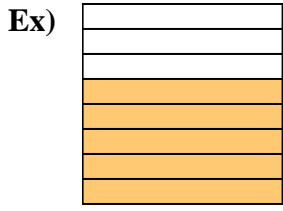




Écrivez le montant ombré sous forme de mot.



Réponses

Ex. **cinq huitièmes**

1. _____

2. _____

3. _____

4. _____

5. _____

6. _____

7. _____

8. _____

9. _____

10. _____

11. _____

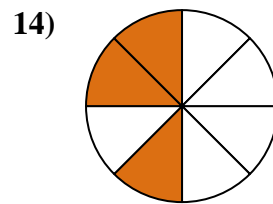
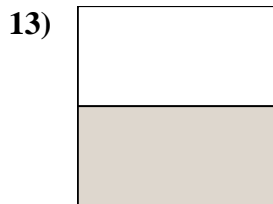
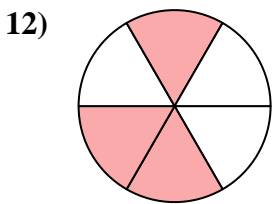
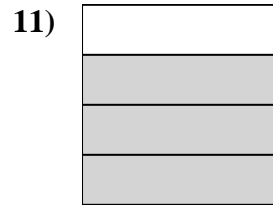
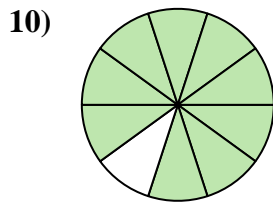
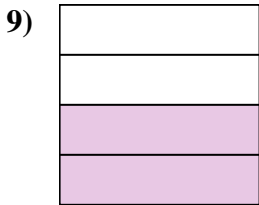
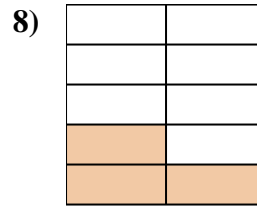
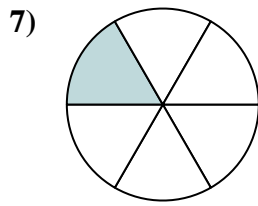
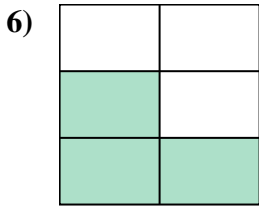
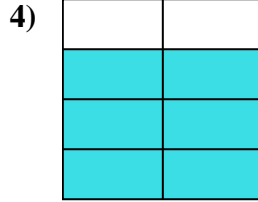
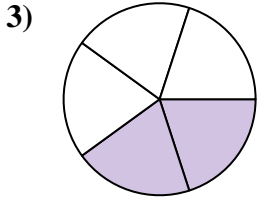
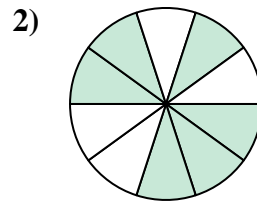
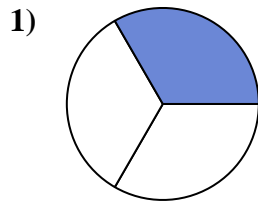
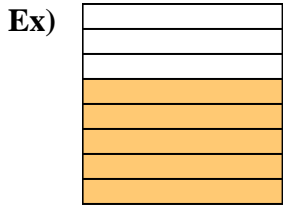
12. _____

13. _____

14. _____



Écrivez le montant ombré sous forme de mot.

**Réponses**Ex. cinq huitièmes1. un tiers2. six dixièmes3. deux cinquièmes4. six-septièmes5. trois-septièmes6. les trois cinquièmes7. un sixième8. trois neuvièmes9. les deux quarts10. neuf dixièmes11. trois quarts12. trois sixièmes13. une moitié14. trois huitièmes