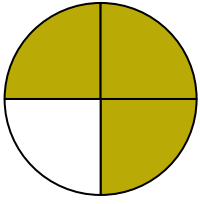





Écrivez le montant ombré sous forme de mot.

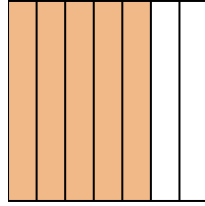
Ex)



1)



2)



Réponses

Ex. **trois quarts**

1. _____

2. _____

3. _____

4. _____

5. _____

6. _____

7. _____

8. _____

9. _____

10. _____


11. _____

12. _____

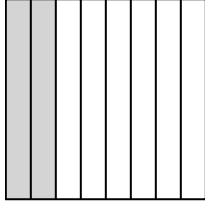
13. _____

14. _____

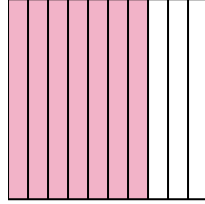
3)



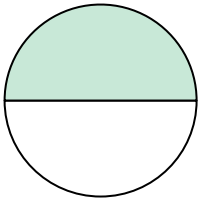
4)



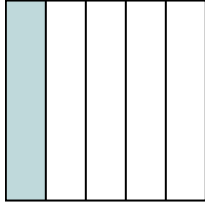
5)



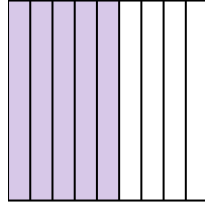
6)



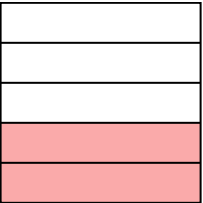
7)



8)



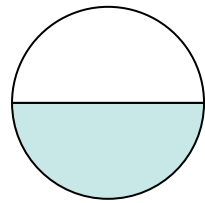
9)



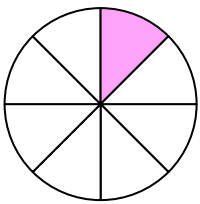
10)




11)



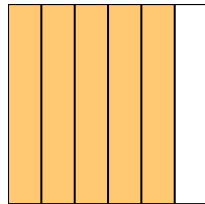
12)



13)



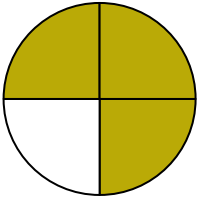
14)






Écrivez le montant ombré sous forme de mot.

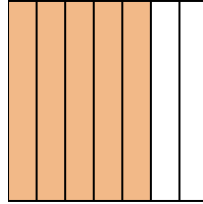
Ex)



1)



2)



Ex.

trois quarts

1.

un quart


2.

cinq septièmes

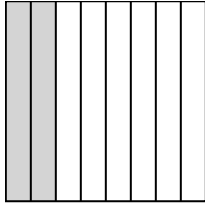
3.

quatre neuvièmes

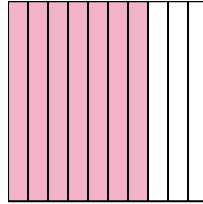
3)



4)



5)



4.

deux huitièmes

5.

sept dixièmes

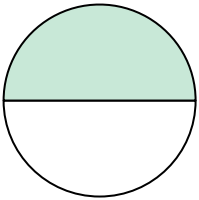
6.

une moitié

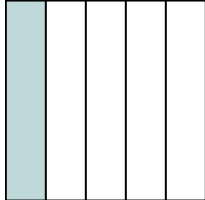
7.

un cinquième

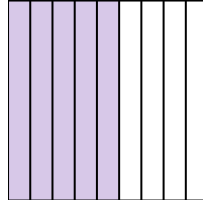
6)



7)



8)



8.

cinq neuvièmes

9.

deux cinquièmes


10.

un tiers


11.

une moitié

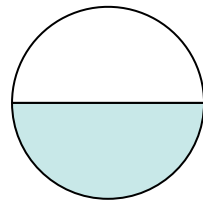
9)



10)



11)



12.

un huit

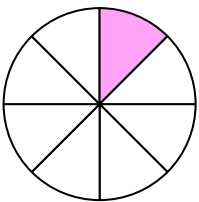
13.

les deux dixièmes

14.

cinq sixièmes

12)



13)



14)

