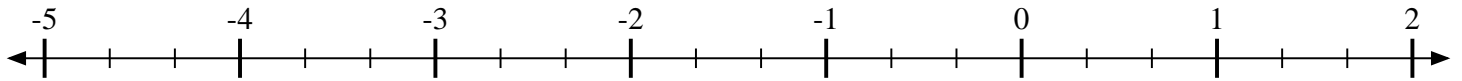


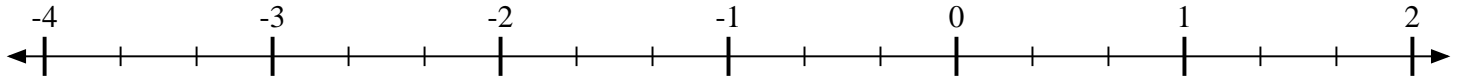


Indiquez la position de chaque fraction.

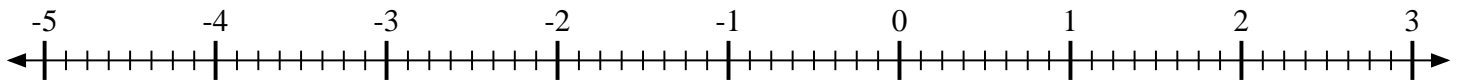
1) Indiquez la position de  $-3\frac{1}{3}$



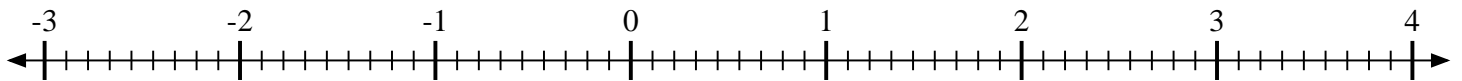
2) Indiquez la position de  $-2\frac{2}{3}$



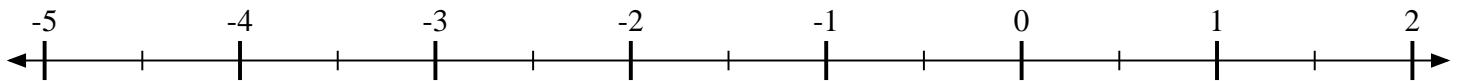
3) Indiquez la position de  $-2\frac{6}{8}$



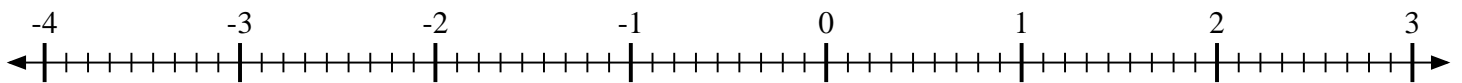
4) Indiquez la position de  $1\frac{1}{9}$



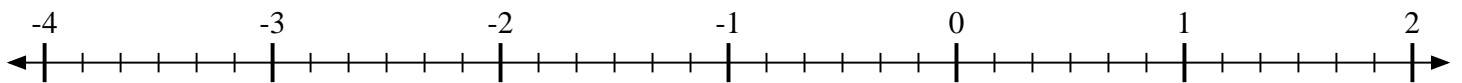
5) Indiquez la position de  $1\frac{1}{2}$



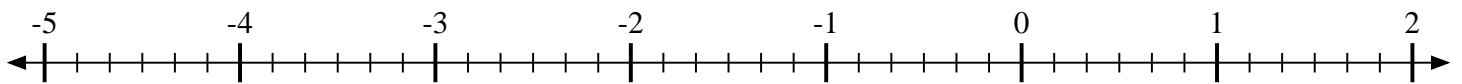
6) Indiquez la position de  $2\frac{5}{9}$



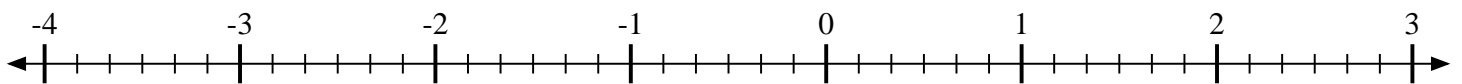
7) Indiquez la position de  $-1\frac{3}{6}$



8) Indiquez la position de  $-1\frac{4}{6}$



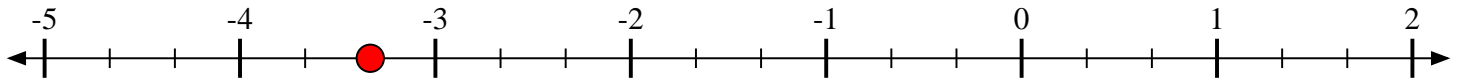
9) Indiquez la position de  $-1\frac{2}{6}$



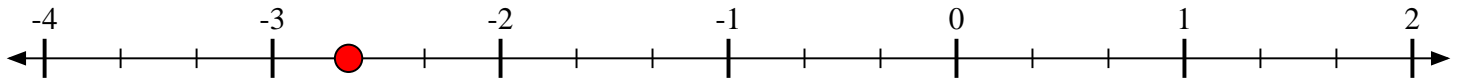


Indiquez la position de chaque fraction.

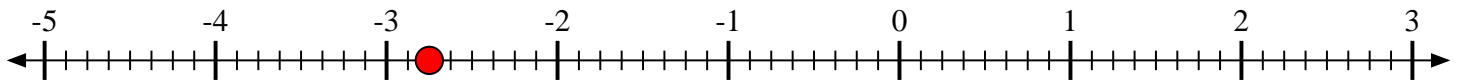
- 1) Indiquez la position de  $-3\frac{1}{3}$



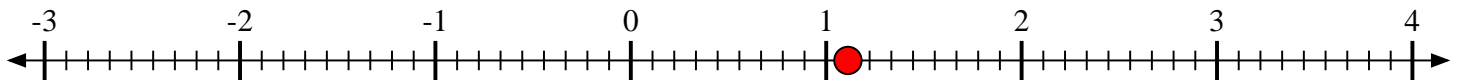
- 2) Indiquez la position de  $-2\frac{2}{3}$



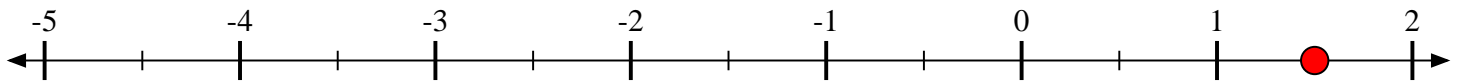
- 3) Indiquez la position de  $-2\frac{6}{8}$



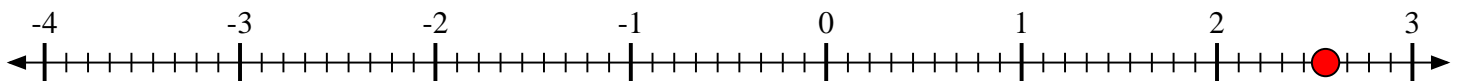
- 4) Indiquez la position de  $1\frac{1}{9}$



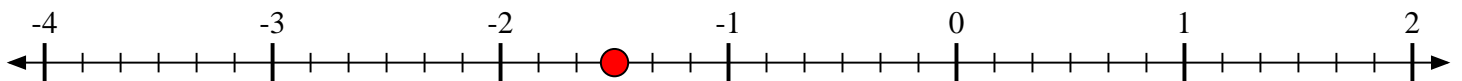
- 5) Indiquez la position de  $1\frac{1}{2}$



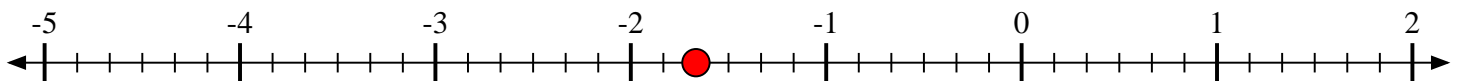
- 6) Indiquez la position de  $2\frac{5}{9}$



- 7) Indiquez la position de  $-1\frac{3}{6}$



- 8) Indiquez la position de  $-1\frac{4}{6}$



- 9) Indiquez la position de  $-1\frac{2}{6}$

