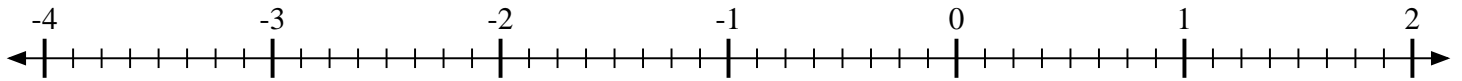


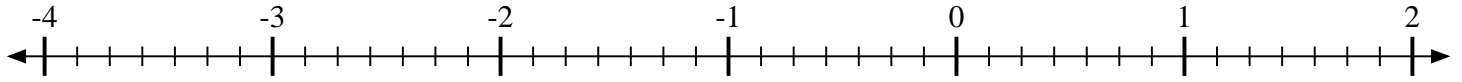


Indiquez la position de chaque fraction.

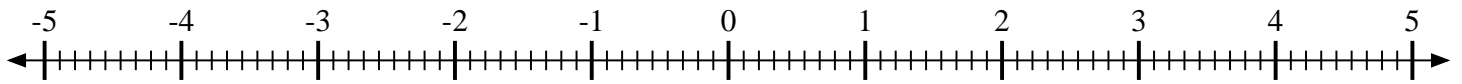
1) Indiquez la position de  $1\frac{1}{8}$



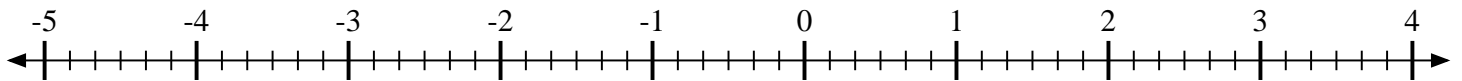
2) Indiquez la position de  $1\frac{1}{7}$



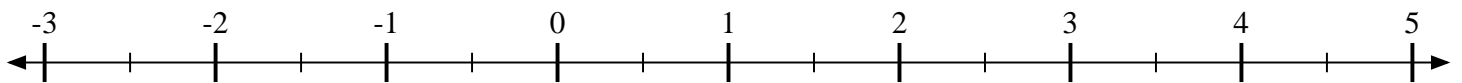
3) Indiquez la position de  $-4\frac{7}{9}$



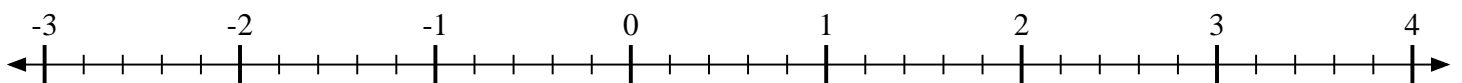
4) Indiquez la position de  $-3\frac{1}{6}$



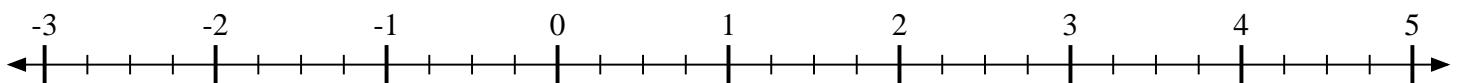
5) Indiquez la position de  $-1\frac{1}{2}$



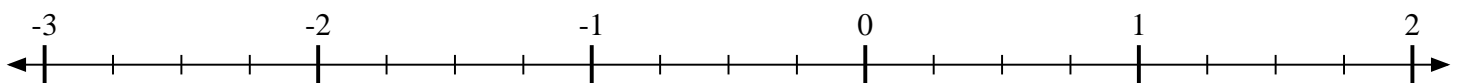
6) Indiquez la position de  $\frac{2}{5}$



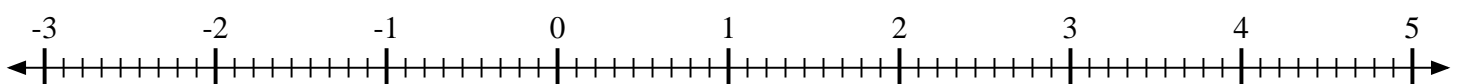
7) Indiquez la position de  $4\frac{2}{4}$



8) Indiquez la position de  $-1\frac{2}{4}$



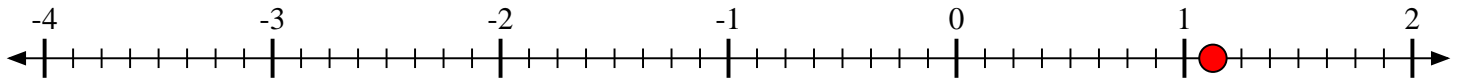
9) Indiquez la position de  $3\frac{7}{9}$



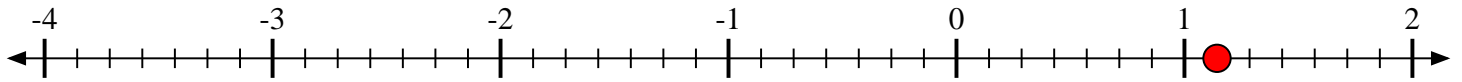


Indiquez la position de chaque fraction.

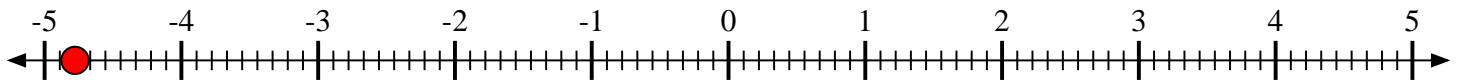
- 1) Indiquez la position de  $1\frac{1}{8}$



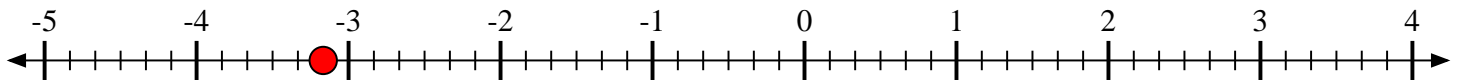
- 2) Indiquez la position de  $1\frac{1}{7}$



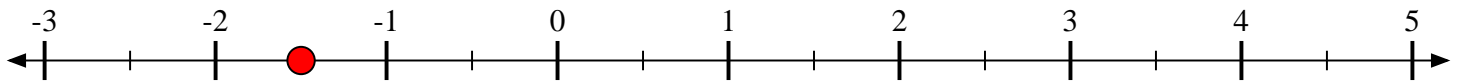
- 3) Indiquez la position de  $-4\frac{7}{9}$



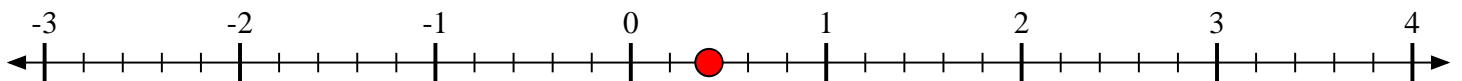
- 4) Indiquez la position de  $-3\frac{1}{6}$



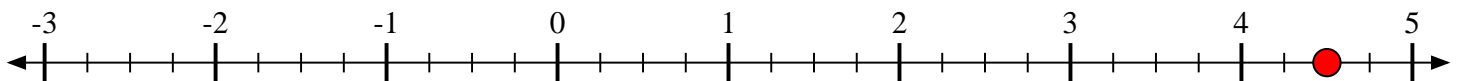
- 5) Indiquez la position de  $-1\frac{1}{2}$



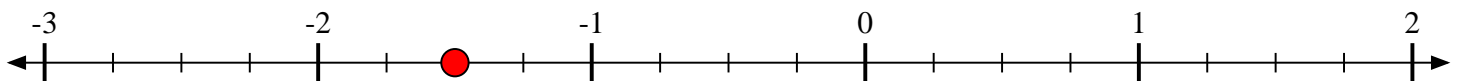
- 6) Indiquez la position de  $\frac{2}{5}$



- 7) Indiquez la position de  $4\frac{2}{4}$



- 8) Indiquez la position de  $-1\frac{2}{4}$



- 9) Indiquez la position de  $3\frac{7}{9}$

