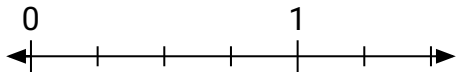
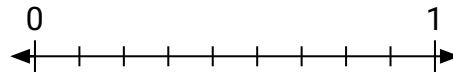


**Résoudre chaque problème.**

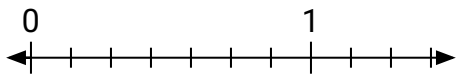
- 1) Marque l'emplacement de
- $\frac{3}{4}$



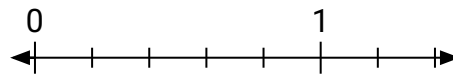
- 2) Marque l'emplacement de
- $\frac{9}{9}$



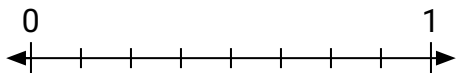
- 3) Marque l'emplacement de
- $\frac{5}{7}$



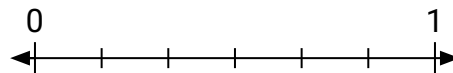
- 4) Marque l'emplacement de
- $\frac{3}{5}$



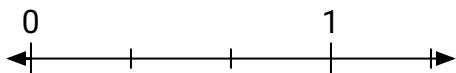
- 5) Marque l'emplacement de
- $\frac{4}{8}$



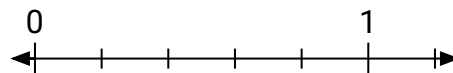
- 6) Marque l'emplacement de
- $\frac{0}{6}$



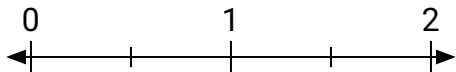
- 7) Marque l'emplacement de
- $\frac{3}{3}$




- 8) Marque l'emplacement de
- $\frac{2}{5}$



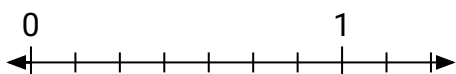
- 9) Marque l'emplacement de
- $\frac{2}{2}$



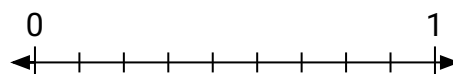
- 10) Marque l'emplacement de
- $\frac{1}{2}$



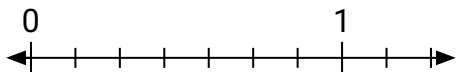
- 11) Marque l'emplacement de
- $\frac{0}{7}$



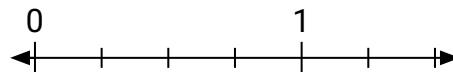
- 12) Marque l'emplacement de
- $\frac{6}{9}$



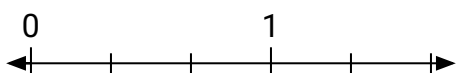
- 13) Marque l'emplacement de
- $\frac{3}{7}$



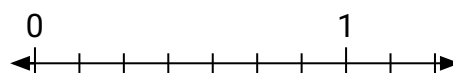
- 14) Marque l'emplacement de
- $\frac{4}{4}$



- 15) Marque l'emplacement de
- $\frac{0}{3}$



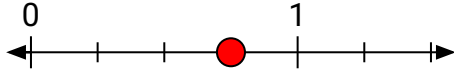
- 16) Marque l'emplacement de
- $\frac{1}{7}$



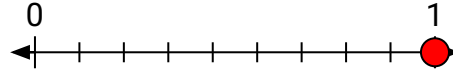


Résoudre chaque problème.

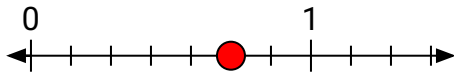
- 1) Marque l'emplacement de
- $\frac{3}{4}$



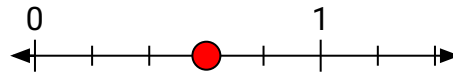
- 2) Marque l'emplacement de
- $\frac{9}{9}$



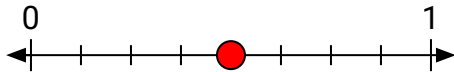
- 3) Marque l'emplacement de
- $\frac{5}{7}$



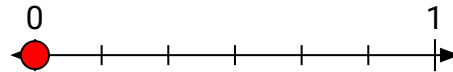
- 4) Marque l'emplacement de
- $\frac{3}{5}$



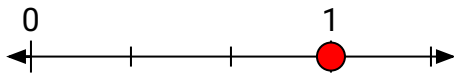
- 5) Marque l'emplacement de
- $\frac{4}{8}$



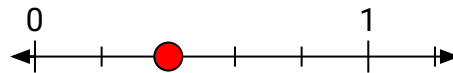
- 6) Marque l'emplacement de
- $\frac{0}{6}$



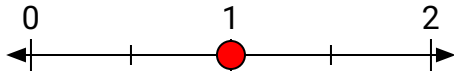
- 7) Marque l'emplacement de
- $\frac{3}{3}$




- 8) Marque l'emplacement de
- $\frac{2}{5}$



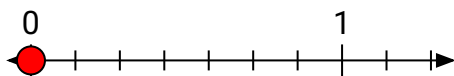
- 9) Marque l'emplacement de
- $\frac{2}{2}$



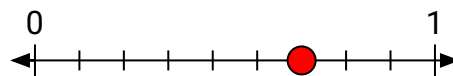
- 10) Marque l'emplacement de
- $\frac{1}{2}$



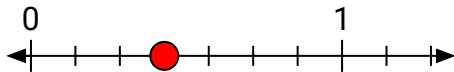
- 11) Marque l'emplacement de
- $\frac{0}{7}$



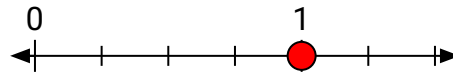
- 12) Marque l'emplacement de
- $\frac{6}{9}$



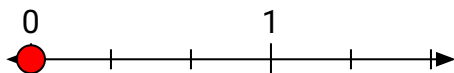
- 13) Marque l'emplacement de
- $\frac{3}{7}$



- 14) Marque l'emplacement de
- $\frac{4}{4}$



- 15) Marque l'emplacement de
- $\frac{0}{3}$



- 16) Marque l'emplacement de
- $\frac{1}{7}$

