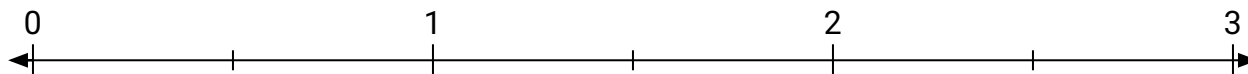


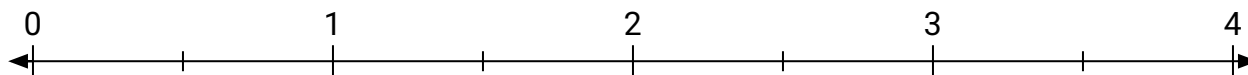


Résoudre chaque problème.

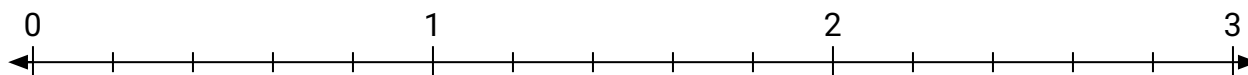
- 1) Marque l'emplacement de $\frac{5}{2}$



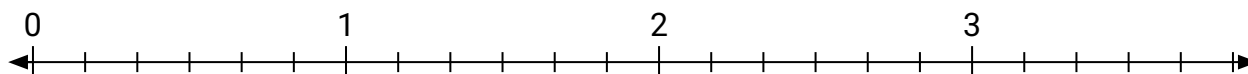
- 2) Marque l'emplacement de $\frac{4}{2}$



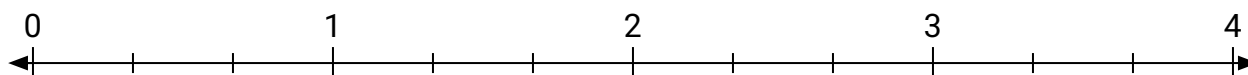
- 3) Marque l'emplacement de $\frac{7}{5}$



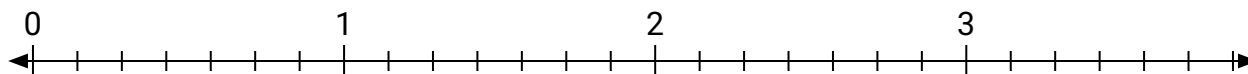
- 4) Marque l'emplacement de $\frac{11}{6}$



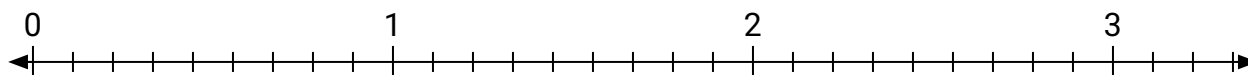
- 5) Marque l'emplacement de $\frac{8}{3}$




- 6) Marque l'emplacement de $\frac{15}{7}$




- 7) Marque l'emplacement de $\frac{19}{9}$



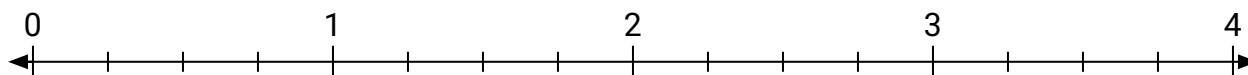
- 8) Marque l'emplacement de $\frac{7}{4}$



- 9) Marque l'emplacement de $\frac{7}{3}$

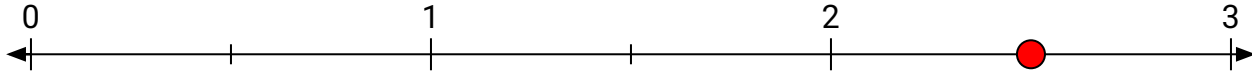


- 10) Marque l'emplacement de $\frac{11}{4}$

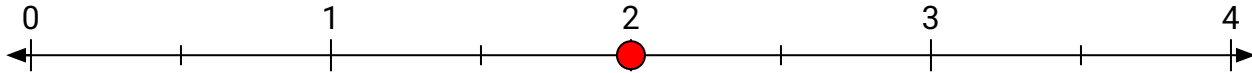


**Résoudre chaque problème.**

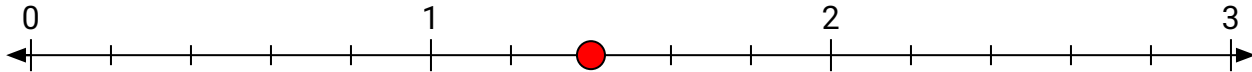
- 1) Marque l'emplacement de
- $\frac{5}{2}$



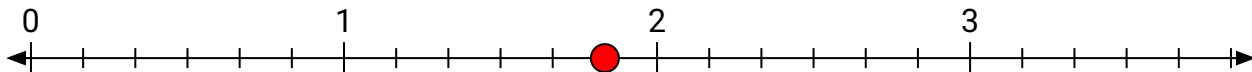
- 2) Marque l'emplacement de
- $\frac{4}{2}$



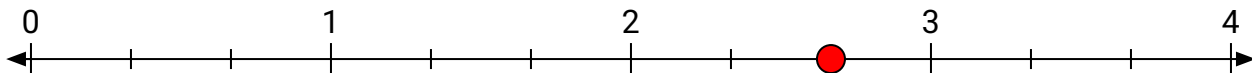
- 3) Marque l'emplacement de
- $\frac{7}{5}$



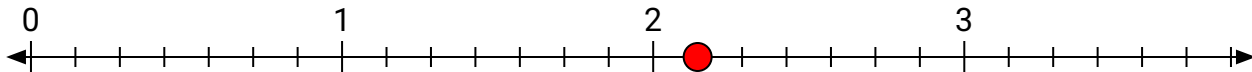
- 4) Marque l'emplacement de
- $\frac{11}{6}$



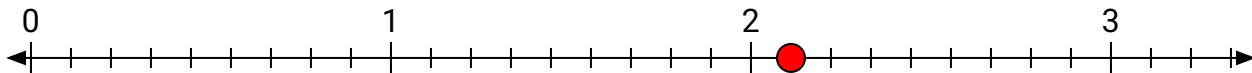
- 5) Marque l'emplacement de
- $\frac{8}{3}$




- 6) Marque l'emplacement de
- $\frac{15}{7}$




- 7) Marque l'emplacement de
- $\frac{19}{9}$



- 8) Marque l'emplacement de
- $\frac{7}{4}$



- 9) Marque l'emplacement de
- $\frac{7}{3}$



- 10) Marque l'emplacement de
- $\frac{11}{4}$

