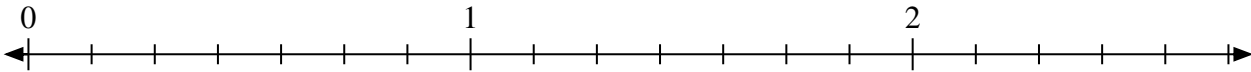



**Résoudre chaque problème.**

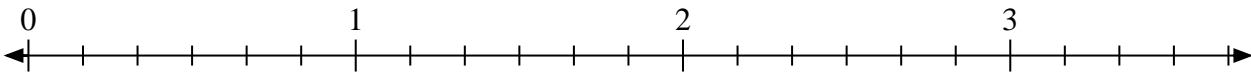
- 1) Marquer l'emplacement du
- $\frac{14}{7}$



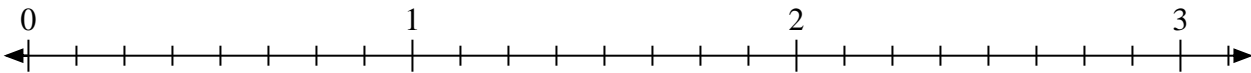
- 2) Marquer l'emplacement du
- $\frac{5}{3}$



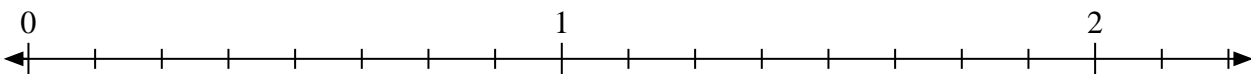
- 3) Marquer l'emplacement du
- $\frac{12}{6}$



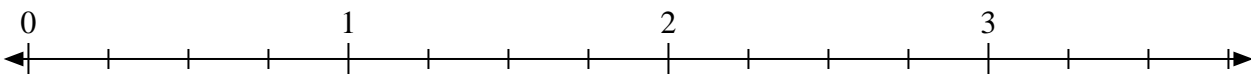
- 4) Marquer l'emplacement du
- $\frac{17}{8}$



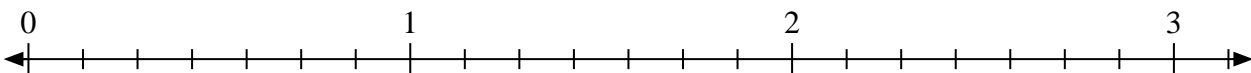
- 5) Marquer l'emplacement du
- $\frac{13}{8}$




- 6) Marquer l'emplacement du
- $\frac{9}{4}$



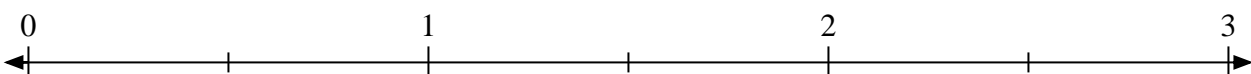
- 7) Marquer l'emplacement du
- $\frac{18}{7}$



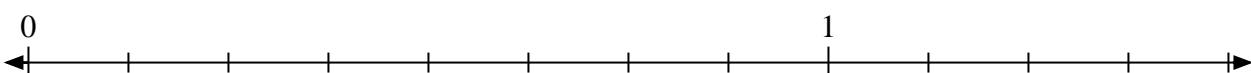
- 8) Marquer l'emplacement du
- $\frac{6}{3}$



- 9) Marquer l'emplacement du
- $\frac{3}{2}$



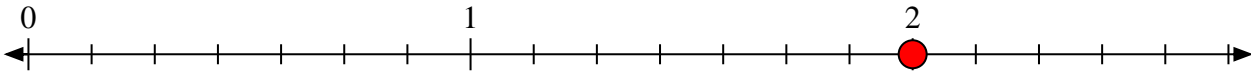
- 10) Marquer l'emplacement du
- $\frac{10}{8}$



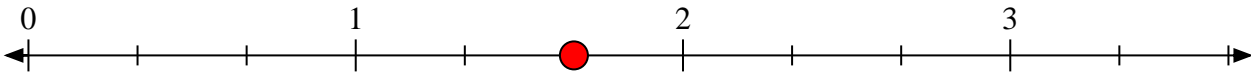


Résoudre chaque problème.

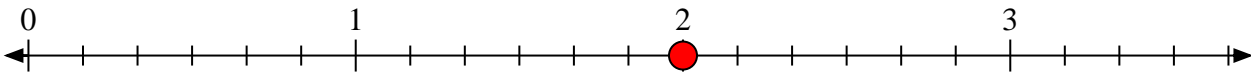
- 1) Marquer l'emplacement du
- $\frac{14}{7}$



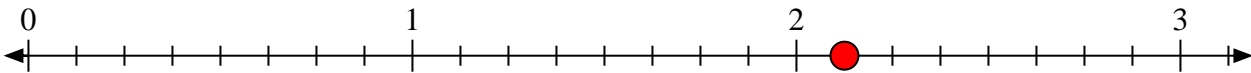
- 2) Marquer l'emplacement du
- $\frac{5}{3}$



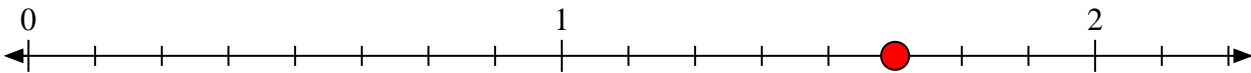
- 3) Marquer l'emplacement du
- $\frac{12}{6}$



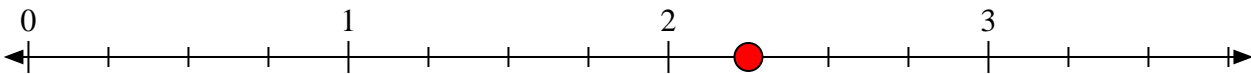
- 4) Marquer l'emplacement du
- $\frac{17}{8}$



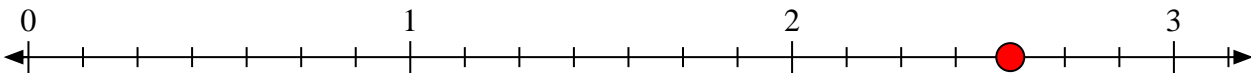
- 5) Marquer l'emplacement du
- $\frac{13}{8}$




- 6) Marquer l'emplacement du
- $\frac{9}{4}$



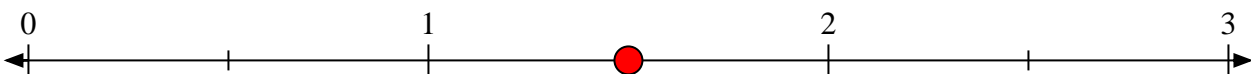
- 7) Marquer l'emplacement du
- $\frac{18}{7}$



- 8) Marquer l'emplacement du
- $\frac{6}{3}$



- 9) Marquer l'emplacement du
- $\frac{3}{2}$



- 10) Marquer l'emplacement du
- $\frac{10}{8}$

