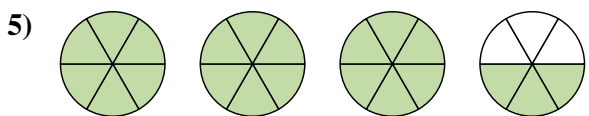
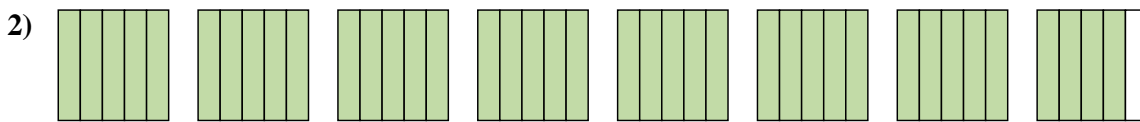
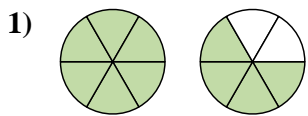


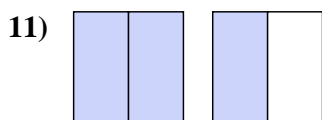
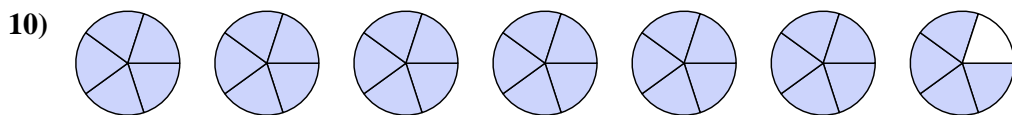
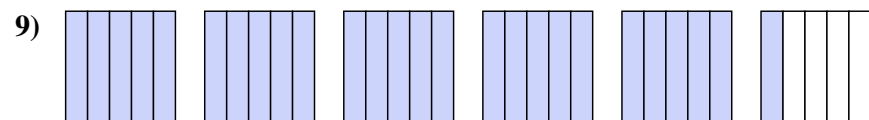
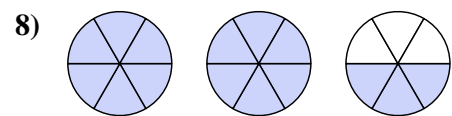
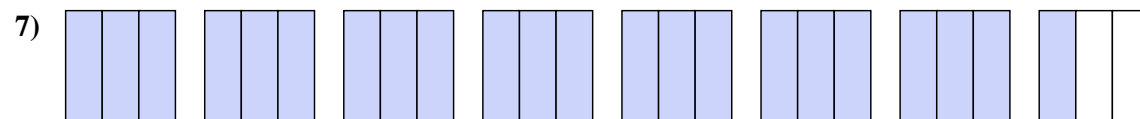
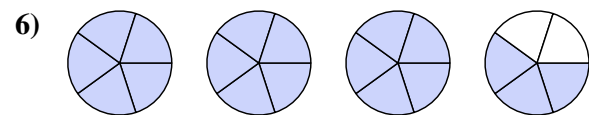




Exprimez chaque montant en un nombre mixte.



Exprimez chaque montant en une fraction impropre.



**Réponses**

1.  $1\frac{4}{6}$

2.  $7\frac{4}{5}$

3.  $3\frac{1}{2}$

4.  $6\frac{1}{3}$

5.  $3\frac{3}{6}$

6.  $18\frac{2}{5}$

7.  $22\frac{2}{3}$

8.  $15\frac{4}{6}$

9.  $26\frac{4}{5}$

10.  $34\frac{4}{5}$

11.  $3\frac{1}{2}$