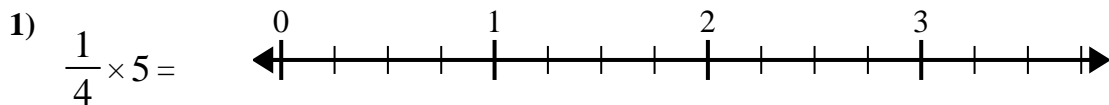


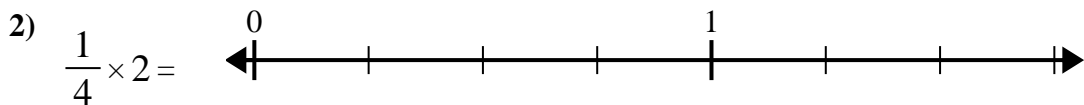


Utilisez la droite numérique pour résoudre.

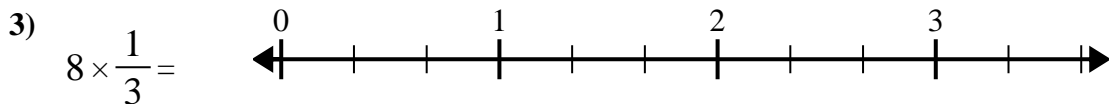
Réponses



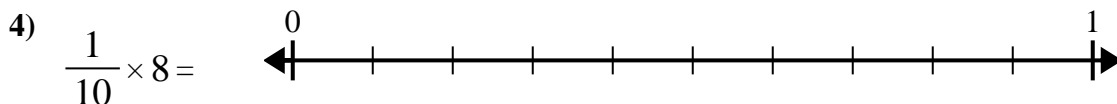
1. _____



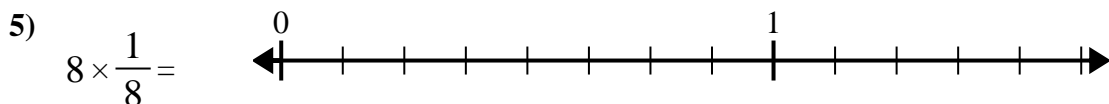
2. _____



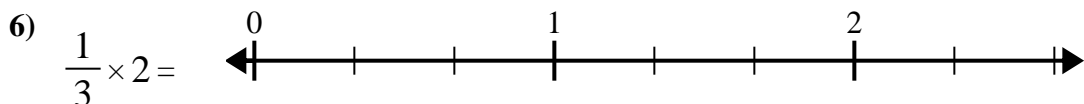
3. _____



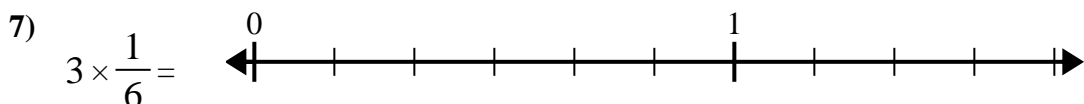
4. _____



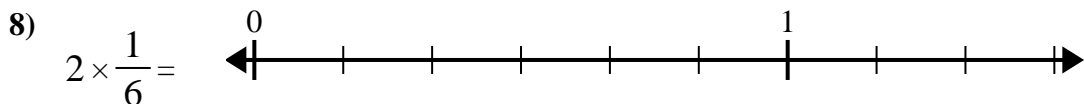
5. _____



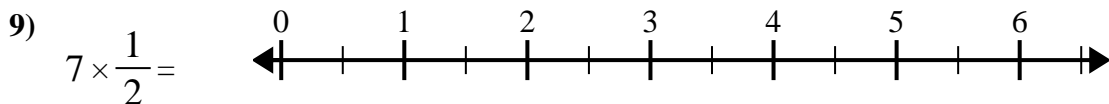
6. _____



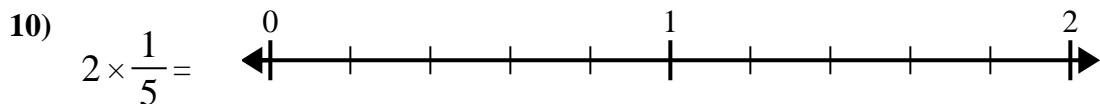
7. _____



8. _____



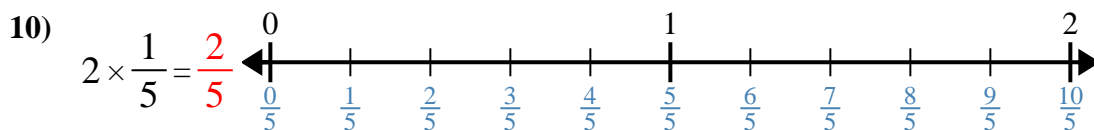
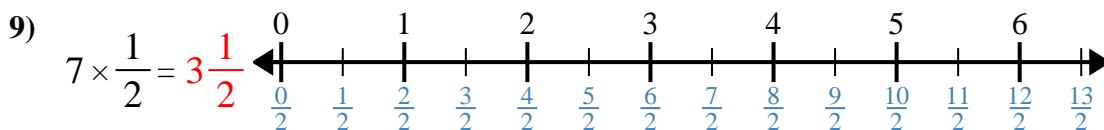
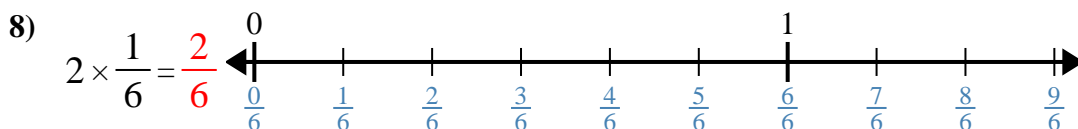
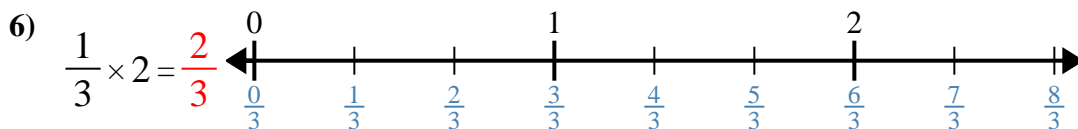
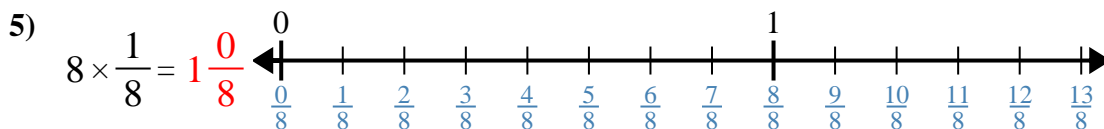
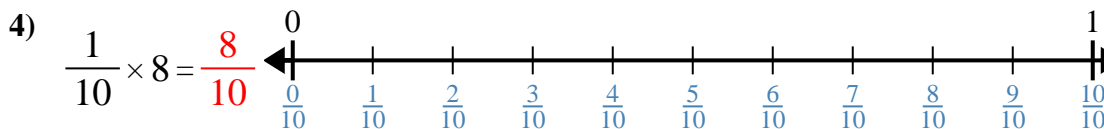
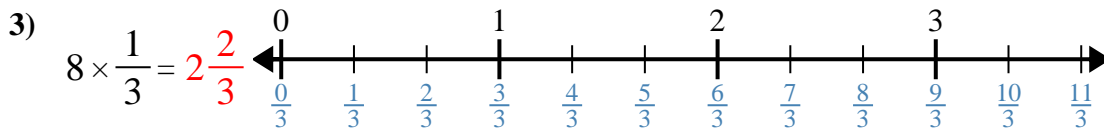
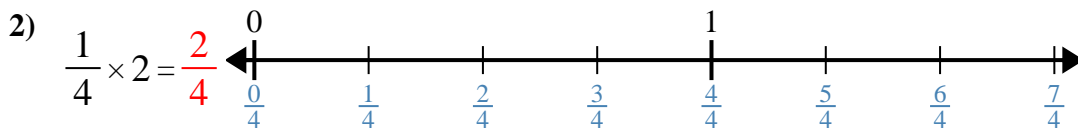
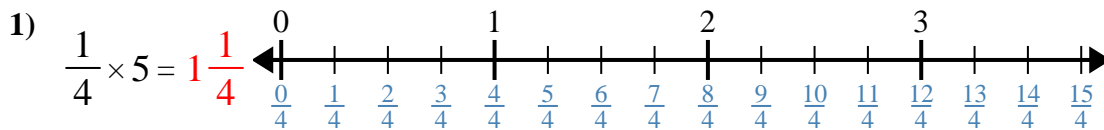
9. _____



10. _____



Utilisez la droite numérique pour résoudre.



Réponses

1. $1\frac{1}{4}$

2. $\frac{2}{4}$

3. $2\frac{2}{3}$

4. $\frac{8}{10}$

5. $1\frac{0}{8}$

6. $\frac{2}{3}$

7. $\frac{3}{6}$

8. $\frac{2}{6}$

9. $3\frac{1}{2}$

10. $\frac{2}{5}$



Utilisez la droite numérique pour résoudre.

$\frac{2}{3}$

$2\frac{2}{3}$

$3\frac{1}{2}$

$\frac{2}{6}$

$\frac{2}{4}$

$\frac{2}{5}$

$\frac{8}{10}$

$1\frac{0}{8}$

$\frac{3}{6}$

$1\frac{1}{4}$

Réponses

1. _____
2. _____
3. _____
4. _____
5. _____
6. _____
7. _____
8. _____
9. _____
10. _____

