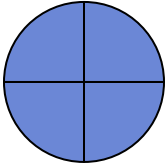




Déterminez quelle lettre représente le mieux la partie colorée de la figure.


Réponses

1)




- A. three-quarters
- B. one-fourth
- C. four-quarters

2)




- A. one-half
- B. two-halves
- C. two-quarters

3)



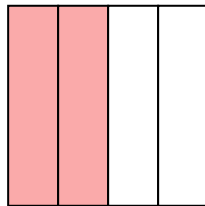
- A. two-quarters
- B. two-halves
- C. three-fourths

4)



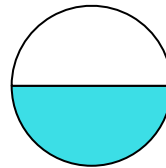
- A. three-fourths
- B. three-fourths
- C. two-halves

5)



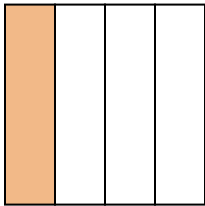
- A. four-quarters
- B. one-quarter
- C. two-quarters

6)



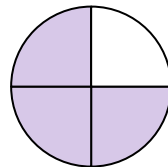
- A. one-half
- B. one-fourth
- C. two-halves

7)



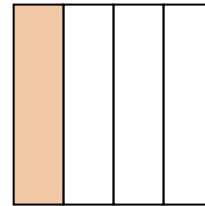
- A. three-fourths
- B. three-fourths
- C. one-fourth

8)



- A. two-quarters
- B. two-halves
- C. three-fourths

9)



- A. three-fourths
- B. one-half
- C. one-fourth

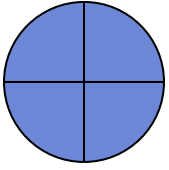
- 1. _____
- 2. _____
- 3. _____
- 4. _____
- 5. _____
- 6. _____
- 7. _____
- 8. _____
- 9. _____



Déterminez quelle lettre représente le mieux la partie colorée de la figure.


Réponses

1)



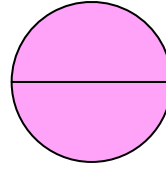
- A. three-quarters
- B. one-fourth
- C. four-quarters

2)




- A. one-half
- B. two-halves
- C. two-quarters

3)



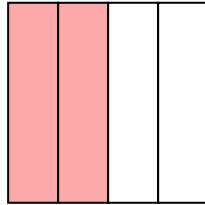
- A. two-quarters
- B. two-halves
- C. three-fourths

4)



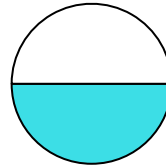
- A. three-fourths
- B. three-fourths
- C. two-halves

5)



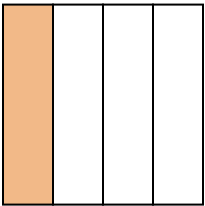
- A. four-quarters
- B. one-quarter
- C. two-quarters

6)



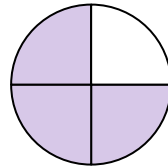
- A. one-half
- B. one-fourth
- C. two-halves

7)



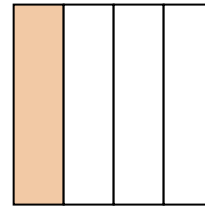
- A. three-fourths
- B. three-fourths
- C. one-fourth

8)



- A. two-quarters
- B. two-halves
- C. three-fourths

9)



- A. three-fourths
- B. one-half
- C. one-fourth

- 1. **C**
- 2. **A**
- 3. **B**
- 4. **C**
- 5. **C**
- 6. **A**
- 7. **C**
- 8. **C**
- 9. **C**