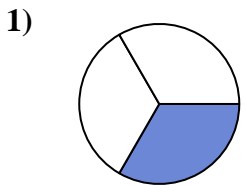


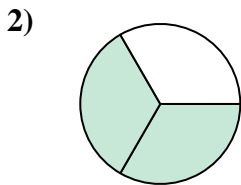


Déterminez quelle lettre représente le mieux la partie colorée de la figure.

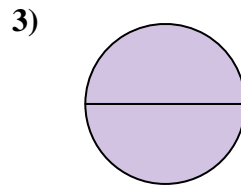
Réponses



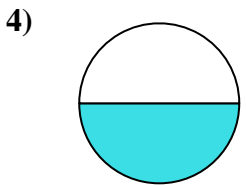
- A. four-quarters
- B. one-quarter
- C. one-third



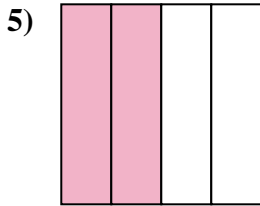
- A. two-thirds
- B. one-half
- C. one-quarter



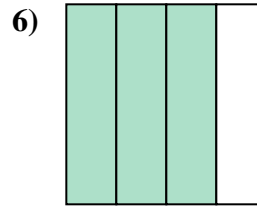
- A. one-fourth
- B. two-quarters
- C. two-halves



- A. one-half
- B. four-quarters
- C. three-fourths



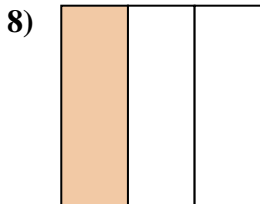
- A. four-quarters
- B. two-halves
- C. two-fourths



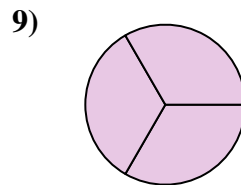
- A. one-fourth
- B. four-quarters
- C. three-quarters



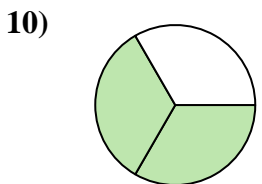
- A. two-fourths
- B. two-halves
- C. one-half



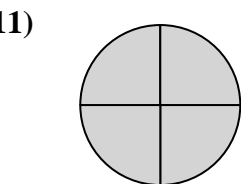
- A. two-fourths
- B. one-third
- C. three-fourths



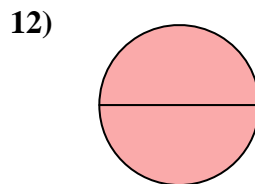
- A. three-thirds
- B. one-half
- C. three-quarters



- A. three-fourths
- B. two-thirds
- C. three-fourths



- A. one-fourth
- B. four-quarters
- C. one-half



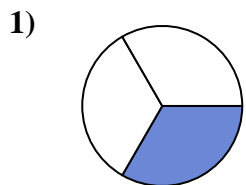
- A. two-halves
- B. two-fourths
- C. three-fourths

- 1. \_\_\_\_\_
- 2. \_\_\_\_\_
- 3. \_\_\_\_\_
- 4. \_\_\_\_\_
- 5. \_\_\_\_\_
- 6. \_\_\_\_\_
- 7. \_\_\_\_\_
- 8. \_\_\_\_\_
- 9. \_\_\_\_\_
- 10. \_\_\_\_\_
- 11. \_\_\_\_\_
- 12. \_\_\_\_\_

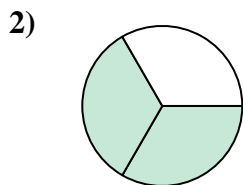


Déterminez quelle lettre représente le mieux la partie colorée de la figure.

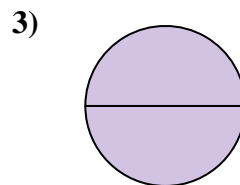
**Réponses**



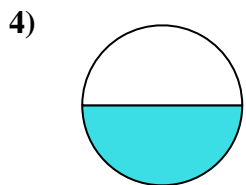
- A. four-quarters
- B. one-quarter
- C. one-third



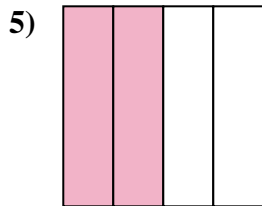
- A. two-thirds
- B. one-half
- C. one-quarter



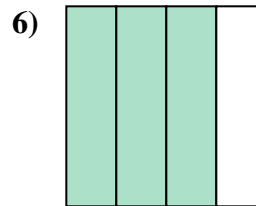
- A. one-fourth
- B. two-quarters
- C. two-halves



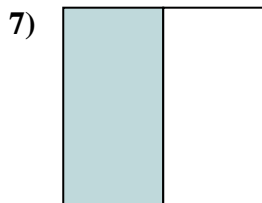
- A. one-half
- B. four-quarters
- C. three-fourths



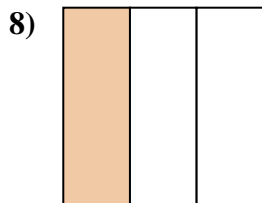
- A. four-quarters
- B. two-halves
- C. two-fourths



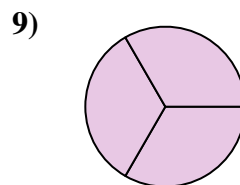
- A. one-fourth
- B. four-quarters
- C. three-quarters



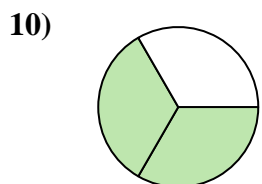
- A. two-fourths
- B. two-halves
- C. one-half



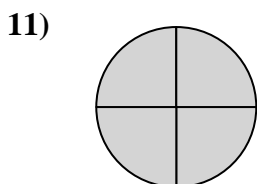
- A. two-fourths
- B. one-third
- C. three-fourths



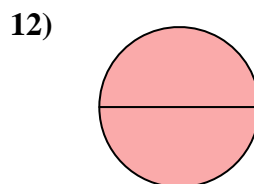
- A. three-thirds
- B. one-half
- C. three-quarters



- A. three-fourths
- B. two-thirds
- C. three-fourths



- A. one-fourth
- B. four-quarters
- C. one-half



- A. two-halves
- B. two-fourths
- C. three-fourths

- 1.   **C**
- 2.   **A**
- 3.   **C**
- 4.   **A**
- 5.   **C**
- 6.   **C**
- 7.   **C**
- 8.   **B**
- 9.   **A**
- 10.   **B**
- 11.   **B**
- 12.   **A**