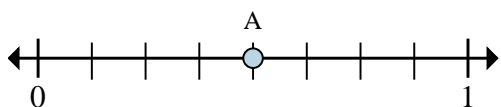




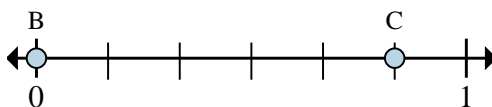
Résoudre chaque problème.

Ex)



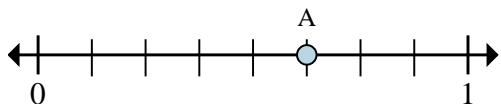
- a. This numberline is divided into how many pieces?  
b. What is the location of A (written as a fraction)?

1)



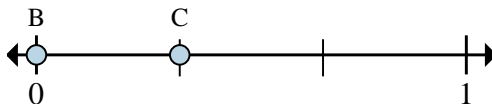
- a. On this numberline what is the value of 0 written as a fraction?  
b. On this numberline from B to C is how far (written as a fraction)?

2)



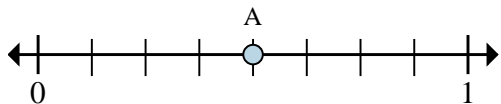
- a. This numberline is divided into how many pieces?  
b. What is the location of A (written as a fraction)?

3)



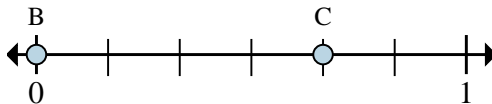
- a. On this numberline what is the value of 0 written as a fraction?  
b. On this numberline from B to C is how far (written as a fraction)?

4)



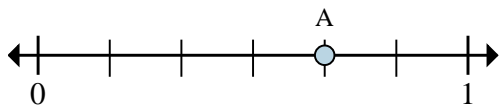
- a. This numberline is divided into how many pieces?  
b. What is the location of A (written as a fraction)?

5)



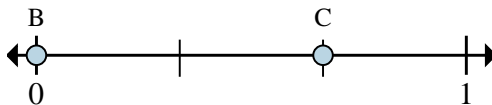
- a. On this numberline what is the value of 0 written as a fraction?  
b. On this numberline from B to C is how far (written as a fraction)?

6)



- a. This numberline is divided into how many pieces?  
b. What is the location of A (written as a fraction)?

7)



- a. On this numberline what is the value of 1 written as a fraction?  
b. On this numberline from B to C is how far (written as a fraction)?

**Réponses**Ex. 8  $\frac{4}{8}$ 

1. \_\_\_\_\_

2. \_\_\_\_\_

3. \_\_\_\_\_

4. \_\_\_\_\_

5. \_\_\_\_\_

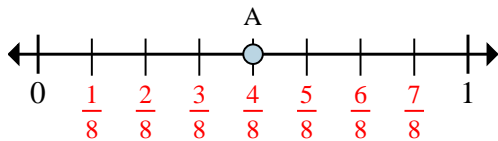
6. \_\_\_\_\_

7. \_\_\_\_\_



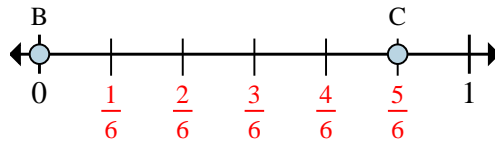
Résoudre chaque problème.

Ex)



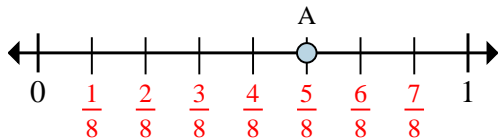
- a. This numberline is divided into how many pieces?  
b. What is the location of A (written as a fraction)?

1)



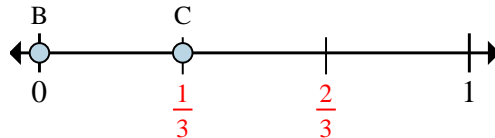
- a. On this numberline what is the value of 0 written as a fraction?  
b. On this numberline from B to C is how far (written as a fraction)?

2)



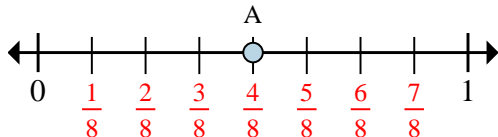
- a. This numberline is divided into how many pieces?  
b. What is the location of A (written as a fraction)?

3)



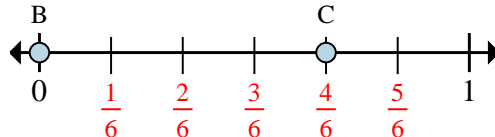
- a. On this numberline what is the value of 0 written as a fraction?  
b. On this numberline from B to C is how far (written as a fraction)?

4)



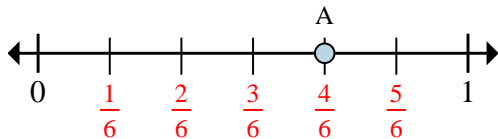
- a. This numberline is divided into how many pieces?  
b. What is the location of A (written as a fraction)?

5)



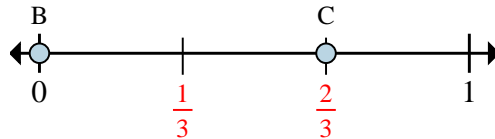
- a. On this numberline what is the value of 0 written as a fraction?  
b. On this numberline from B to C is how far (written as a fraction)?

6)



- a. This numberline is divided into how many pieces?  
b. What is the location of A (written as a fraction)?

7)



- a. On this numberline what is the value of 1 written as a fraction?  
b. On this numberline from B to C is how far (written as a fraction)?

**Réponses**

Ex.	<u>8</u>	<u>4/8</u>
1.	<u>0/6</u>	<u>5/6</u>
2.	<u>8</u>	<u>5/8</u>
3.	<u>0/3</u>	<u>1/3</u>
4.	<u>8</u>	<u>4/8</u>
5.	<u>0/6</u>	<u>4/6</u>
6.	<u>6</u>	<u>4/6</u>
7.	<u>3/3</u>	<u>2/3</u>