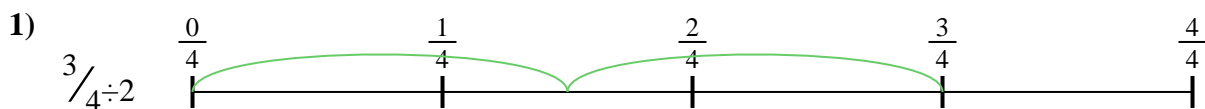




Utilisez la droite numérique pour résoudre chaque problème. Le premier est résolu.

**Réponses**

1. \_\_\_\_\_

2. \_\_\_\_\_



3. \_\_\_\_\_

4. \_\_\_\_\_



5. \_\_\_\_\_

6. \_\_\_\_\_


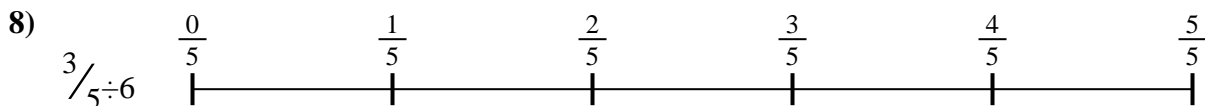
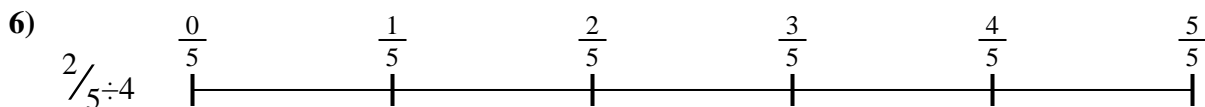


7. \_\_\_\_\_

8. \_\_\_\_\_



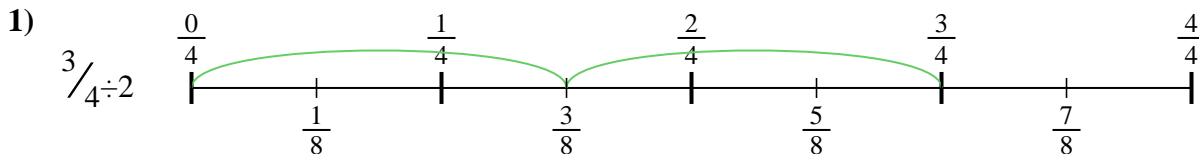
9. \_\_\_\_\_



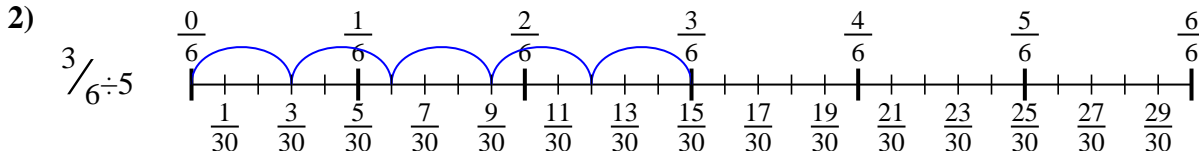


Utilisez la droite numérique pour résoudre chaque problème. Le premier est résolu.

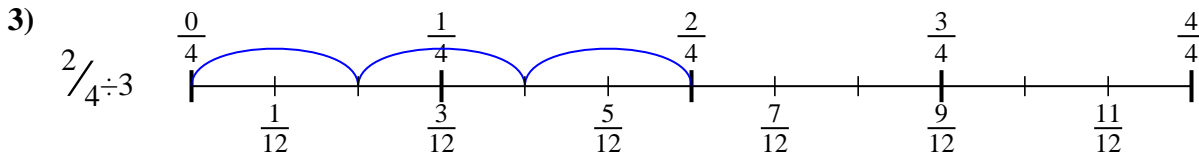
**Réponses**



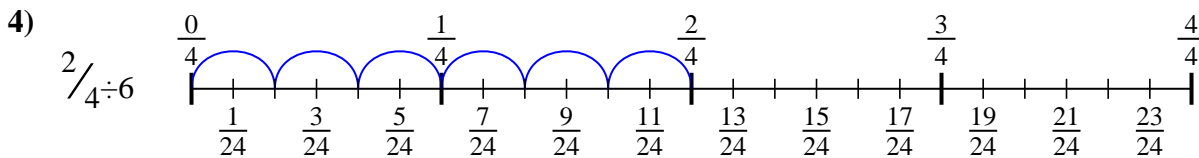
1.  $\frac{3}{8}$



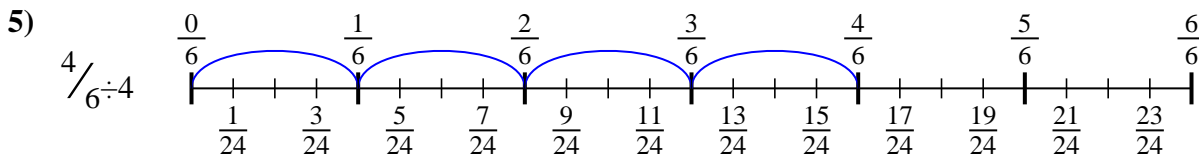
2.  $\frac{3}{30}$



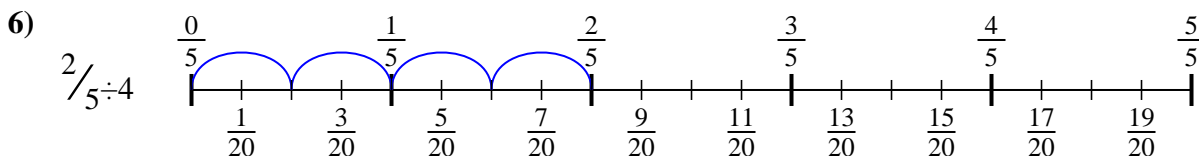
3.  $\frac{2}{12}$



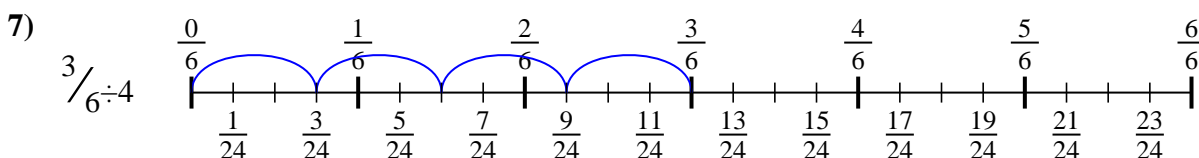
4.  $\frac{2}{24}$



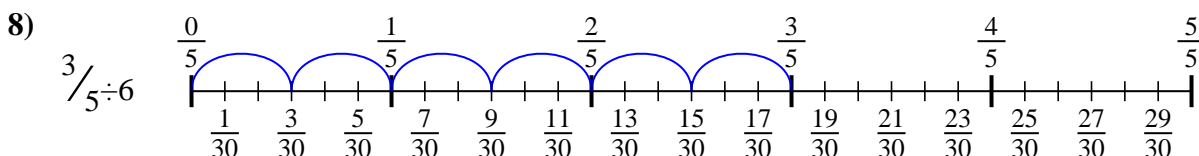
5.  $\frac{4}{24}$



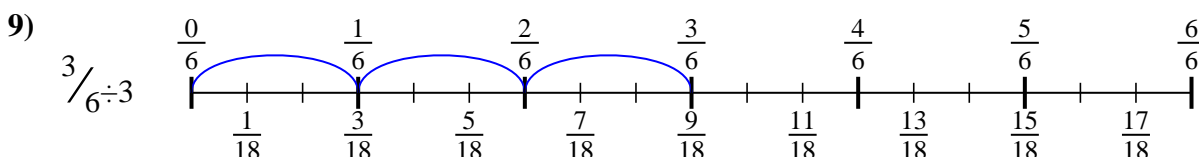
6.  $\frac{2}{20}$



7.  $\frac{3}{24}$



8.  $\frac{3}{30}$



9.  $\frac{3}{18}$



Utilisez la droite numérique pour résoudre chaque problème. Le premier est résolu.

**Réponses**

$$\frac{3}{24}$$

$$\frac{4}{24}$$

$$\frac{3}{18}$$

$$\frac{3}{30}$$

$$\frac{2}{12}$$

$$\frac{2}{20}$$

$$\frac{3}{8}$$

$$\frac{3}{30}$$

$$\frac{2}{24}$$

1. \_\_\_\_\_
2. \_\_\_\_\_
3. \_\_\_\_\_
4. \_\_\_\_\_
5. \_\_\_\_\_
6. \_\_\_\_\_
7. \_\_\_\_\_
8. \_\_\_\_\_
9. \_\_\_\_\_

