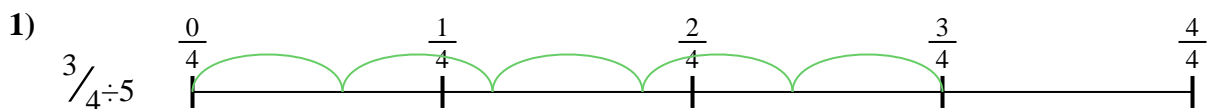




Utilisez la droite numérique pour résoudre chaque problème. Le premier est résolu.

Réponses

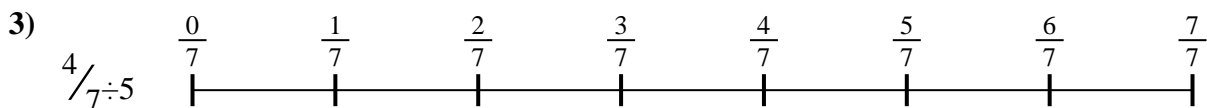
1. _____

2. _____




3. _____

4. _____



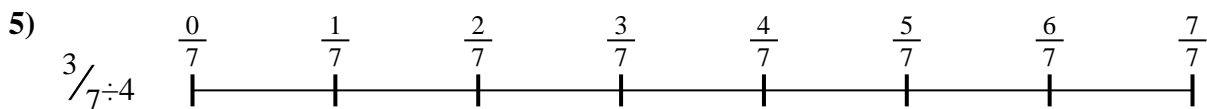
5. _____

6. _____

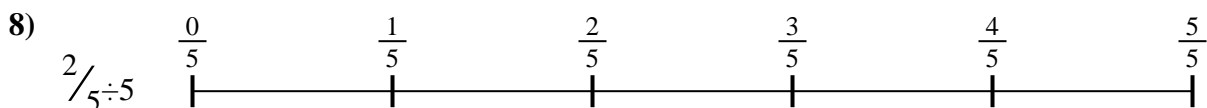
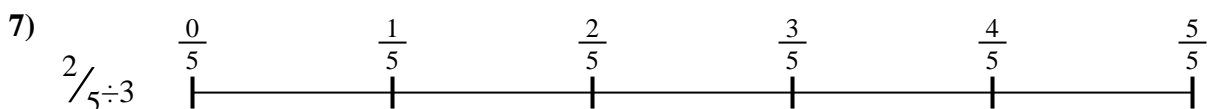
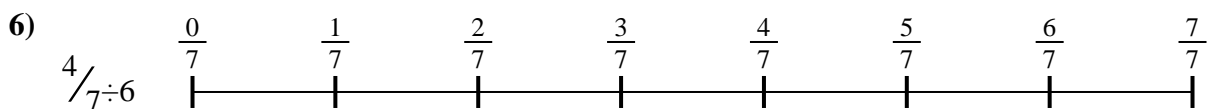


7. _____

8. _____



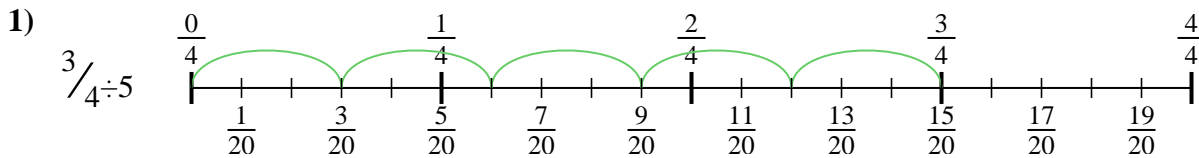
9. _____



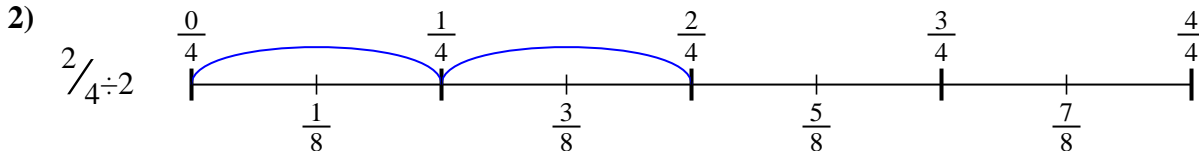


Utilisez la droite numérique pour résoudre chaque problème. Le premier est résolu.

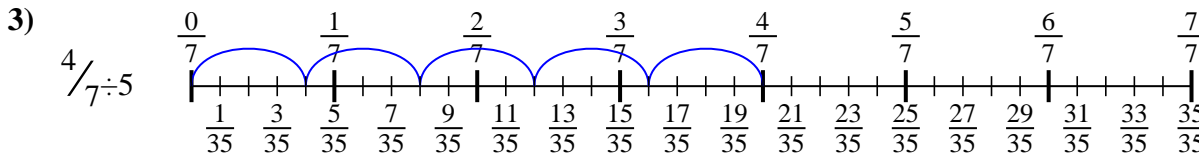
Réponses



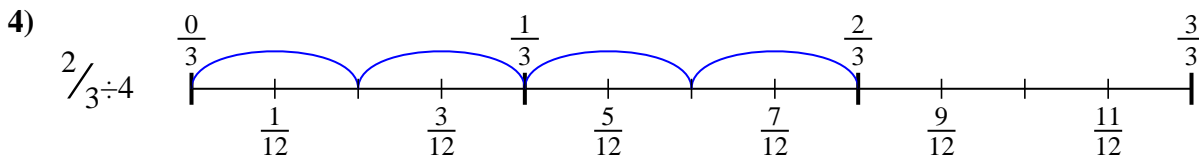
1. $\frac{3}{20}$



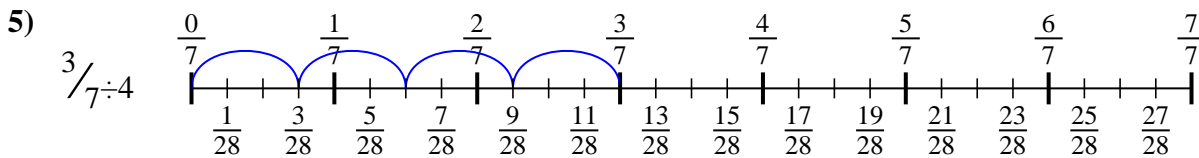
2. $\frac{2}{8}$



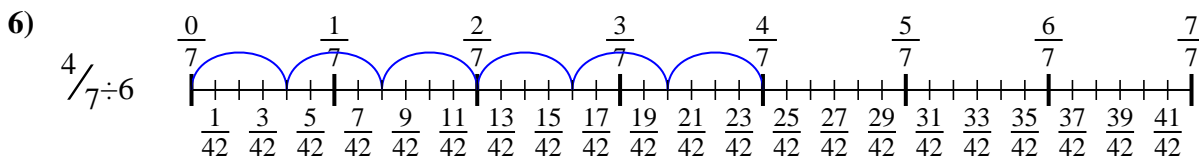
3. $\frac{4}{35}$



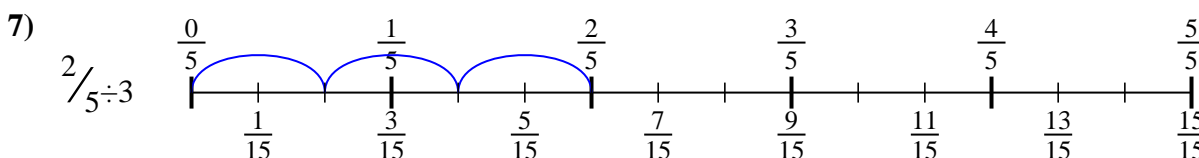
4. $\frac{2}{12}$



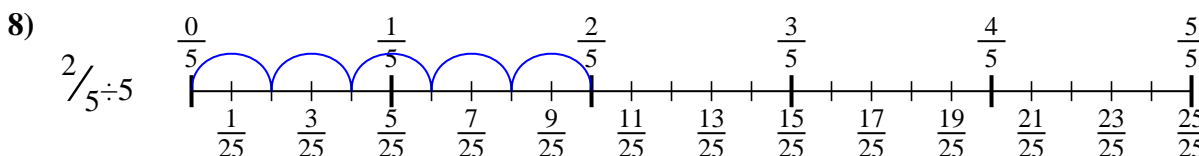
5. $\frac{3}{28}$



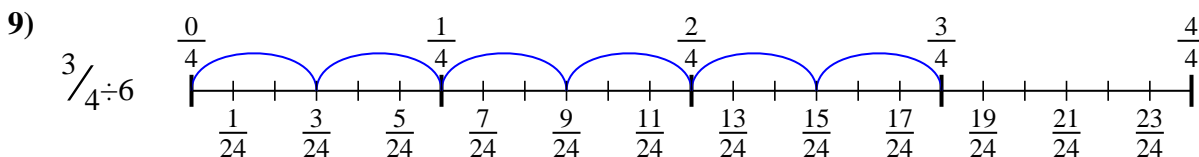
6. $\frac{4}{42}$



7. $\frac{2}{15}$



8. $\frac{2}{25}$



9. $\frac{3}{24}$



Utilisez la droite numérique pour résoudre chaque problème. Le premier est résolu.

Réponses

$\frac{4}{42}$

$\frac{3}{28}$

$\frac{2}{8}$

$\frac{3}{20}$

$\frac{2}{25}$

$\frac{3}{24}$

$\frac{2}{15}$

$\frac{4}{35}$

$\frac{2}{12}$

1. _____

2. _____

3. _____

4. _____

5. _____

6. _____

7. _____

8. _____

9. _____

