




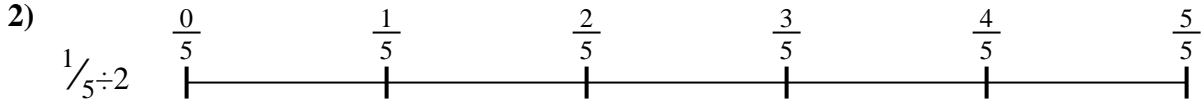
Utilisez la droite numérique pour résoudre chaque problème. Le premier est résolu.

Réponses



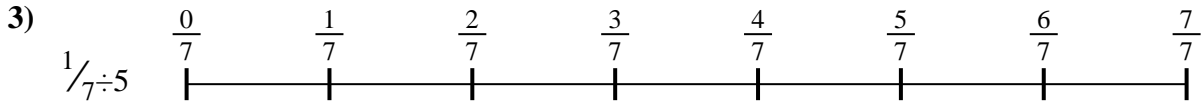
1. _____

2. _____




3. _____

4. _____



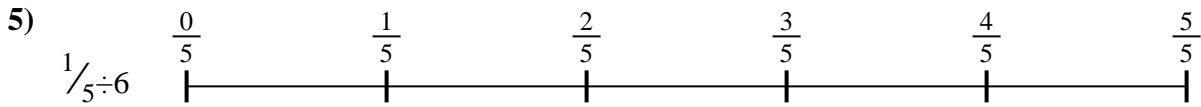
5. _____

6. _____

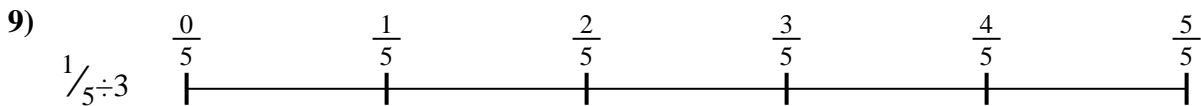



7. _____

8. _____



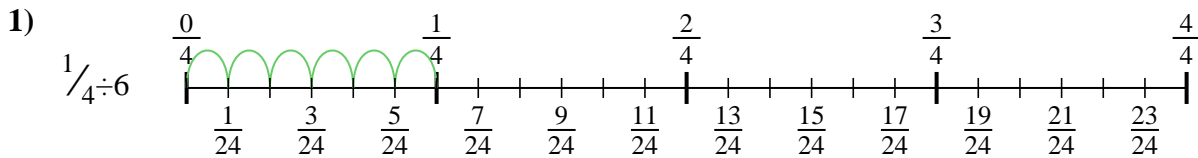
9. _____



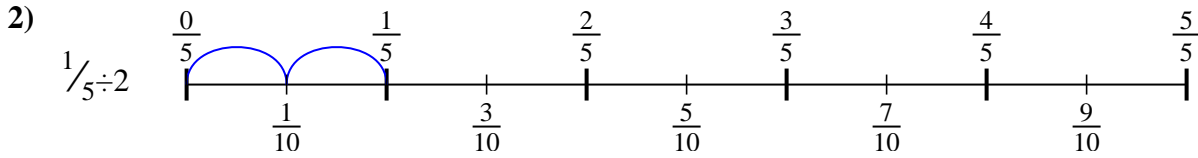


Utilisez la droite numérique pour résoudre chaque problème. Le premier est résolu.

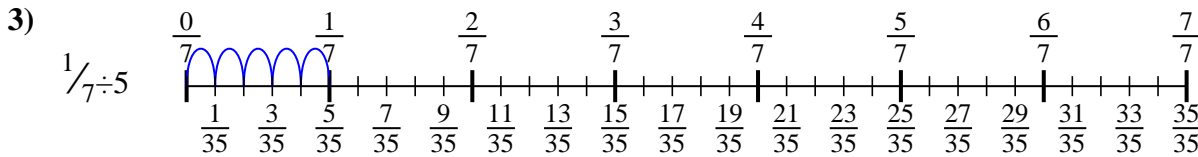
Réponses



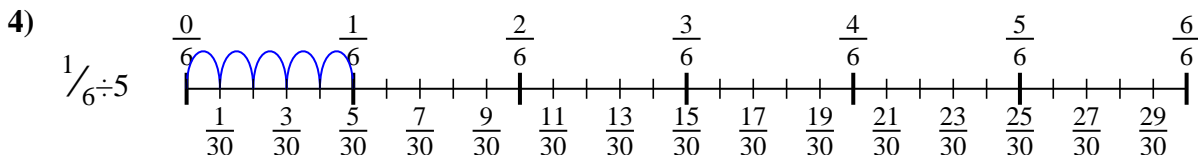
1. $\frac{1}{24}$



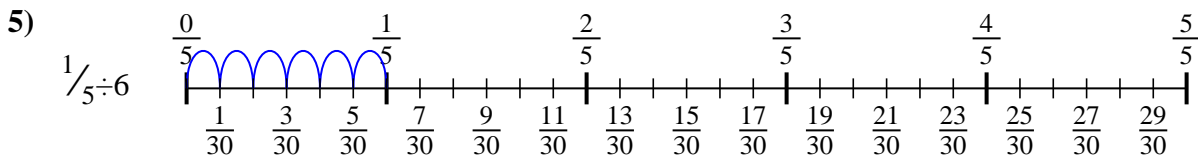
2. $\frac{1}{10}$



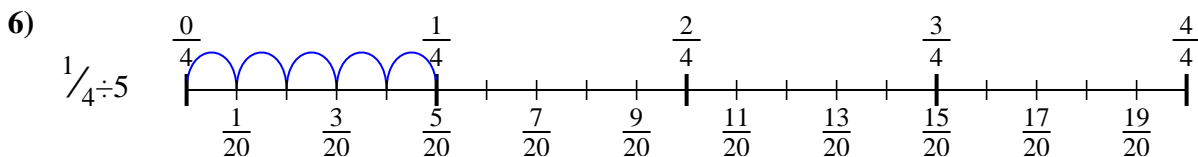
3. $\frac{1}{35}$



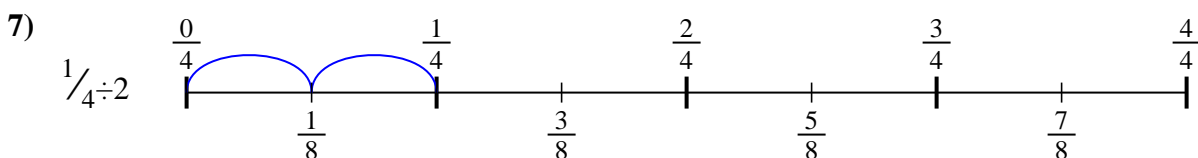
4. $\frac{1}{30}$



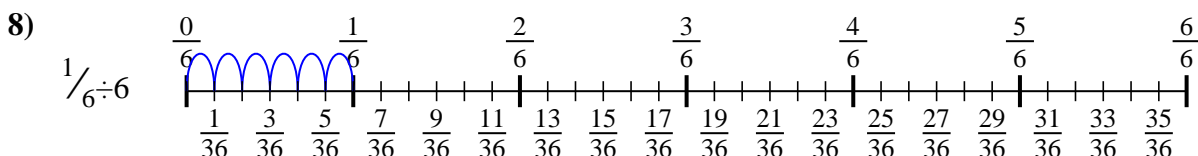
5. $\frac{1}{30}$



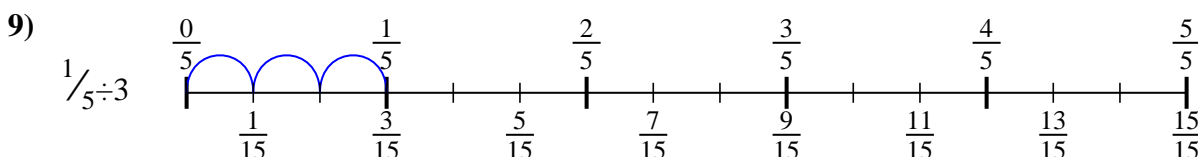
6. $\frac{1}{20}$



7. $\frac{1}{8}$



8. $\frac{1}{36}$



9. $\frac{1}{15}$



Utilisez la droite numérique pour résoudre chaque problème. Le premier est résolu.

Réponses

$\frac{1}{30}$

$\frac{1}{36}$

$\frac{1}{20}$

$\frac{1}{8}$

$\frac{1}{15}$

$\frac{1}{24}$

$\frac{1}{30}$

$\frac{1}{35}$

$\frac{1}{10}$

1. _____

2. _____

3. _____

4. _____

5. _____

6. _____

7. _____

8. _____

9. _____

