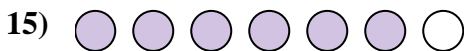
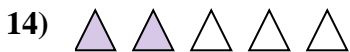

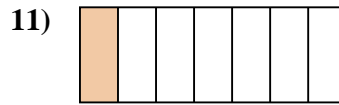
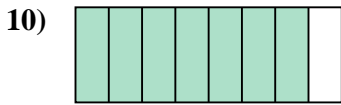
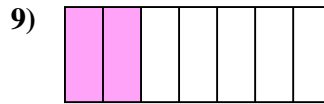
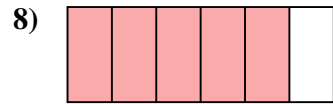
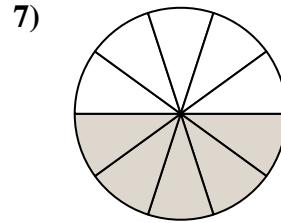
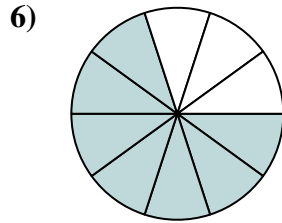
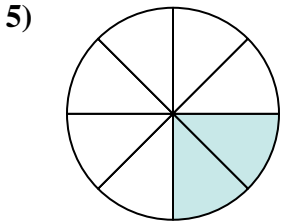







Déterminez si la valeur indiquée est 'supérieure', 'inférieure', ou 'égale' a un demi.

Réponses



1. _____

2. _____

3. _____

4. _____

5. _____

6. _____

7. _____

8. _____

9. _____

10. _____

11. _____

12. _____

13. _____

14. _____

15. _____

16. _____

17. _____

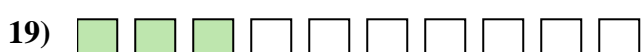

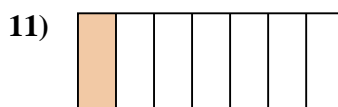


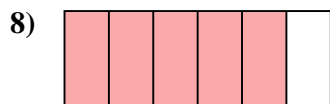
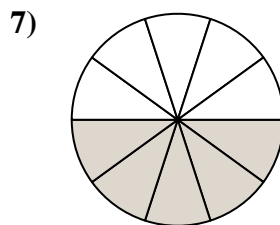
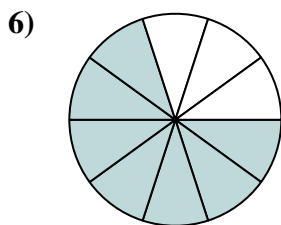
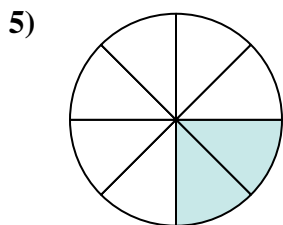




18. _____

19. _____

20. _____



Déterminez si la valeur indiquée est 'supérieure', 'inférieure', ou 'égale' a un demi.



Réponses

1. inférieur

2. inférieur

3. supérieur

4. supérieur

5. inférieur

6. supérieur

7. égal

8. supérieur

9. inférieur

10. supérieur

11. inférieur

12. supérieur

13. inférieur

14. inférieur

15. supérieur

16. égal

17. inférieur

18. inférieur

19. inférieur

20. inférieur