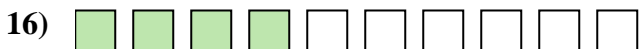
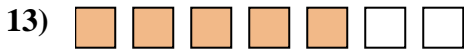
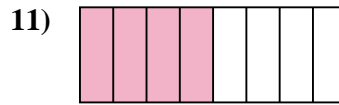
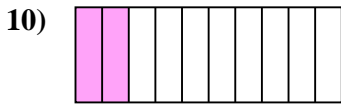
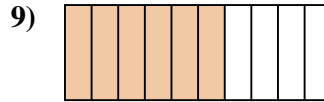
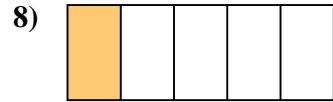
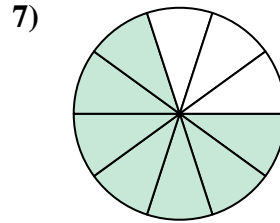
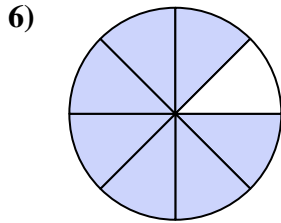
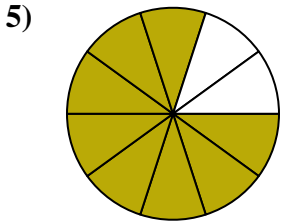


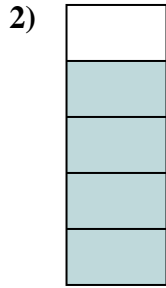




Déterminez si la valeur indiquée est 'supérieure', 'inférieure', ou 'égale' a un demi.

Réponses



1. _____

2. _____

3. _____

4. _____

5. _____

6. _____

7. _____

8. _____

9. _____

10. _____

11. _____

12. _____

13. _____

14. _____

15. _____

16. _____

17. _____

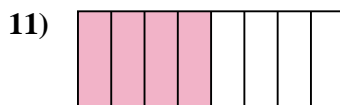
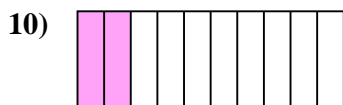
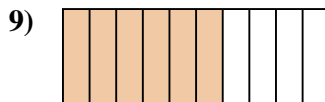

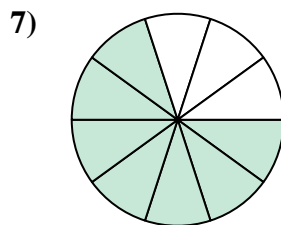
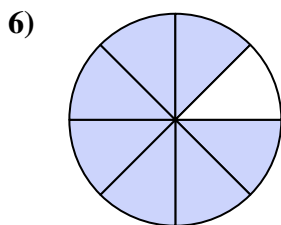
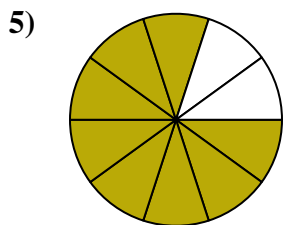


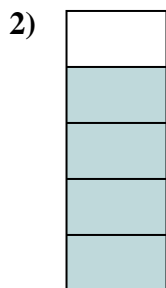

18. _____

19. _____

20. _____



Déterminez si la valeur indiquée est 'supérieure', 'inférieure', ou 'égale' a un demi.



Réponses

1. inférieur

2. supérieur

3. inférieur

4. inférieur

5. supérieur

6. supérieur

7. supérieur

8. inférieur

9. supérieur

10. inférieur

11. égal

12. supérieur

13. supérieur

14. égal

15. égal

16. inférieur

17. inférieur

18. supérieur

19. inférieur

20. inférieur