
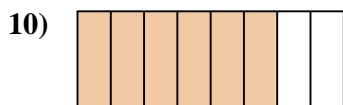
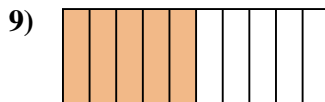

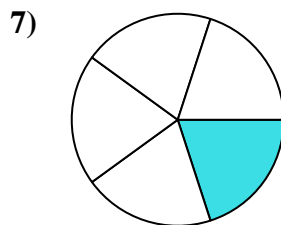
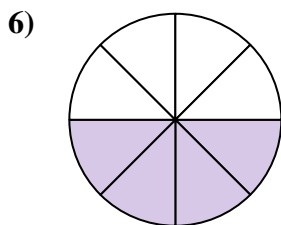
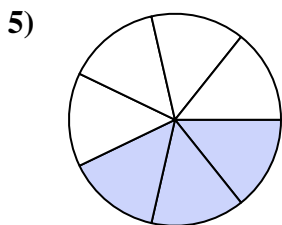

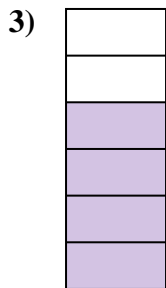





Déterminez si la valeur indiquée est 'supérieure', 'inférieure', ou 'égale' a un demi.

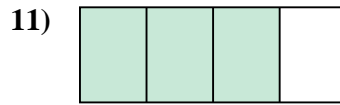
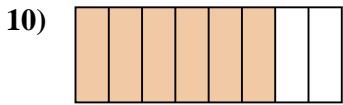
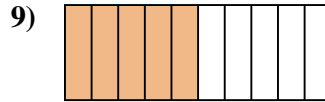
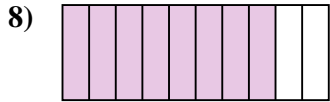
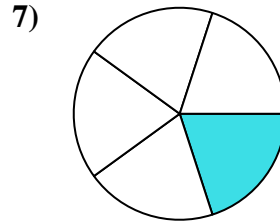
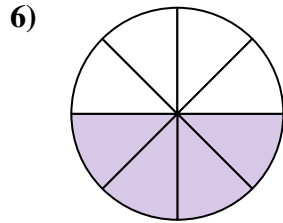
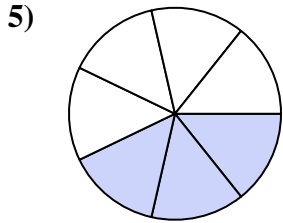

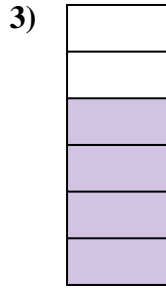

Réponses



1. _____
2. _____
3. _____
4. _____
5. _____
6. _____
7. _____
8. _____
9. _____
10. _____
11. _____
12. _____
13. _____
14. _____
15. _____
16. _____
17. _____
18. _____
19. _____
20. _____



Déterminez si la valeur indiquée est 'supérieure', 'inférieure', ou 'égale' a un demi.



Réponses

1. supérieur

2. inférieur

3. supérieur

4. inférieur

5. inférieur

6. égal

7. inférieur

8. supérieur

9. égal

10. supérieur

11. supérieur

12. inférieur

13. supérieur

14. supérieur

15. inférieur

16. supérieur

17. inférieur

18. inférieur

19. inférieur

20. supérieur