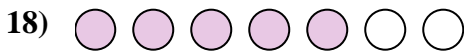
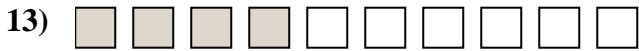
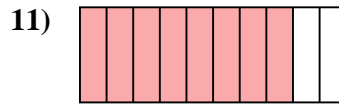
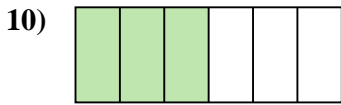


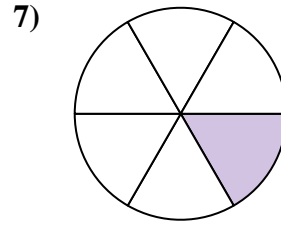
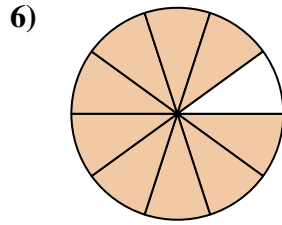
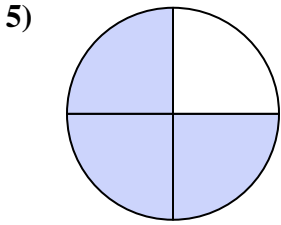

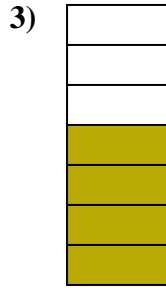





Déterminez si la valeur indiquée est 'supérieure', 'inférieure', ou 'égale' a un demi.


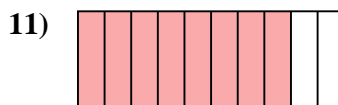
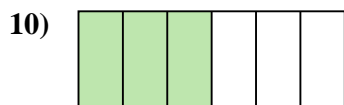

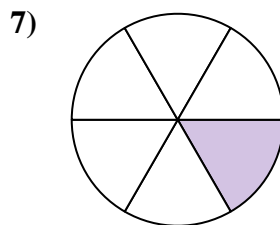
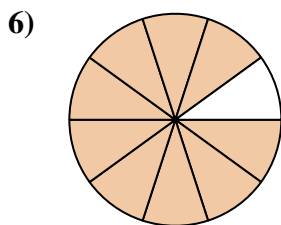
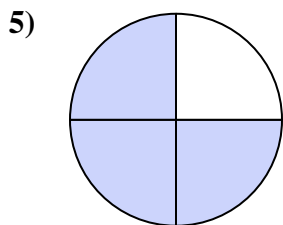




Réponses



1. _____
2. _____
3. _____
4. _____
5. _____
6. _____
7. _____
8. _____
9. _____
10. _____
11. _____
12. _____
13. _____
14. _____
15. _____
16. _____
17. _____
18. _____
19. _____
20. _____



Déterminez si la valeur indiquée est 'supérieure', 'inférieure', ou 'égale' a un demi.



Réponses

1. inférieur

2. supérieur

3. supérieur

4. égal

5. supérieur

6. supérieur

7. inférieur

8. supérieur

9. inférieur

10. égal

11. supérieur

12. égal

13. inférieur

14. inférieur

15. inférieur

16. inférieur

17. supérieur

18. supérieur

19. supérieur

20. supérieur