
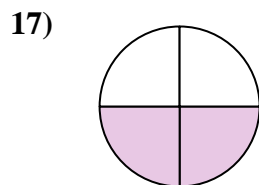
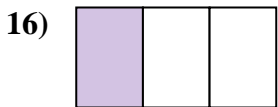
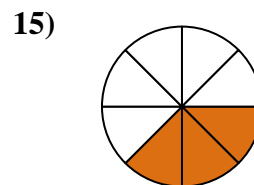
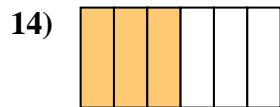
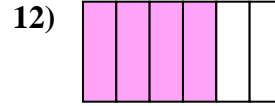
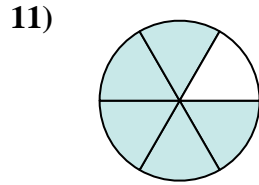
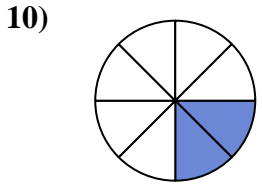
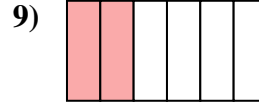
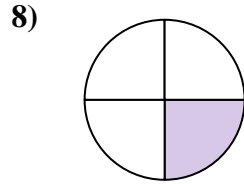
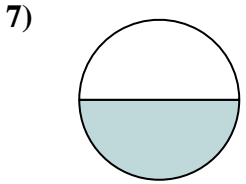
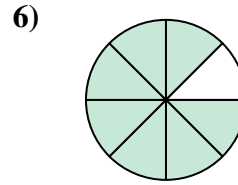
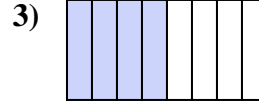
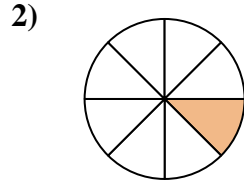
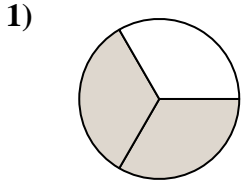




Ecrire la fraction de la représentation de la partie colorée du camembert.

**Réponses**


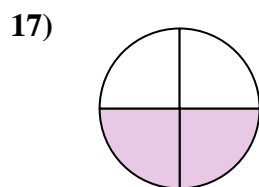

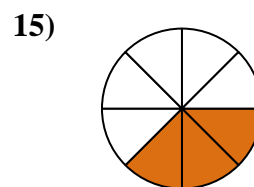
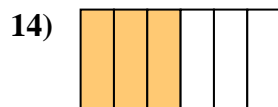
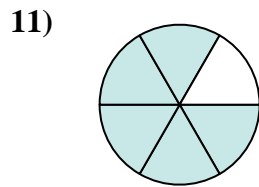
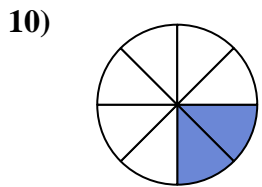
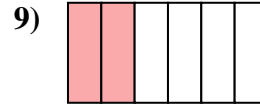
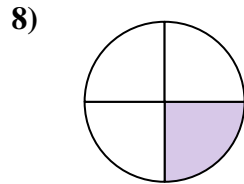
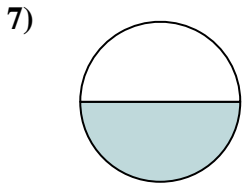
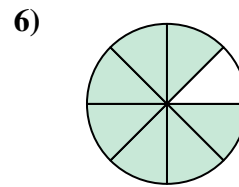
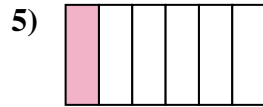
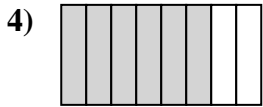
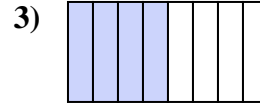
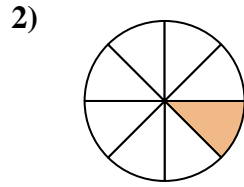
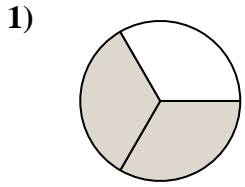


1. \_\_\_\_\_
2. \_\_\_\_\_
3. \_\_\_\_\_
4. \_\_\_\_\_
5. \_\_\_\_\_
6. \_\_\_\_\_
7. \_\_\_\_\_
8. \_\_\_\_\_
9. \_\_\_\_\_
10. \_\_\_\_\_
11. \_\_\_\_\_
12. \_\_\_\_\_
13. \_\_\_\_\_
14. \_\_\_\_\_
15. \_\_\_\_\_
16. \_\_\_\_\_
17. \_\_\_\_\_
18. \_\_\_\_\_



Ecrire la fraction de la représentation de la partie colorée du camembert.

**Réponses**



1.  $\frac{2}{3}$
2.  $\frac{1}{8}$
3.  $\frac{4}{8}$
4.  $\frac{6}{8}$
5.  $\frac{1}{6}$
6.  $\frac{7}{8}$
7.  $\frac{1}{2}$
8.  $\frac{1}{4}$
9.  $\frac{2}{6}$
10.  $\frac{2}{8}$
11.  $\frac{5}{6}$
12.  $\frac{4}{6}$
13.  $\frac{5}{8}$
14.  $\frac{3}{6}$
15.  $\frac{3}{8}$
16.  $\frac{1}{3}$
17.  $\frac{2}{4}$
18.  $\frac{3}{4}$