
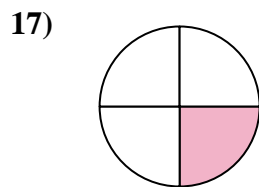

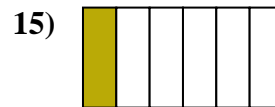
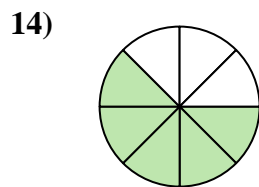
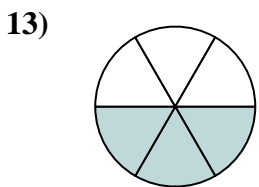
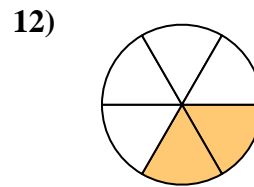
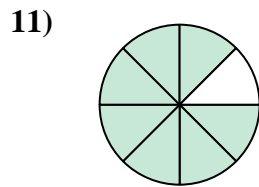

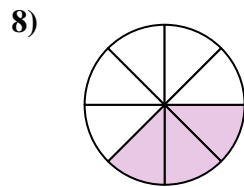
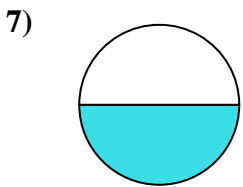
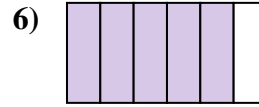
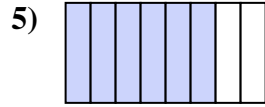
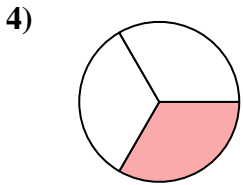
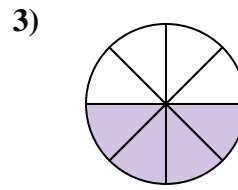
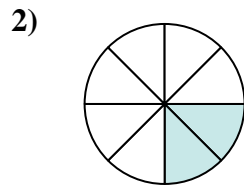
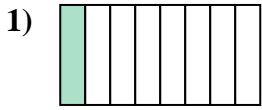




Ecrire la fraction de la représentation de la partie colorée du camembert.

Réponses


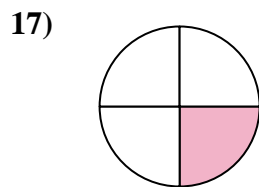

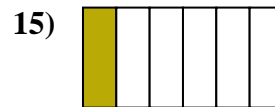
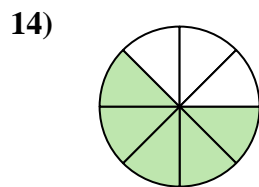
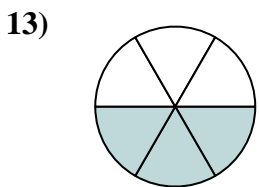
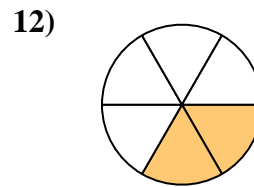
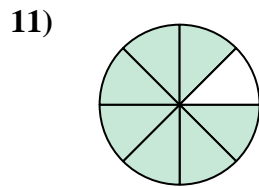

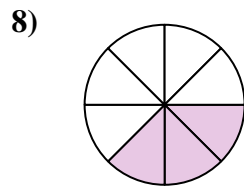
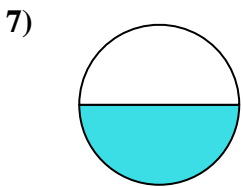
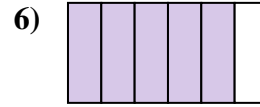
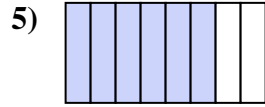
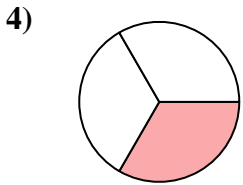
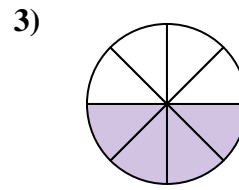
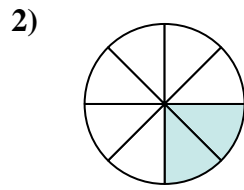
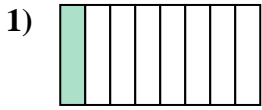


1. _____
2. _____
3. _____
4. _____
5. _____
6. _____
7. _____
8. _____
9. _____
10. _____
11. _____
12. _____
13. _____
14. _____
15. _____
16. _____
17. _____
18. _____



Ecrire la fraction de la représentation de la partie colorée du camembert.

Réponses



1. 1/8

2. 2/8

3. 4/8

4. 1/3

5. 6/8

6. 5/6

7. 1/2

8. 3/8

9. 2/3

10. 4/6

11. 7/8

12. 2/6

13. 3/6

14. 5/8

15. 1/6

16. 3/4

17. 1/4

18. 2/4