



Réponses

A coordinate plane with a grid. The x-axis and y-axis are shown with arrows. The grid lines are spaced at intervals of 1 unit. Three points are plotted and labeled: Point A is at (1, 4), Point B is at (4, 1), and Point C is at (1, 1).

1.

2. _____

3. _____

4. _____

5. _____

6.

7.

8.

9.

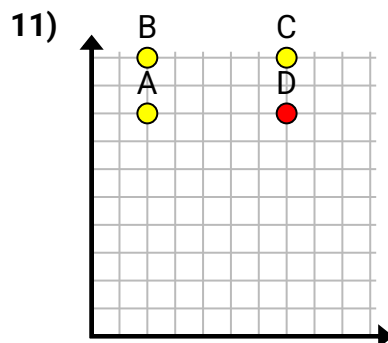
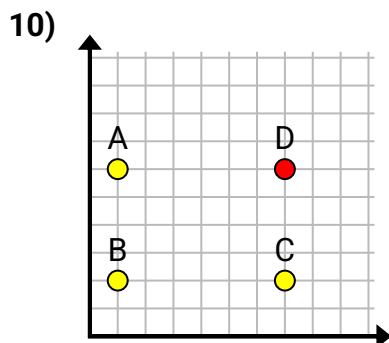
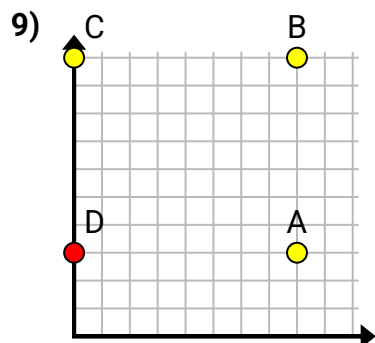
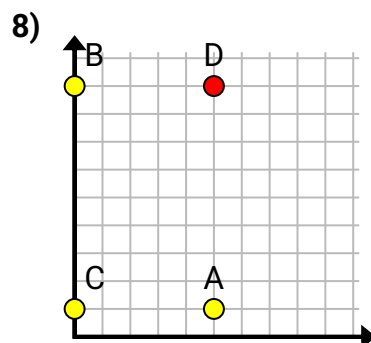
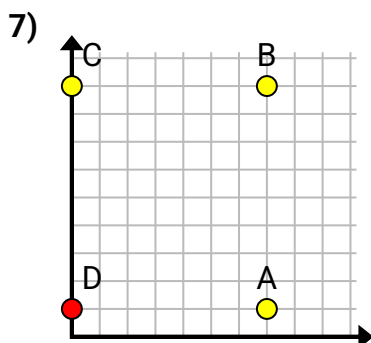
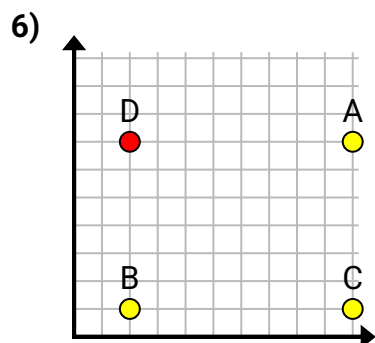
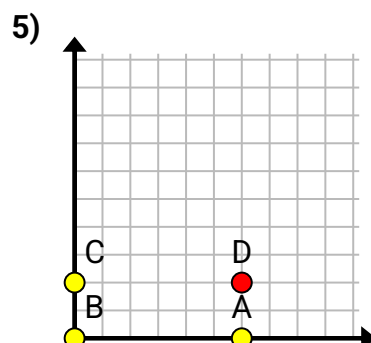
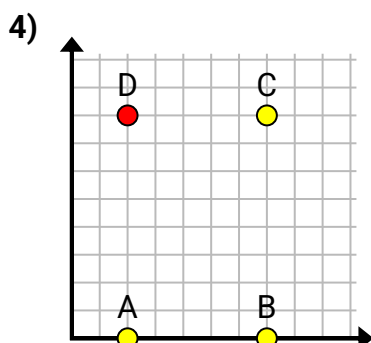
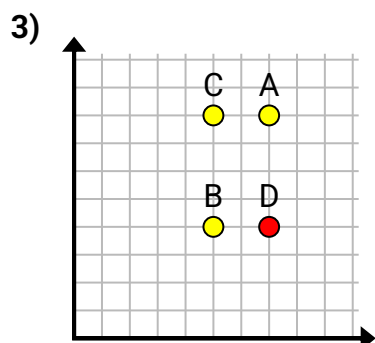
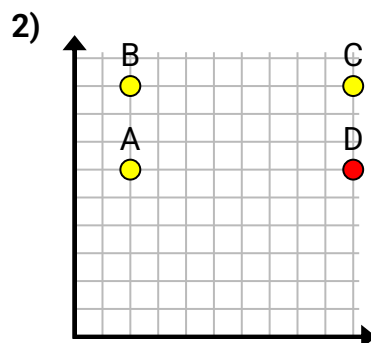
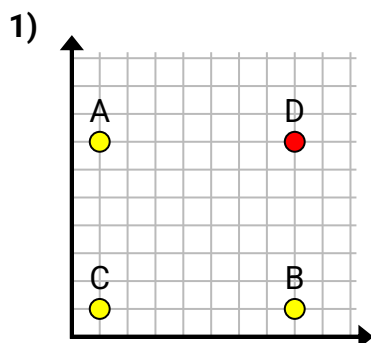
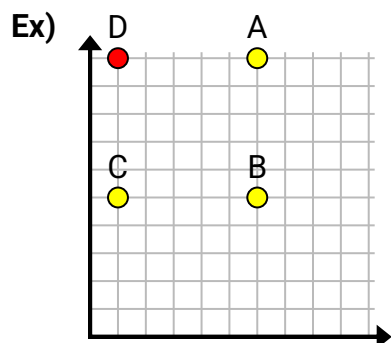
10.

11.

A coordinate plane with a grid. The x-axis and y-axis are shown. Point A is at (1, 1), Point B is at (1, 2), and Point C is at (3, 2).



Trouvez les coordonnées du point D pour faire un rectangle.



Réponses

Ex. (1, 10)1. (8, 7)2. (10, 6)3. (7, 4)4. (2, 8)5. (6, 2)6. (2, 7)7. (0, 1)8. (5, 9)9. (0, 3)10. (7, 6)11. (7, 8)