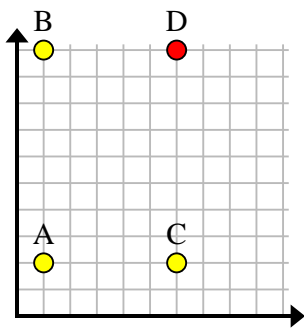




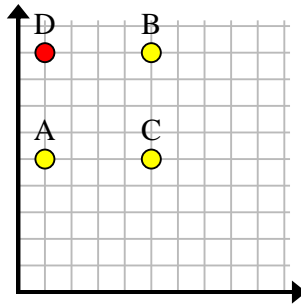


Trouvez les coordonnées du point D pour faire un rectangle.

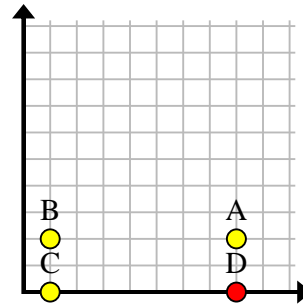
Ex)



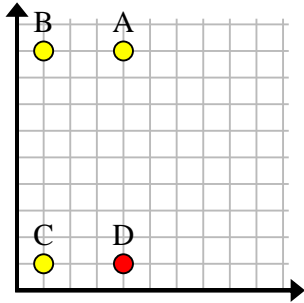
1)



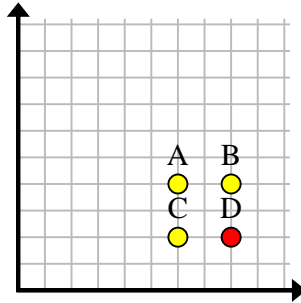
2)



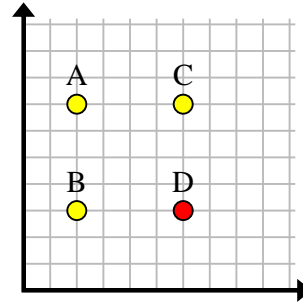
3)



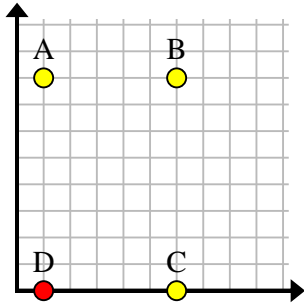
4)



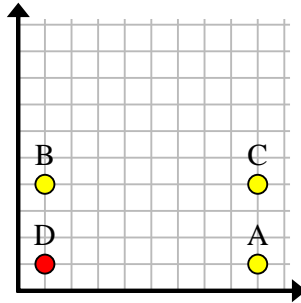
5)



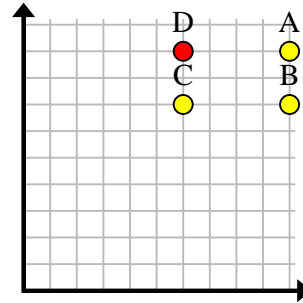
6)



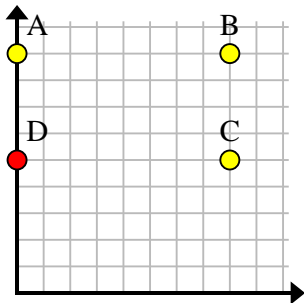
7)



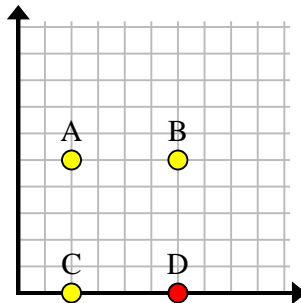
8)



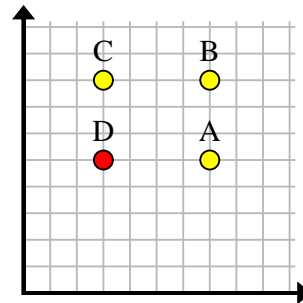
9)



10)



11)

**Réponses**Ex. (6, 10)1. (1, 9)2. (8, 0)3. (4, 1)4. (8, 2)5. (6, 3)6. (1, 0)7. (1, 1)8. (6, 9)9. (0, 5)10. (6, 0)11. (3, 5)