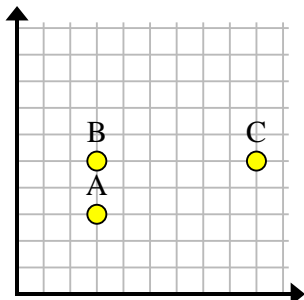


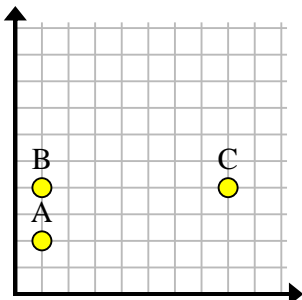


Trouvez les coordonnées du point D pour faire un rectangle.

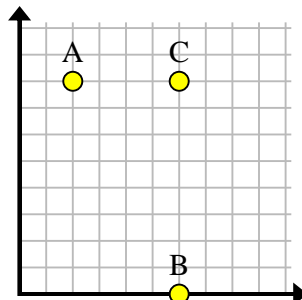
Ex)



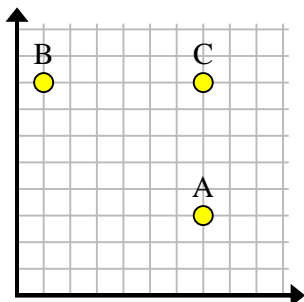
1)



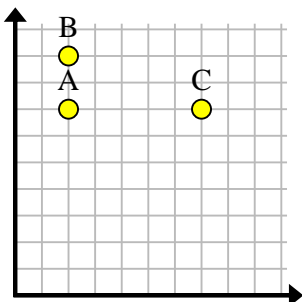
2)



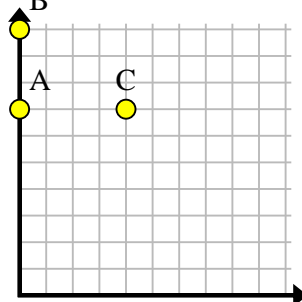
3)



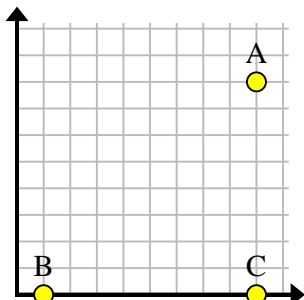
4)



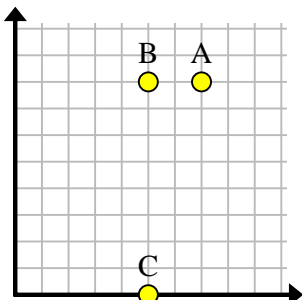
5)



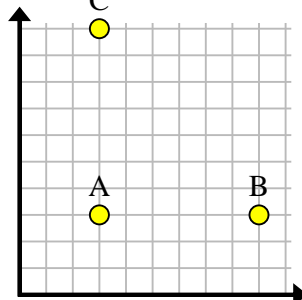
6)



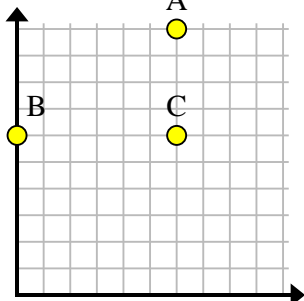
7)



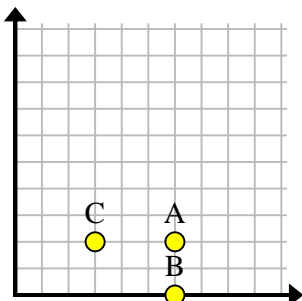
8)



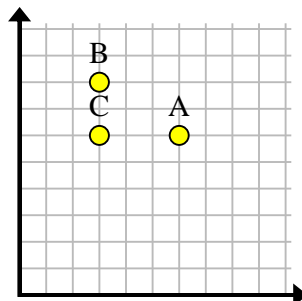
9)



10)



11)

**Réponses**Ex. **(9, 3)**

1. _____

2. _____

3. _____

4. _____

5. _____

6. _____

7. _____

8. _____

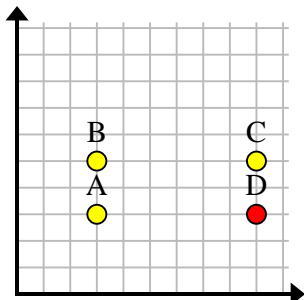
9. _____

10. _____

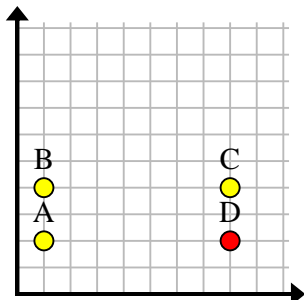
11. _____

Trouvez les coordonnées du point D pour faire un rectangle.

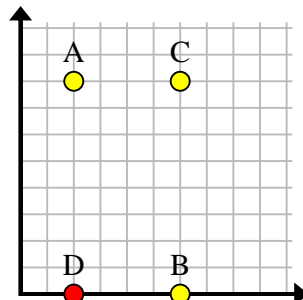
Ex)



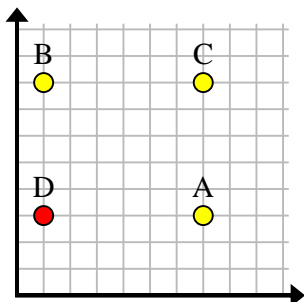
1)



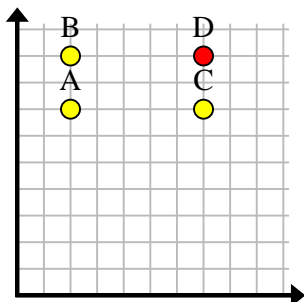
2)



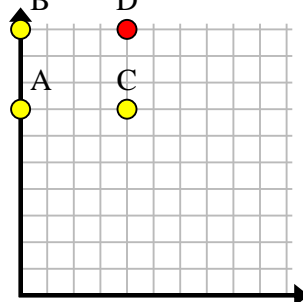
3)



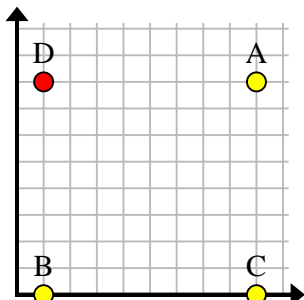
4)



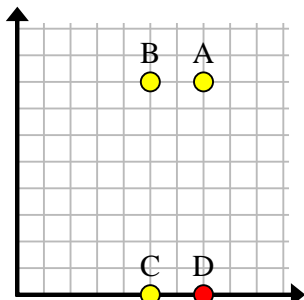
5)



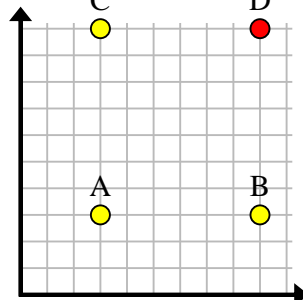
6)



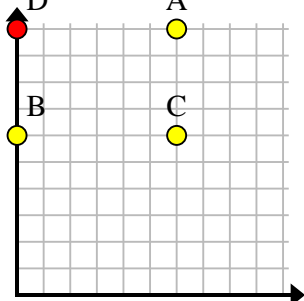
7)



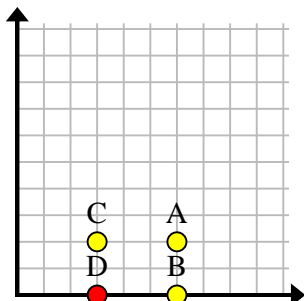
8)



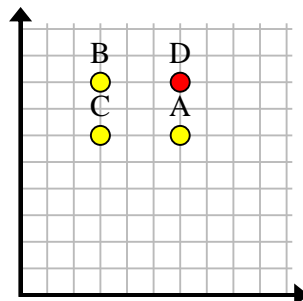
9)



10)



11)



Réponses

Ex. $(9, 3)$

1. **(8, 2)**

2. $(2, 0)$

3. **(1, 3)**

4. **(7, 9)**

5. $(4, 10)$

6. $(1, 8)$

7. $(7, 0)$

8. $(9, 10)$

9. $(0, 10)$

10. $(3, 0)$

11. $(6, 8)$