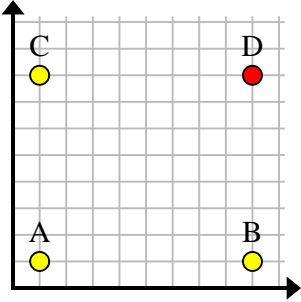


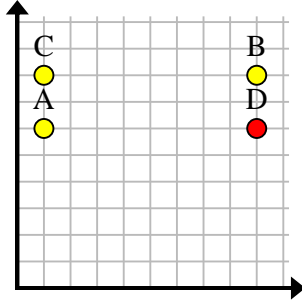


Trouvez les coordonnées du point D pour faire un rectangle.

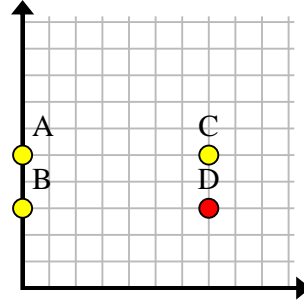
Ex)



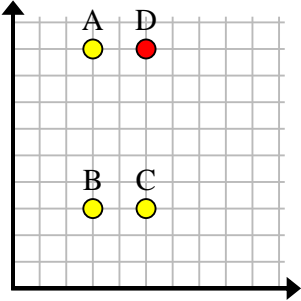
1)



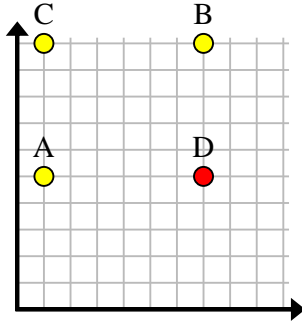
2)



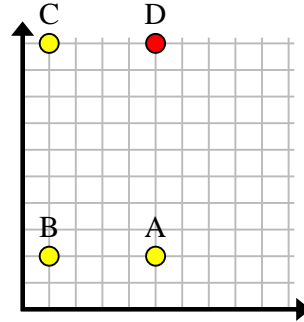
3)



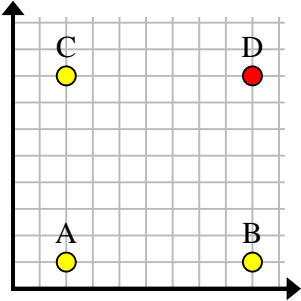
4)



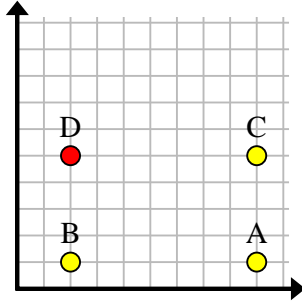
5)



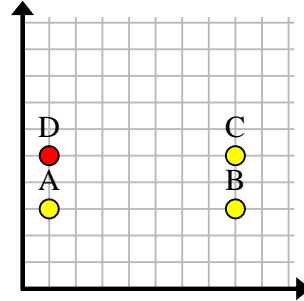
6)



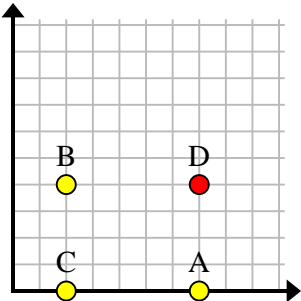
7)



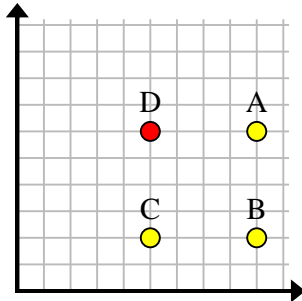
8)



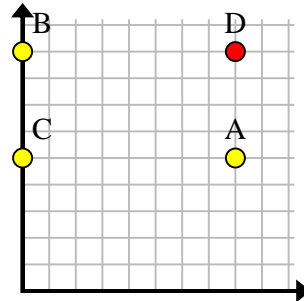
9)



10)



11)

**Réponses**Ex. (9, 8)1. (9, 6)2. (7, 3)3. (5, 9)4. (7, 5)5. (5, 10)6. (9, 8)7. (2, 5)8. (1, 5)9. (7, 4)10. (5, 6)11. (8, 9)