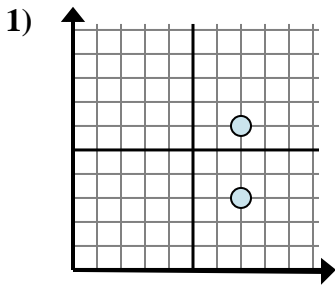


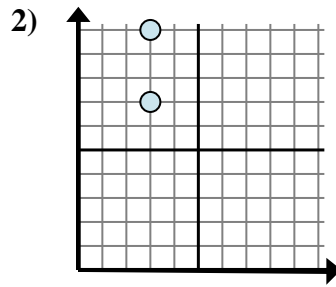


Déterminez quelle expression montre le mieux la distance entre les deux points.

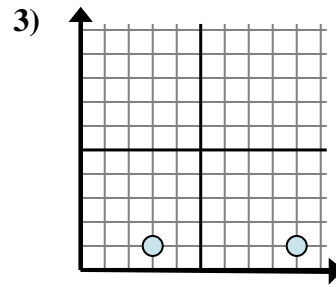
**Réponses**



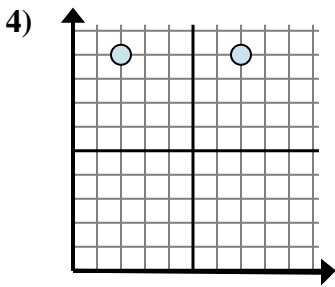
- A.  $6 - 3$
- B.  $3 - 6$
- C.  $7 - 6$
- D.  $7 - 7$



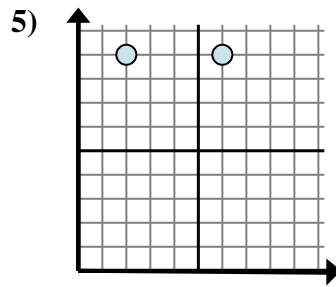
- A.  $3 - 7$
- B.  $10 - 3$
- C.  $10 - 7$
- D.  $7 - 3$



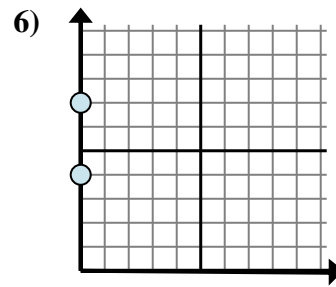
- A.  $9 - 3$
- B.  $1 - 9$
- C.  $3 - 9$
- D.  $9 - 1$



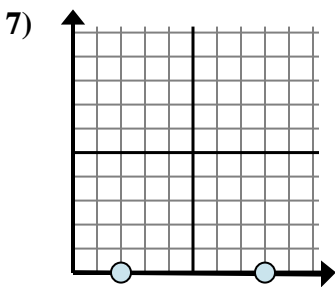
- A.  $7 - 9$
- B.  $9 - 2$
- C.  $9 - 9$
- D.  $7 - 2$



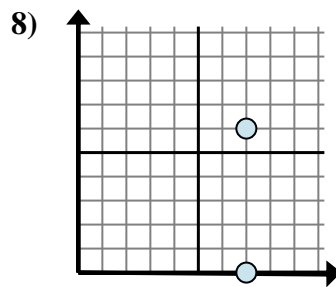
- A.  $6 - 9$
- B.  $9 - 2$
- C.  $6 - 2$
- D.  $2 - 9$



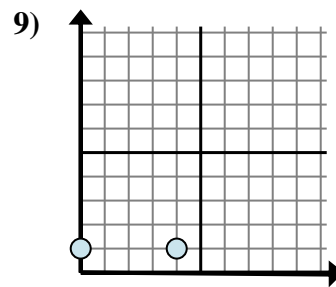
- A.  $0 - 0$
- B.  $0 - 0$
- C.  $7 - 4$
- D.  $0 - 7$



- A.  $8 - 2$
- B.  $2 - 8$
- C.  $0 - 0$
- D.  $8 - 0$



- A.  $0 - 6$
- B.  $0 - 7$
- C.  $7 - 6$
- D.  $6 - 0$



- A.  $0 - 1$
- B.  $1 - 0$
- C.  $4 - 0$
- D.  $1 - 1$

1. \_\_\_\_\_

2. \_\_\_\_\_

3. \_\_\_\_\_

4. \_\_\_\_\_

5. \_\_\_\_\_

6. \_\_\_\_\_

7. \_\_\_\_\_

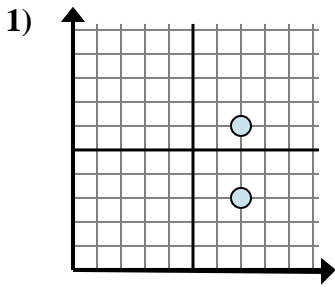
8. \_\_\_\_\_

9. \_\_\_\_\_

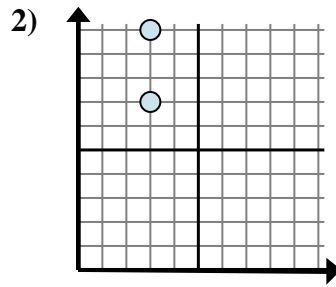


Déterminez quelle expression montre le mieux la distance entre les deux points.

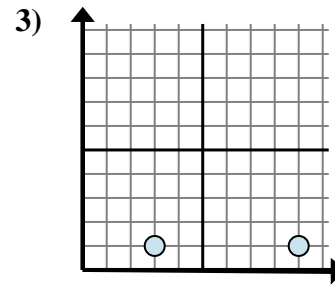
**Réponses**



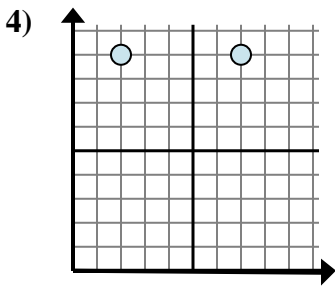
- A.  $6 - 3$
- B.  $3 - 6$
- C.  $7 - 6$
- D.  $7 - 7$



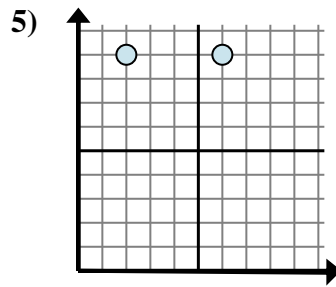
- A.  $3 - 7$
- B.  $10 - 3$
- C.  $10 - 7$
- D.  $7 - 3$



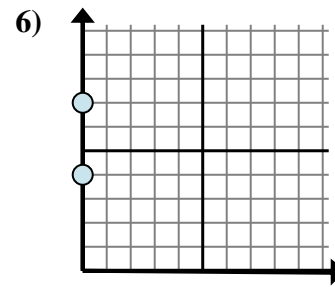
- A.  $9 - 3$
- B.  $1 - 9$
- C.  $3 - 9$
- D.  $9 - 1$



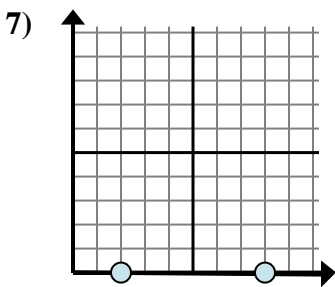
- A.  $7 - 9$
- B.  $9 - 2$
- C.  $9 - 9$
- D.  $7 - 2$



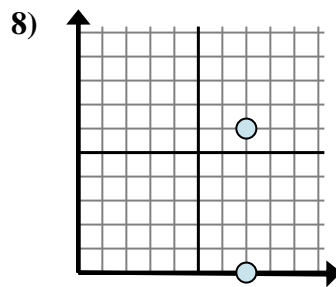
- A.  $6 - 9$
- B.  $9 - 2$
- C.  $6 - 2$
- D.  $2 - 9$



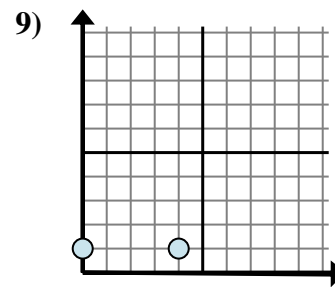
- A.  $0 - 0$
- B.  $0 - 0$
- C.  $7 - 4$
- D.  $0 - 7$



- A.  $8 - 2$
- B.  $2 - 8$
- C.  $0 - 0$
- D.  $8 - 0$



- A.  $0 - 6$
- B.  $0 - 7$
- C.  $7 - 6$
- D.  $6 - 0$



- A.  $0 - 1$
- B.  $1 - 0$
- C.  $4 - 0$
- D.  $1 - 1$

- 1.     **A**
- 2.     **C**
- 3.     **A**
- 4.     **D**
- 5.     **C**
- 6.     **C**
- 7.     **A**
- 8.     **D**
- 9.     **C**