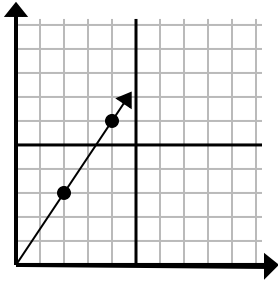




Déterminez quel choix représente un point sur la ligne s'il devait continuer.

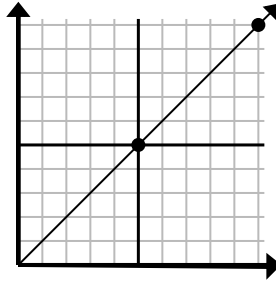
Réponses

1)



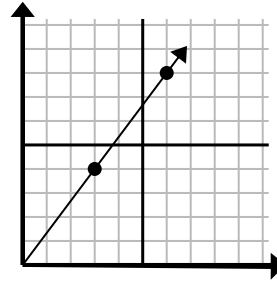
- A. (6 9)
 B. (5 4)
 C. (12 18)
 D. (14 21)

2)



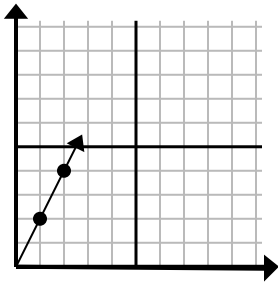
- A. (30 30)
 B. (15 15)
 C. (15 7)
 D. (20 20)

3)



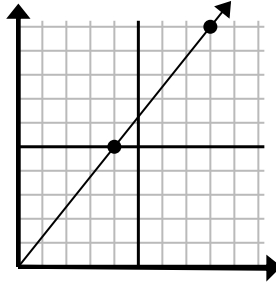
- A. (8 5)
 B. (12 16)
 C. (9 12)
 D. (11 6)

4)



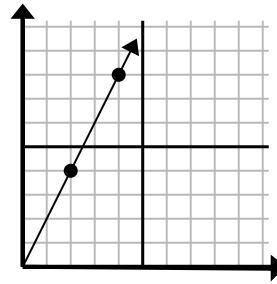
- A. (3 6)
 B. (4 8)
 C. (6 12)
 D. (7 14)

5)



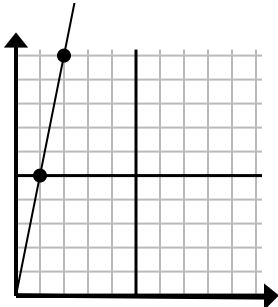
- A. (16 20)
 B. (13 10)
 C. (28 35)
 D. (12 15)

6)



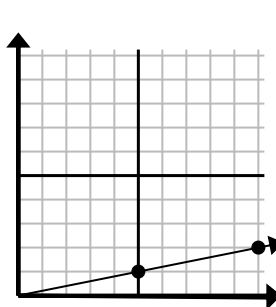
- A. (14 28)
 B. (7 8)
 C. (10 20)
 D. (6 12)

7)



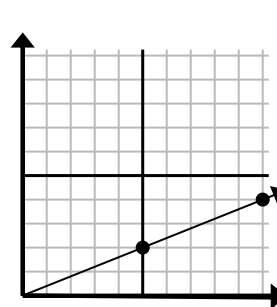
- A. (5 8)
 B. (7 35)
 C. (3 15)
 D. (6 30)

8)



- A. (25 5)
 B. (15 3)
 C. (35 7)
 D. (11 4)

9)



- A. (20 8)
 B. (14 6)
 C. (15 6)
 D. (25 10)

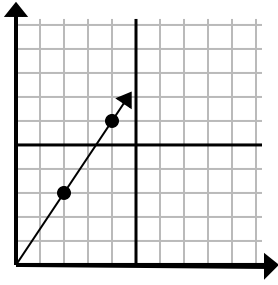
1. _____
 2. _____
 3. _____
 4. _____
 5. _____
 6. _____
 7. _____
 8. _____
 9. _____



Déterminez quel choix représente un point sur la ligne s'il devait continuer.

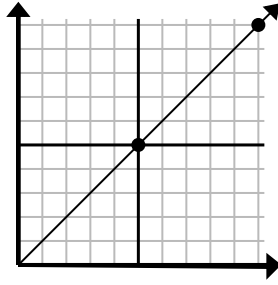
Réponses

1)



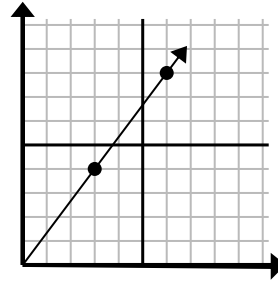
- A. (6 9)
 B. (5 4)
 C. (12 18)
 D. (14 21)

2)



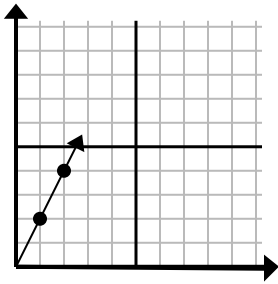
- A. (30 30)
 B. (15 15)
 C. (15 7)
 D. (20 20)

3)



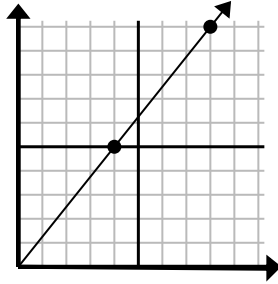
- A. (8 5)
 B. (12 16)
 C. (9 12)
 D. (11 6)

4)



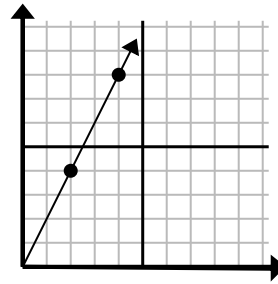
- A. (3 6)
 B. (4 8)
 C. (6 12)
 D. (7 14)

5)



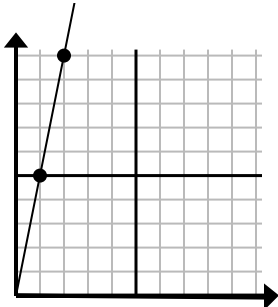
- A. (16 20)
 B. (13 10)
 C. (28 35)
 D. (12 15)

6)



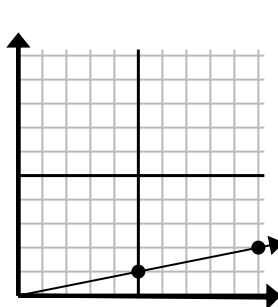
- A. (14 28)
 B. (7 8)
 C. (10 20)
 D. (6 12)

7)



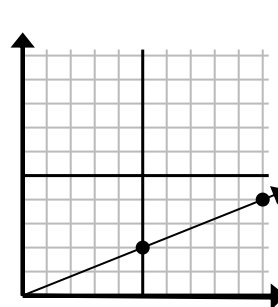
- A. (5 8)
 B. (7 35)
 C. (3 15)
 D. (6 30)

8)



- A. (25 5)
 B. (15 3)
 C. (35 7)
 D. (11 4)

9)



- A. (20 8)
 B. (14 6)
 C. (15 6)
 D. (25 10)

1. **A**
 2. **B**
 3. **C**
 4. **A**
 5. **D**
 6. **D**
 7. **C**
 8. **B**
 9. **C**