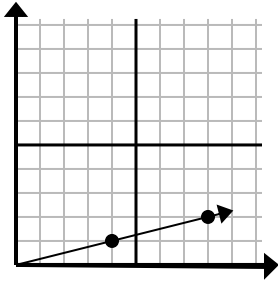




Déterminez quel choix représente un point sur la ligne s'il devait continuer.

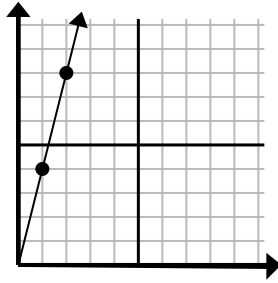
Réponses

1)



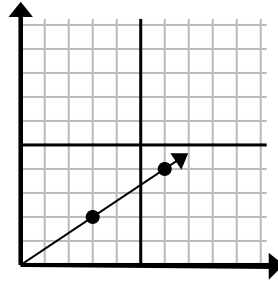
- A. (10 4)
- B. (13 5)
- C. (12 3)
- D. (9 3)

2)



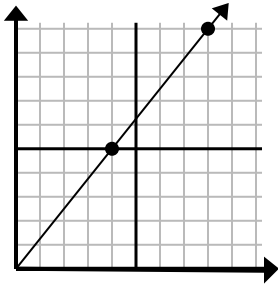
- A. (3 9)
- B. (7 8)
- C. (5 5)
- D. (3 12)

3)



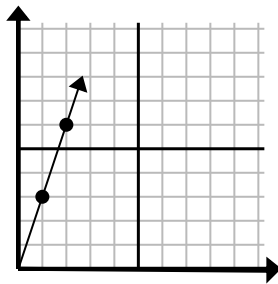
- A. (12 8)
- B. (9 6)
- C. (18 12)
- D. (11 3)

4)



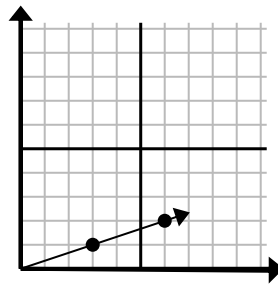
- A. (9 9)
- B. (12 15)
- C. (12 7)
- D. (28 35)

5)



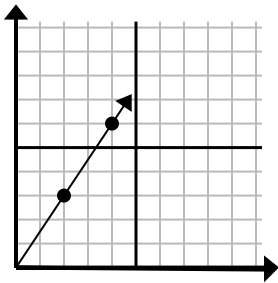
- A. (3 9)
- B. (4 12)
- C. (3 5)
- D. (7 4)

6)



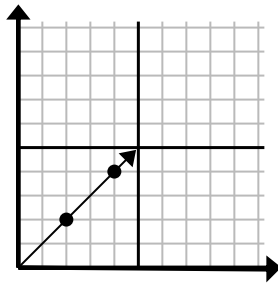
- A. (9 3)
- B. (11 4)
- C. (11 5)
- D. (15 5)

7)



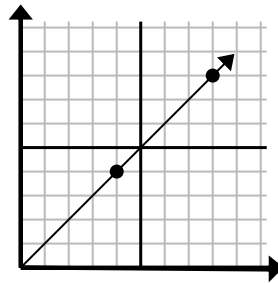
- A. (8 7)
- B. (6 4)
- C. (6 9)
- D. (12 18)

8)



- A. (6 6)
- B. (8 8)
- C. (10 10)
- D. (14 14)

9)



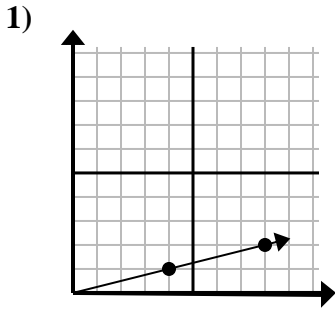
- A. (24 24)
- B. (12 12)
- C. (28 28)
- D. (20 20)

1. _____
2. _____
3. _____
4. _____
5. _____
6. _____
7. _____
8. _____
9. _____

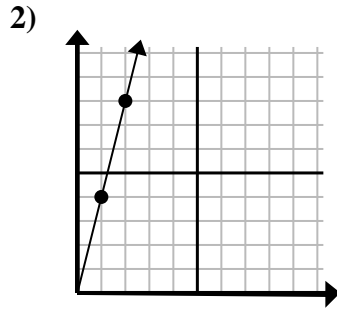


Déterminez quel choix représente un point sur la ligne s'il devait continuer.

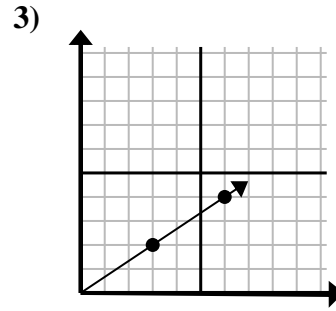
Réponses



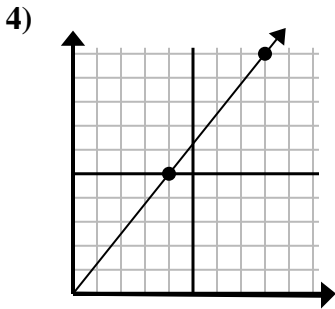
- A. (10 4)
- B. (13 5)
- C. (12 3)
- D. (9 3)



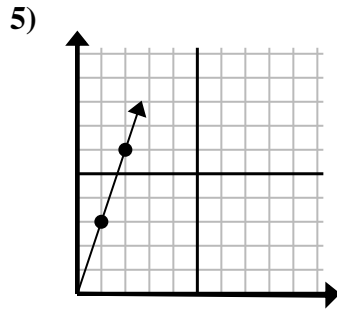
- A. (3 9)
- B. (7 8)
- C. (5 5)
- D. (3 12)



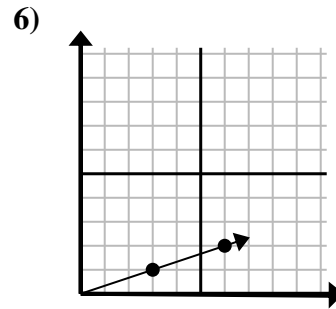
- A. (12 8)
- B. (9 6)
- C. (18 12)
- D. (11 3)



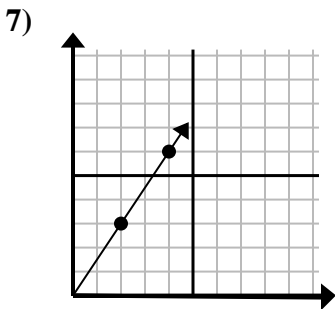
- A. (9 9)
- B. (12 15)
- C. (12 7)
- D. (28 35)



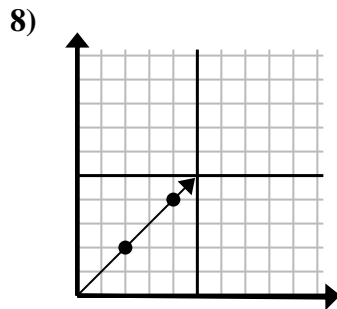
- A. (3 9)
- B. (4 12)
- C. (3 5)
- D. (7 4)



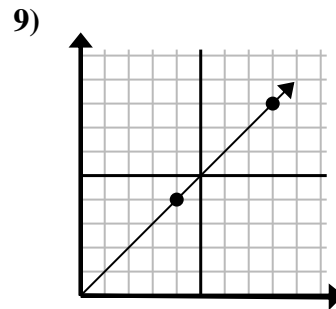
- A. (9 3)
- B. (11 4)
- C. (11 5)
- D. (15 5)



- A. (8 7)
- B. (6 4)
- C. (6 9)
- D. (12 18)



- A. (6 6)
- B. (8 8)
- C. (10 10)
- D. (14 14)



- A. (24 24)
- B. (12 12)
- C. (28 28)
- D. (20 20)

- 1. **C**
- 2. **D**
- 3. **B**
- 4. **B**
- 5. **A**
- 6. **A**
- 7. **C**
- 8. **A**
- 9. **B**