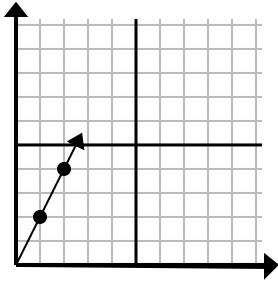




Déterminez quel choix représente un point sur la ligne s'il devait continuer.

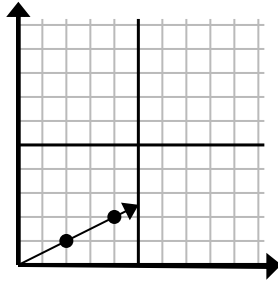
**Réponses**

1)



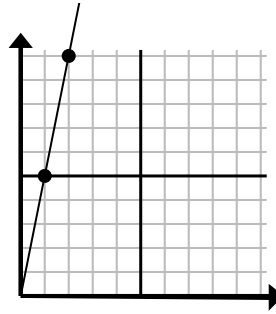
- A. (3 6)
- B. (7 3)
- C. (6 4)
- D. (7 14)

2)



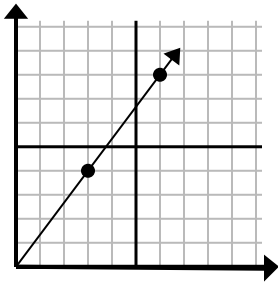
- A. (5 6)
- B. (5 4)
- C. (6 3)
- D. (9 6)

3)



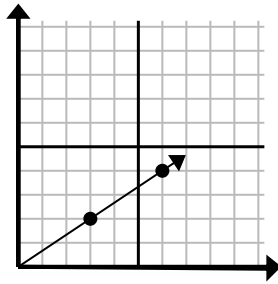
- A. (7 10)
- B. (3 15)
- C. (6 30)
- D. (5 8)

4)



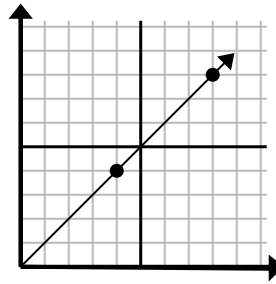
- A. (12 16)
- B. (10 6)
- C. (21 28)
- D. (9 12)

5)



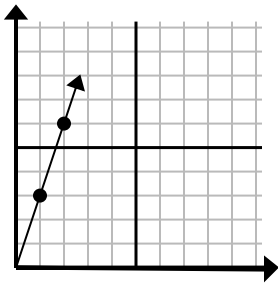
- A. (9 4)
- B. (9 6)
- C. (15 10)
- D. (12 8)

6)



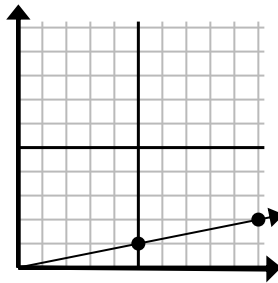
- A. (16 16)
- B. (12 12)
- C. (9 9)
- D. (24 24)

7)



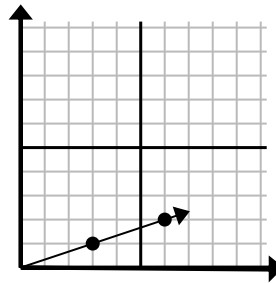
- A. (5 8)
- B. (5 15)
- C. (6 18)
- D. (3 9)

8)



- A. (11 5)
- B. (15 2)
- C. (15 3)
- D. (14 2)

9)

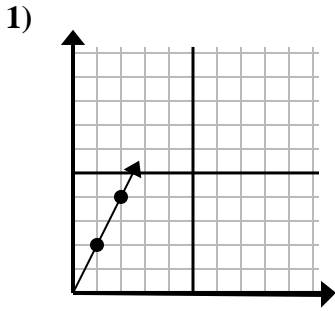


- A. (10 6)
- B. (9 3)
- C. (8 6)
- D. (9 2)

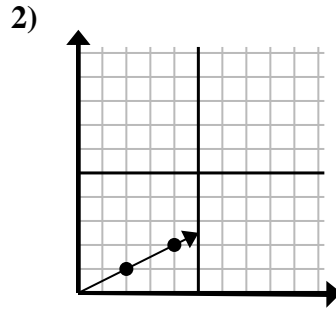
1. \_\_\_\_\_
2. \_\_\_\_\_
3. \_\_\_\_\_
4. \_\_\_\_\_
5. \_\_\_\_\_
6. \_\_\_\_\_
7. \_\_\_\_\_
8. \_\_\_\_\_
9. \_\_\_\_\_



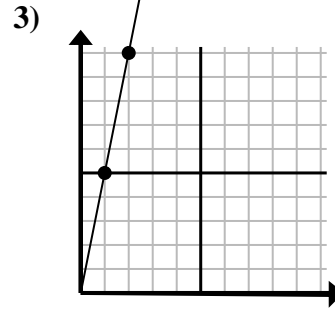
Déterminez quel choix représente un point sur la ligne s'il devait continuer.

**Réponses**

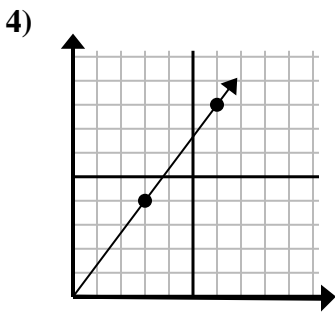
- A. (3 6)  
 B. (7 3)  
 C. (6 4)  
 D. (7 14)



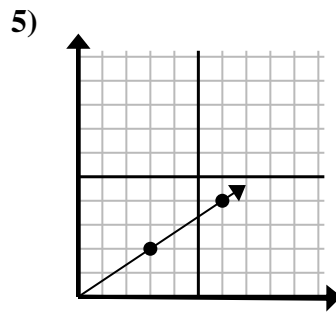
- A. (5 6)  
 B. (5 4)  
 C. (6 3)  
 D. (9 6)



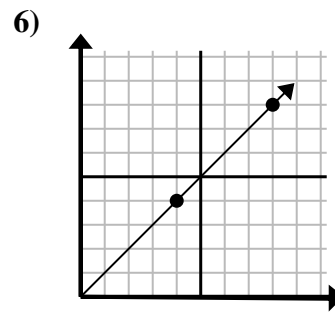
- A. (7 10)  
 B. (3 15)  
 C. (6 30)  
 D. (5 8)



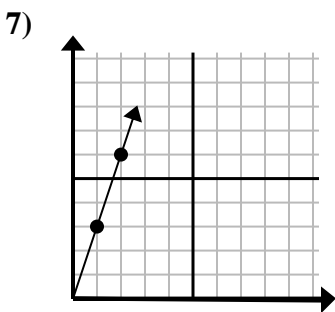
- A. (12 16)  
 B. (10 6)  
 C. (21 28)  
 D. (9 12)



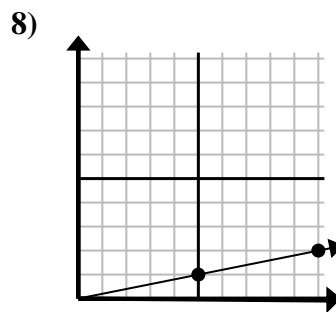
- A. (9 4)  
 B. (9 6)  
 C. (15 10)  
 D. (12 8)



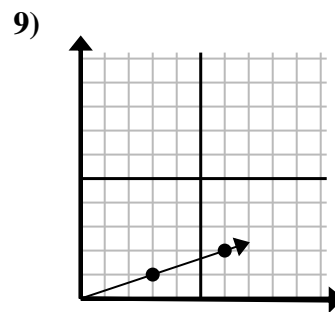
- A. (16 16)  
 B. (12 12)  
 C. (9 9)  
 D. (24 24)



- A. (5 8)  
 B. (5 15)  
 C. (6 18)  
 D. (3 9)



- A. (11 5)  
 B. (15 2)  
 C. (15 3)  
 D. (14 2)



- A. (10 6)  
 B. (9 3)  
 C. (8 6)  
 D. (9 2)

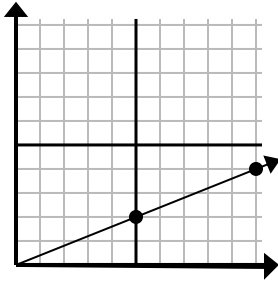
1. **A**  
 2. **C**  
 3. **B**  
 4. **D**  
 5. **B**  
 6. **B**  
 7. **D**  
 8. **C**  
 9. **B**



Déterminez quel choix représente un point sur la ligne s'il devait continuer.

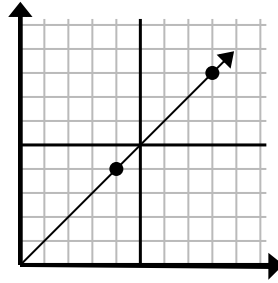
**Réponses**

1)



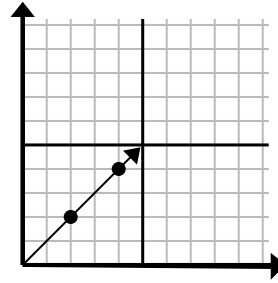
- A. (15 6)
- B. (25 10)
- C. (20 8)
- D. (30 12)

2)



- A. (20 20)
- B. (11 6)
- C. (12 8)
- D. (12 12)

3)



- A. (8 6)
- B. (10 10)
- C. (6 6)
- D. (14 14)

1. \_\_\_\_\_

2. \_\_\_\_\_

3. \_\_\_\_\_

4. \_\_\_\_\_

5. \_\_\_\_\_

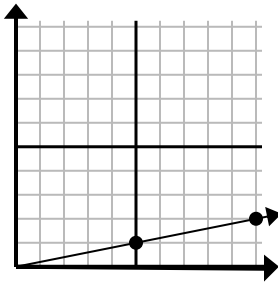
6. \_\_\_\_\_

7. \_\_\_\_\_

8. \_\_\_\_\_

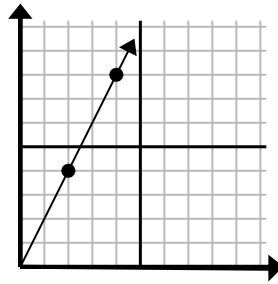
9. \_\_\_\_\_

4)



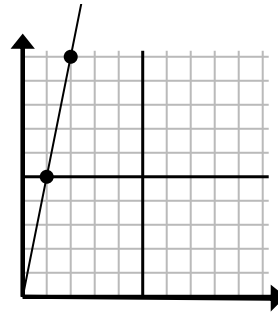
- A. (30 6)
- B. (14 5)
- C. (15 3)
- D. (14 3)

5)



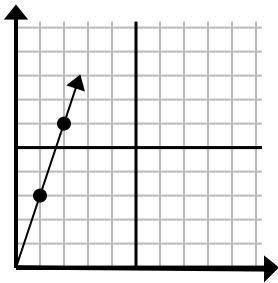
- A. (12 24)
- B. (6 12)
- C. (9 6)
- D. (7 7)

6)



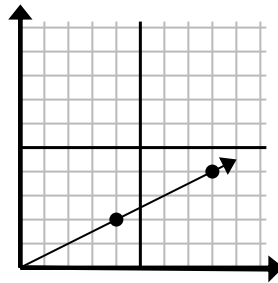
- A. (5 25)
- B. (6 7)
- C. (3 15)
- D. (4 8)

7)



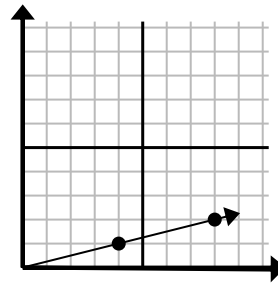
- A. (6 5)
- B. (6 18)
- C. (3 9)
- D. (7 21)

8)



- A. (20 10)
- B. (28 14)
- C. (13 7)
- D. (12 6)

9)



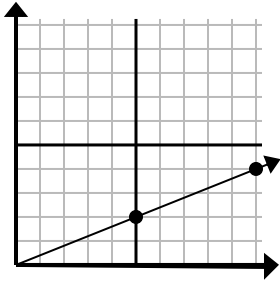
- A. (16 4)
- B. (24 6)
- C. (28 7)
- D. (12 3)



Déterminez quel choix représente un point sur la ligne s'il devait continuer.

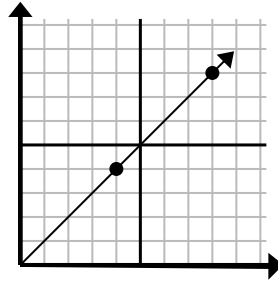
**Réponses**

1)



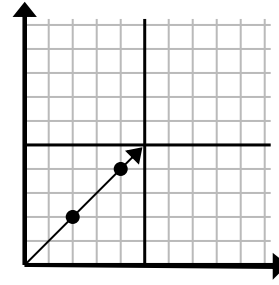
- A. (15 6)  
 B. (25 10)  
 C. (20 8)  
 D. (30 12)

2)



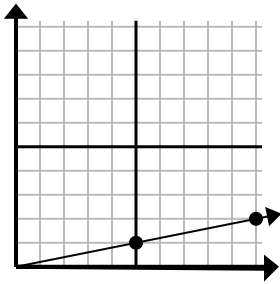
- A. (20 20)  
 B. (11 6)  
 C. (12 8)  
 D. (12 12)

3)



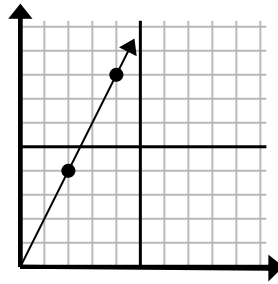
- A. (8 6)  
 B. (10 10)  
 C. (6 6)  
 D. (14 14)

4)



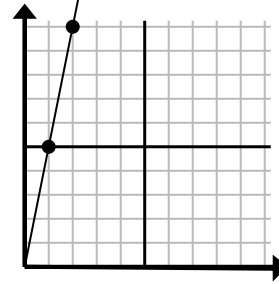
- A. (30 6)  
 B. (14 5)  
 C. (15 3)  
 D. (14 3)

5)



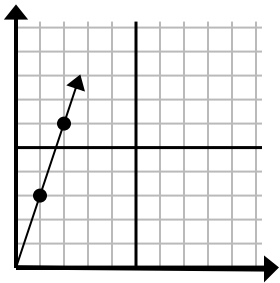
- A. (12 24)  
 B. (6 12)  
 C. (9 6)  
 D. (7 7)

6)



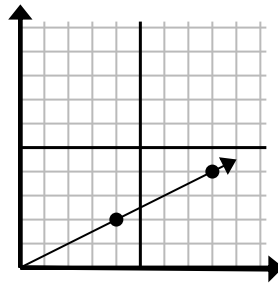
- A. (5 25)  
 B. (6 7)  
 C. (3 15)  
 D. (4 8)

7)



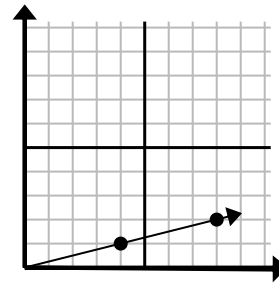
- A. (6 5)  
 B. (6 18)  
 C. (3 9)  
 D. (7 21)

8)



- A. (20 10)  
 B. (28 14)  
 C. (13 7)  
 D. (12 6)

9)



- A. (16 4)  
 B. (24 6)  
 C. (28 7)  
 D. (12 3)

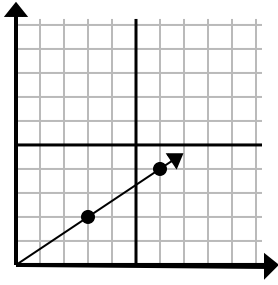
1. **A**  
 2. **D**  
 3. **C**  
 4. **C**  
 5. **B**  
 6. **C**  
 7. **C**  
 8. **D**  
 9. **D**



Déterminez quel choix représente un point sur la ligne s'il devait continuer.

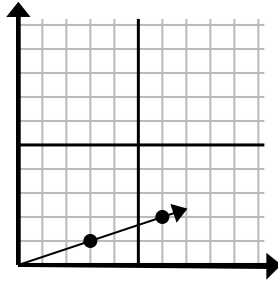
**Réponses**

1)



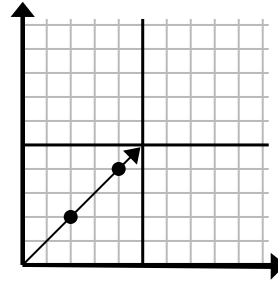
- A. (21 14)  
 B. (12 8)  
 C. (9 6)  
 D. (15 10)

2)



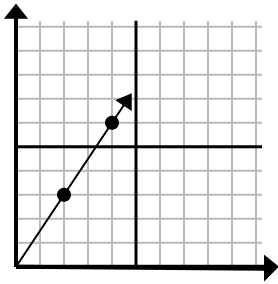
- A. (18 6)  
 B. (12 4)  
 C. (9 3)  
 D. (10 3)

3)



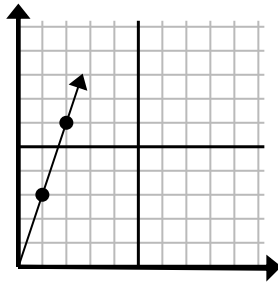
- A. (6 6)  
 B. (12 12)  
 C. (7 7)  
 D. (8 4)

4)



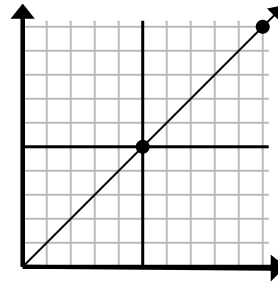
- A. (6 9)  
 B. (14 21)  
 C. (7 5)  
 D. (8 7)

5)



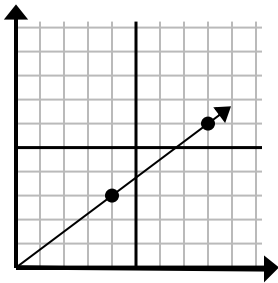
- A. (5 4)  
 B. (4 8)  
 C. (7 21)  
 D. (3 9)

6)



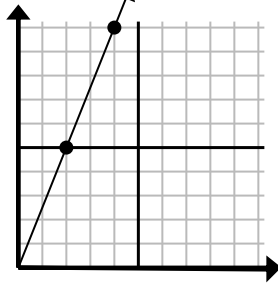
- A. (15 6)  
 B. (30 30)  
 C. (15 15)  
 D. (35 35)

7)



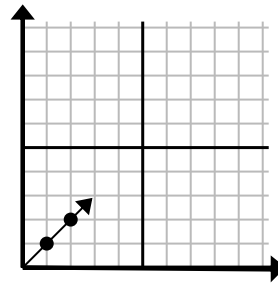
- A. (10 5)  
 B. (10 6)  
 C. (12 9)  
 D. (28 21)

8)



- A. (12 30)  
 B. (8 20)  
 C. (6 15)  
 D. (8 6)

9)



- A. (3 3)  
 B. (3 2)  
 C. (6 6)  
 D. (6 3)

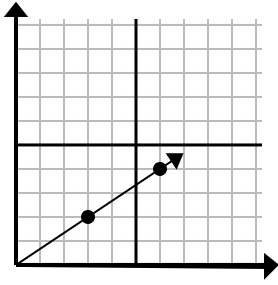
1. \_\_\_\_\_
2. \_\_\_\_\_
3. \_\_\_\_\_
4. \_\_\_\_\_
5. \_\_\_\_\_
6. \_\_\_\_\_
7. \_\_\_\_\_
8. \_\_\_\_\_
9. \_\_\_\_\_



Déterminez quel choix représente un point sur la ligne s'il devait continuer.

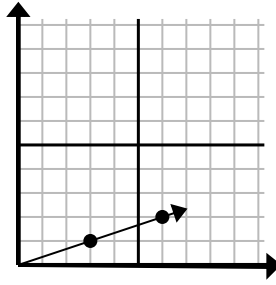
**Réponses**

1)



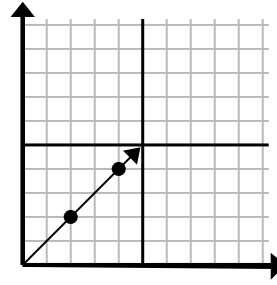
- A. (21 14)  
 B. (12 8)  
 C. (9 6)  
 D. (15 10)

2)



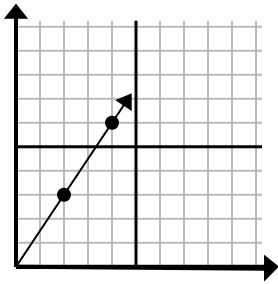
- A. (18 6)  
 B. (12 4)  
 C. (9 3)  
 D. (10 3)

3)



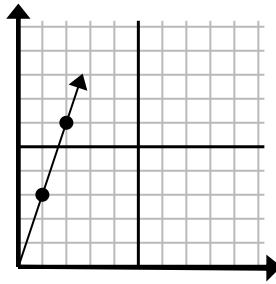
- A. (6 6)  
 B. (12 12)  
 C. (7 7)  
 D. (8 4)

4)



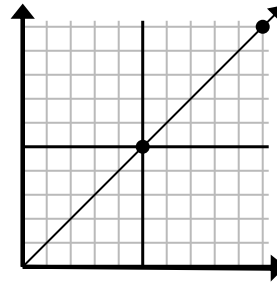
- A. (6 9)  
 B. (14 21)  
 C. (7 5)  
 D. (8 7)

5)



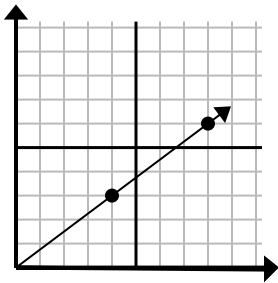
- A. (5 4)  
 B. (4 8)  
 C. (7 21)  
 D. (3 9)

6)



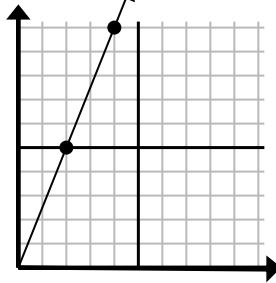
- A. (15 6)  
 B. (30 30)  
 C. (15 15)  
 D. (35 35)

7)



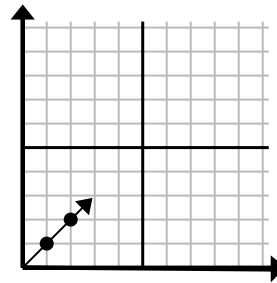
- A. (10 5)  
 B. (10 6)  
 C. (12 9)  
 D. (28 21)

8)



- A. (12 30)  
 B. (8 20)  
 C. (6 15)  
 D. (8 6)

9)



- A. (3 3)  
 B. (3 2)  
 C. (6 6)  
 D. (6 3)

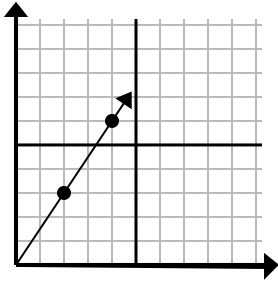
1.           **C**            
 2.           **C**            
 3.           **A**            
 4.           **A**            
 5.           **D**            
 6.           **C**            
 7.           **C**            
 8.           **C**            
 9.           **A**



Déterminez quel choix représente un point sur la ligne s'il devait continuer.

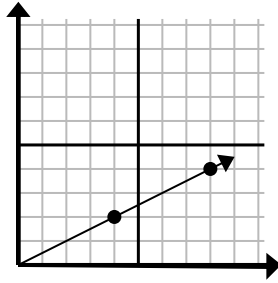
**Réponses**

1)



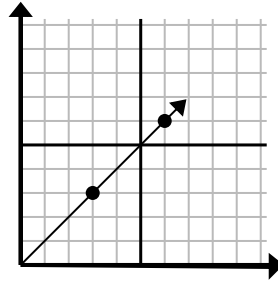
- A. (6 9)
- B. (8 6)
- C. (5 8)
- D. (5 5)

2)



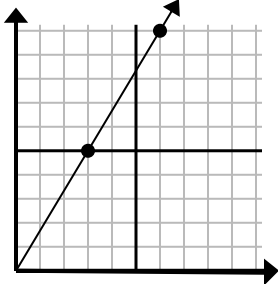
- A. (12 7)
- B. (12 6)
- C. (24 12)
- D. (20 10)

3)



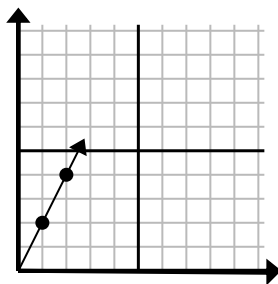
- A. (11 5)
- B. (9 9)
- C. (18 18)
- D. (11 8)

4)



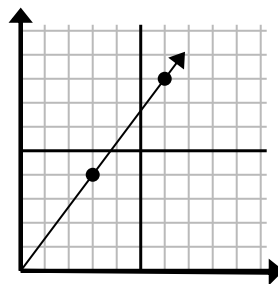
- A. (8 9)
- B. (12 20)
- C. (9 15)
- D. (11 6)

5)



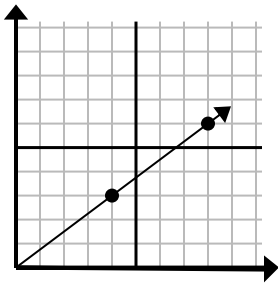
- A. (7 14)
- B. (7 7)
- C. (3 6)
- D. (6 12)

6)



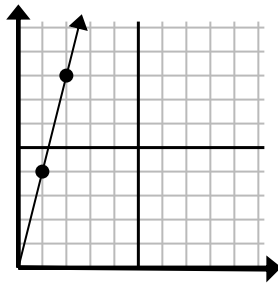
- A. (18 24)
- B. (21 28)
- C. (9 12)
- D. (11 9)

7)



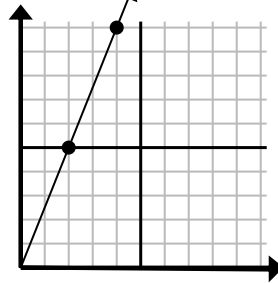
- A. (12 9)
- B. (28 21)
- C. (24 18)
- D. (11 8)

8)



- A. (3 12)
- B. (4 6)
- C. (4 16)
- D. (7 28)

9)



- A. (8 20)
- B. (14 35)
- C. (5 9)
- D. (6 15)

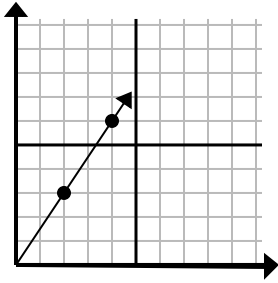
1. \_\_\_\_\_
2. \_\_\_\_\_
3. \_\_\_\_\_
4. \_\_\_\_\_
5. \_\_\_\_\_
6. \_\_\_\_\_
7. \_\_\_\_\_
8. \_\_\_\_\_
9. \_\_\_\_\_



Déterminez quel choix représente un point sur la ligne s'il devait continuer.

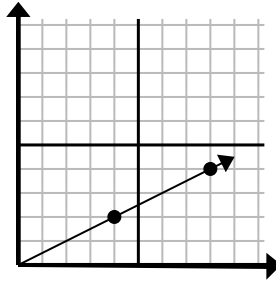
**Réponses**

1)



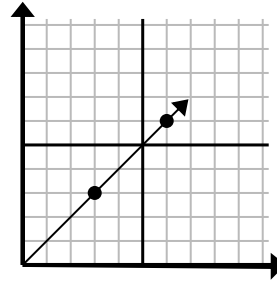
- A. (6 9)  
 B. (8 6)  
 C. (5 8)  
 D. (5 5)

2)



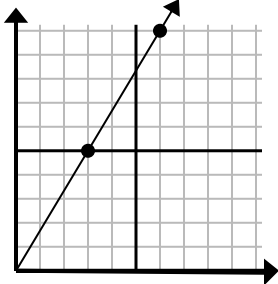
- A. (12 7)  
 B. (12 6)  
 C. (24 12)  
 D. (20 10)

3)



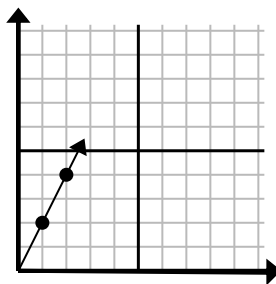
- A. (11 5)  
 B. (9 9)  
 C. (18 18)  
 D. (11 8)

4)



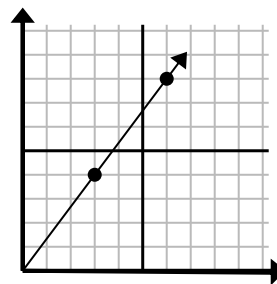
- A. (8 9)  
 B. (12 20)  
 C. (9 15)  
 D. (11 6)

5)



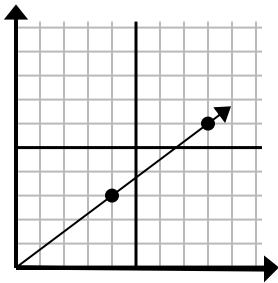
- A. (7 14)  
 B. (7 7)  
 C. (3 6)  
 D. (6 12)

6)



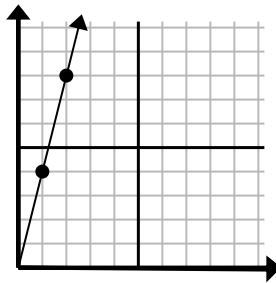
- A. (18 24)  
 B. (21 28)  
 C. (9 12)  
 D. (11 9)

7)



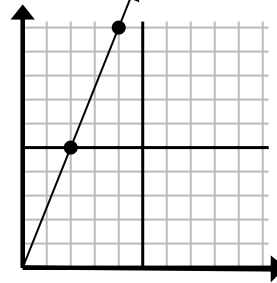
- A. (12 9)  
 B. (28 21)  
 C. (24 18)  
 D. (11 8)

8)



- A. (3 12)  
 B. (4 6)  
 C. (4 16)  
 D. (7 28)

9)



- A. (8 20)  
 B. (14 35)  
 C. (5 9)  
 D. (6 15)

1. **A**  
 2. **B**  
 3. **B**  
 4. **C**  
 5. **C**  
 6. **C**  
 7. **A**  
 8. **A**  
 9. **D**

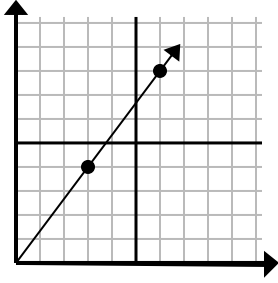




Déterminez quel choix représente un point sur la ligne s'il devait continuer.

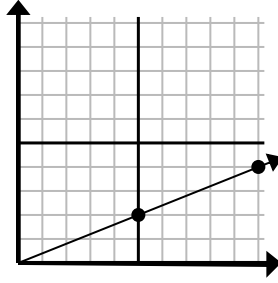
**Réponses**

1)



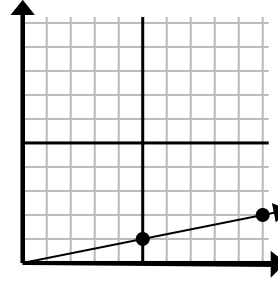
- A. (18 24)  
 B. (15 20)  
 C. (9 12)  
 D. (9 5)

2)



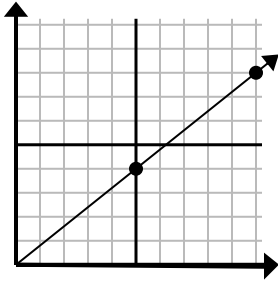
- A. (11 7)  
 B. (25 10)  
 C. (30 12)  
 D. (15 6)

3)



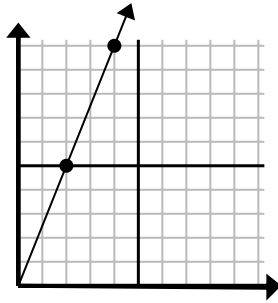
- A. (15 3)  
 B. (20 4)  
 C. (30 6)  
 D. (12 6)

4)



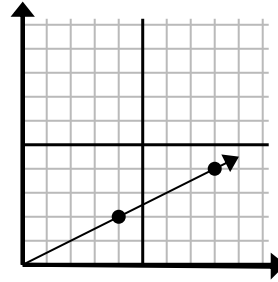
- A. (13 5)  
 B. (15 12)  
 C. (30 24)  
 D. (11 6)

5)



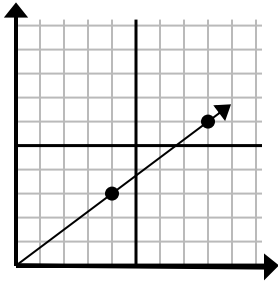
- A. (8 20)  
 B. (7 6)  
 C. (6 15)  
 D. (10 25)

6)



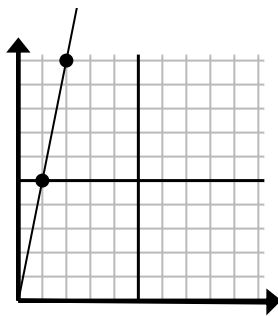
- A. (24 12)  
 B. (28 14)  
 C. (12 6)  
 D. (10 4)

7)



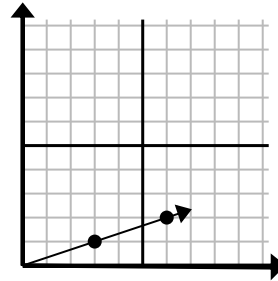
- A. (12 9)  
 B. (24 18)  
 C. (12 4)  
 D. (16 12)

8)



- A. (6 8)  
 B. (3 15)  
 C. (7 7)  
 D. (6 30)

9)



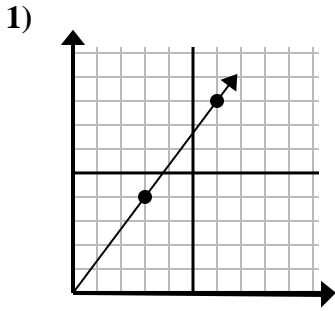
- A. (9 3)  
 B. (8 6)  
 C. (7 2)  
 D. (18 6)

1. \_\_\_\_\_  
 2. \_\_\_\_\_  
 3. \_\_\_\_\_  
 4. \_\_\_\_\_  
 5. \_\_\_\_\_  
 6. \_\_\_\_\_  
 7. \_\_\_\_\_  
 8. \_\_\_\_\_  
 9. \_\_\_\_\_

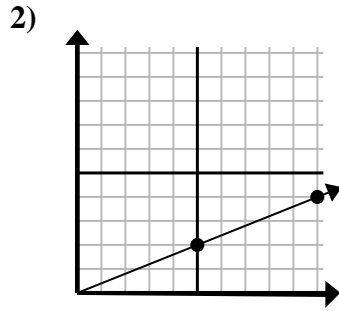


Déterminez quel choix représente un point sur la ligne s'il devait continuer.

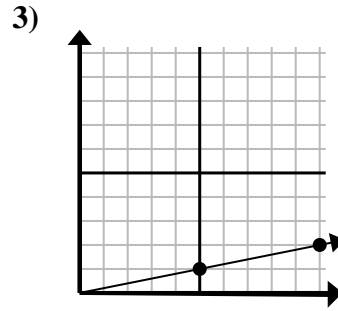
**Réponses**



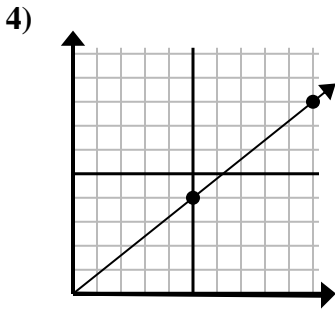
- A. (18 24)
- B. (15 20)
- C. (9 12)
- D. (9 5)



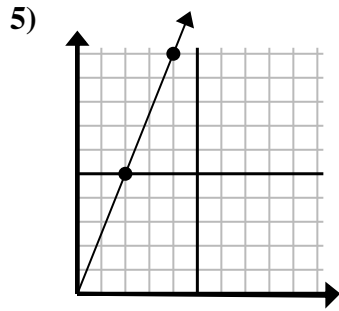
- A. (11 7)
- B. (25 10)
- C. (30 12)
- D. (15 6)



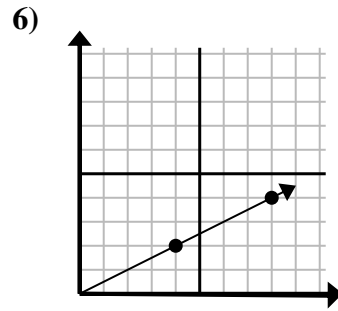
- A. (15 3)
- B. (20 4)
- C. (30 6)
- D. (12 6)



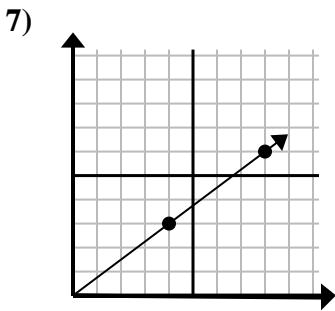
- A. (13 5)
- B. (15 12)
- C. (30 24)
- D. (11 6)



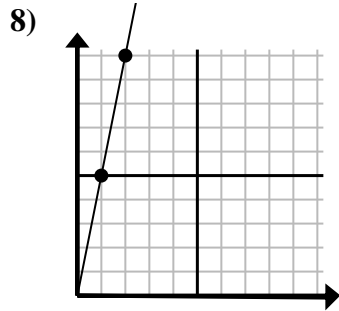
- A. (8 20)
- B. (7 6)
- C. (6 15)
- D. (10 25)



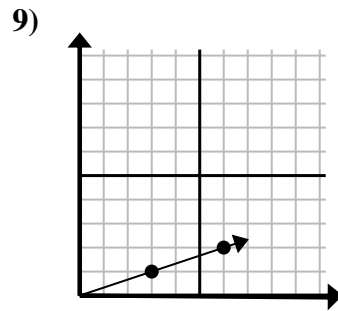
- A. (24 12)
- B. (28 14)
- C. (12 6)
- D. (10 4)



- A. (12 9)
- B. (24 18)
- C. (12 4)
- D. (16 12)



- A. (6 8)
- B. (3 15)
- C. (7 7)
- D. (6 30)



- A. (9 3)
- B. (8 6)
- C. (7 2)
- D. (18 6)

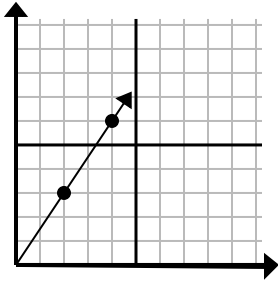
- 1.           **C**
- 2.           **D**
- 3.           **A**
- 4.           **B**
- 5.           **C**
- 6.           **C**
- 7.           **A**
- 8.           **B**
- 9.           **A**



Déterminez quel choix représente un point sur la ligne s'il devait continuer.

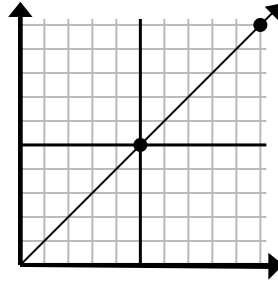
**Réponses**

1)



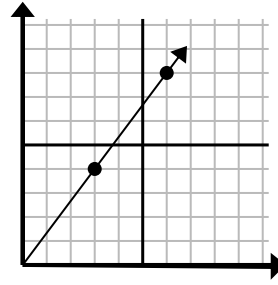
- A. (6 9)
- B. (5 4)
- C. (12 18)
- D. (14 21)

2)



- A. (30 30)
- B. (15 15)
- C. (15 7)
- D. (20 20)

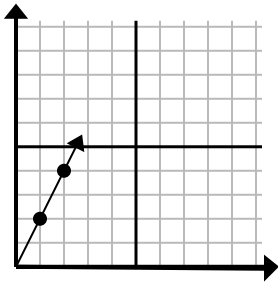
3)



- A. (8 5)
- B. (12 16)
- C. (9 12)
- D. (11 6)

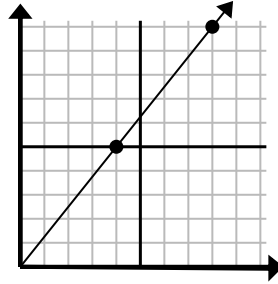
1. \_\_\_\_\_
2. \_\_\_\_\_
3. \_\_\_\_\_
4. \_\_\_\_\_
5. \_\_\_\_\_
6. \_\_\_\_\_
7. \_\_\_\_\_
8. \_\_\_\_\_
9. \_\_\_\_\_

4)



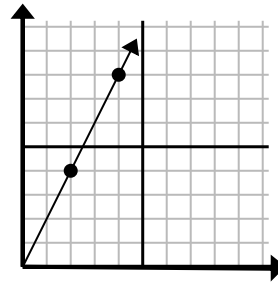
- A. (3 6)
- B. (4 8)
- C. (6 12)
- D. (7 14)

5)



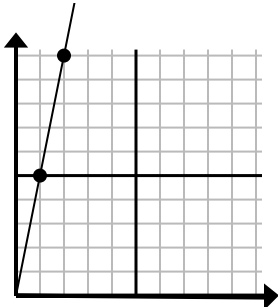
- A. (16 20)
- B. (13 10)
- C. (28 35)
- D. (12 15)

6)



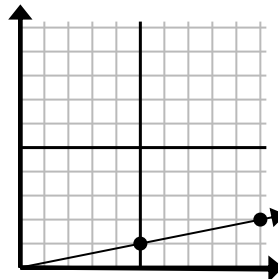
- A. (14 28)
- B. (7 8)
- C. (10 20)
- D. (6 12)

7)



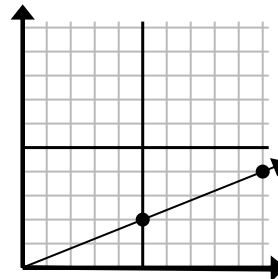
- A. (5 8)
- B. (7 35)
- C. (3 15)
- D. (6 30)

8)



- A. (25 5)
- B. (15 3)
- C. (35 7)
- D. (11 4)

9)

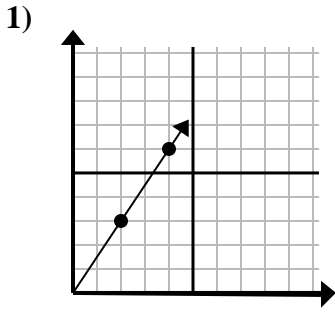


- A. (20 8)
- B. (14 6)
- C. (15 6)
- D. (25 10)

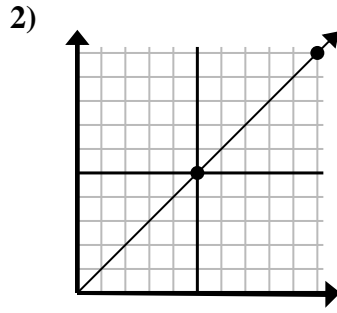


Déterminez quel choix représente un point sur la ligne s'il devait continuer.

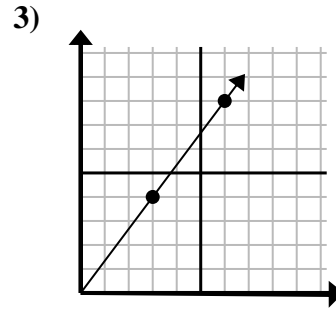
**Réponses**



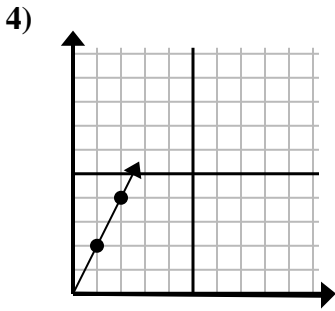
- A. (6 9)
- B. (5 4)
- C. (12 18)
- D. (14 21)



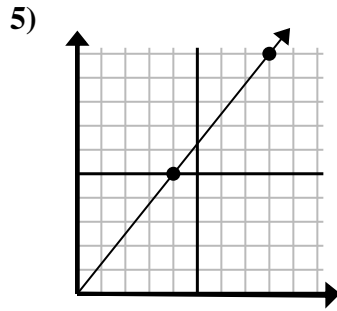
- A. (30 30)
- B. (15 15)
- C. (15 7)
- D. (20 20)



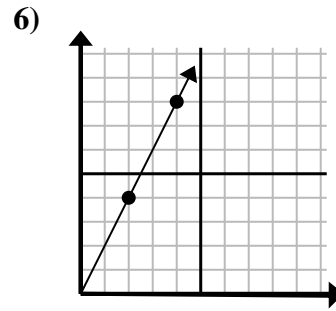
- A. (8 5)
- B. (12 16)
- C. (9 12)
- D. (11 6)



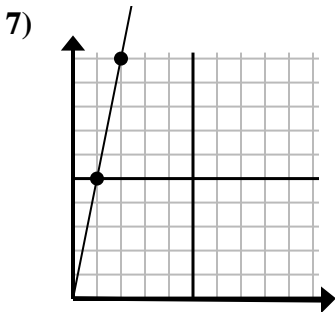
- A. (3 6)
- B. (4 8)
- C. (6 12)
- D. (7 14)



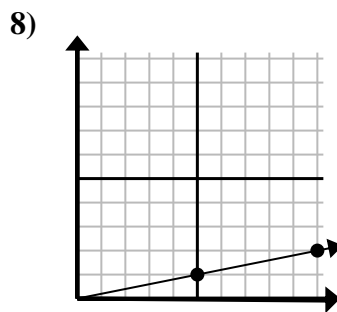
- A. (16 20)
- B. (13 10)
- C. (28 35)
- D. (12 15)



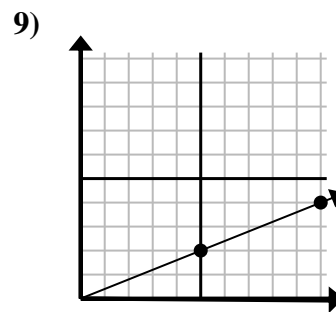
- A. (14 28)
- B. (7 8)
- C. (10 20)
- D. (6 12)



- A. (5 8)
- B. (7 35)
- C. (3 15)
- D. (6 30)



- A. (25 5)
- B. (15 3)
- C. (35 7)
- D. (11 4)



- A. (20 8)
- B. (14 6)
- C. (15 6)
- D. (25 10)

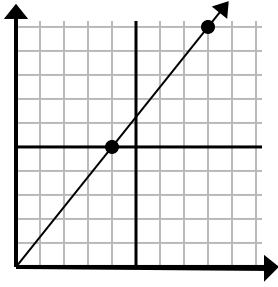
- 1. **A**
- 2. **B**
- 3. **C**
- 4. **A**
- 5. **D**
- 6. **D**
- 7. **C**
- 8. **B**
- 9. **C**



Déterminez quel choix représente un point sur la ligne s'il devait continuer.

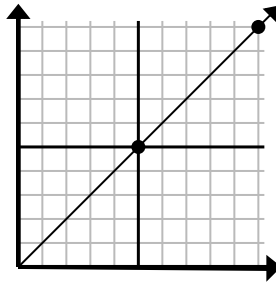
**Réponses**

1)



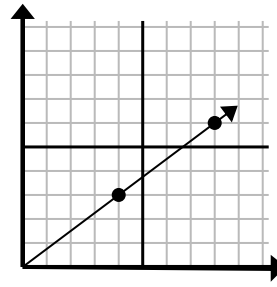
- A. (20 25)  
 B. (12 15)  
 C. (24 30)  
 D. (11 10)

2)



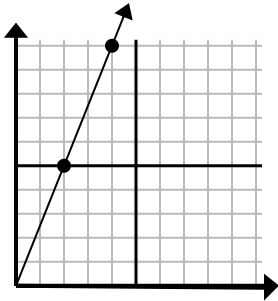
- A. (15 15)  
 B. (12 10)  
 C. (14 6)  
 D. (25 25)

3)



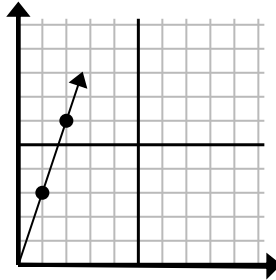
- A. (28 21)  
 B. (12 9)  
 C. (24 18)  
 D. (16 12)

4)



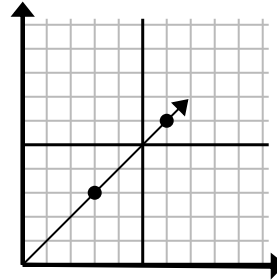
- A. (6 15)  
 B. (5 9)  
 C. (8 20)  
 D. (12 30)

5)



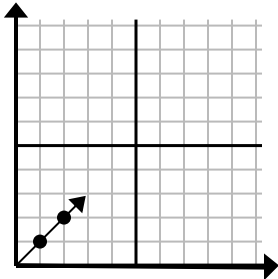
- A. (4 12)  
 B. (3 9)  
 C. (4 6)  
 D. (7 6)

6)



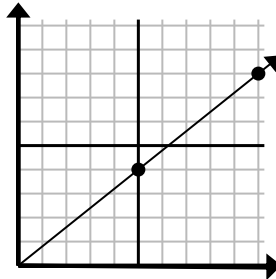
- A. (12 12)  
 B. (9 9)  
 C. (18 18)  
 D. (9 5)

7)



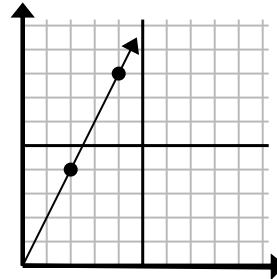
- A. (5 6)  
 B. (3 3)  
 C. (5 5)  
 D. (7 3)

8)



- A. (15 12)  
 B. (35 28)  
 C. (14 8)  
 D. (14 5)

9)

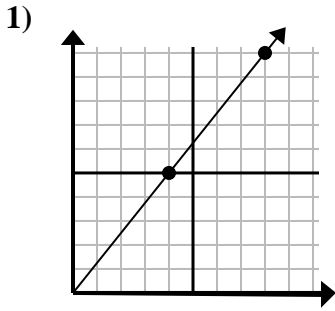


- A. (6 12)  
 B. (7 9)  
 C. (10 20)  
 D. (8 16)

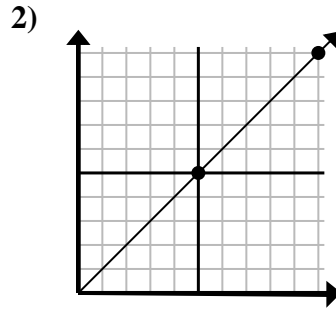
1. \_\_\_\_\_
2. \_\_\_\_\_
3. \_\_\_\_\_
4. \_\_\_\_\_
5. \_\_\_\_\_
6. \_\_\_\_\_
7. \_\_\_\_\_
8. \_\_\_\_\_
9. \_\_\_\_\_



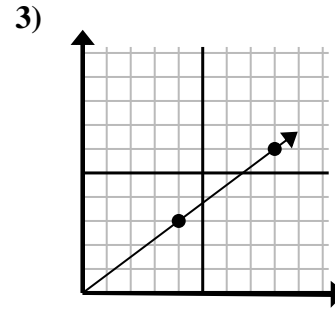
Déterminez quel choix représente un point sur la ligne s'il devait continuer.

**Réponses**

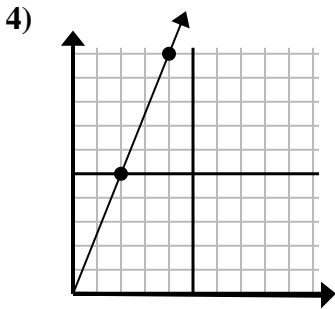
- A. (20 25)  
 B. (12 15)  
 C. (24 30)  
 D. (11 10)



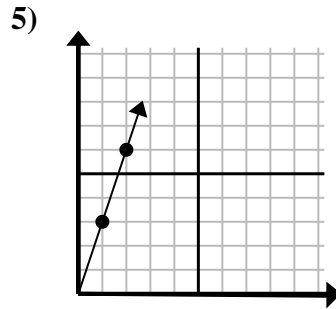
- A. (15 15)  
 B. (12 10)  
 C. (14 6)  
 D. (25 25)



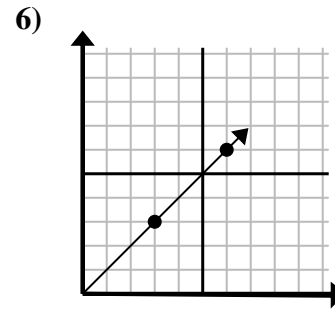
- A. (28 21)  
 B. (12 9)  
 C. (24 18)  
 D. (16 12)



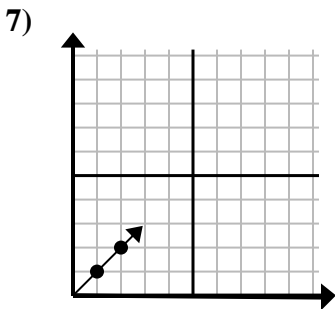
- A. (6 15)  
 B. (5 9)  
 C. (8 20)  
 D. (12 30)



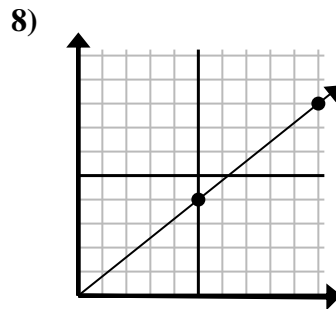
- A. (4 12)  
 B. (3 9)  
 C. (4 6)  
 D. (7 6)



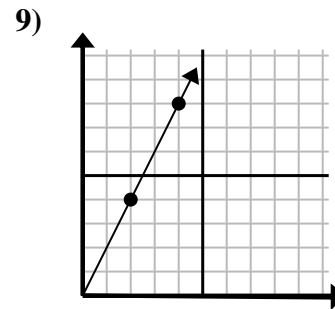
- A. (12 12)  
 B. (9 9)  
 C. (18 18)  
 D. (9 5)



- A. (5 6)  
 B. (3 3)  
 C. (5 5)  
 D. (7 3)



- A. (15 12)  
 B. (35 28)  
 C. (14 8)  
 D. (14 5)



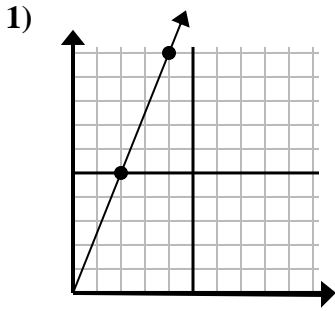
- A. (6 12)  
 B. (7 9)  
 C. (10 20)  
 D. (8 16)

1. **B**  
 2. **A**  
 3. **B**  
 4. **A**  
 5. **B**  
 6. **B**  
 7. **B**  
 8. **A**  
 9. **A**

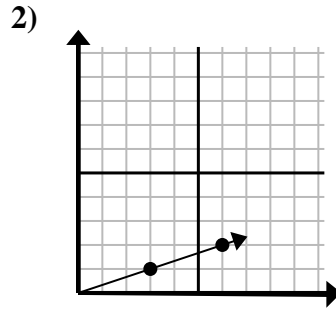


Déterminez quel choix représente un point sur la ligne s'il devait continuer.

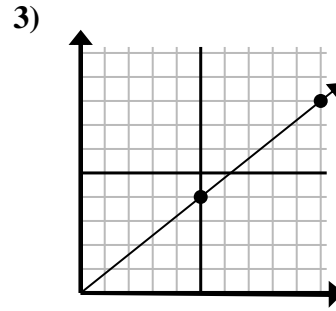
**Réponses**



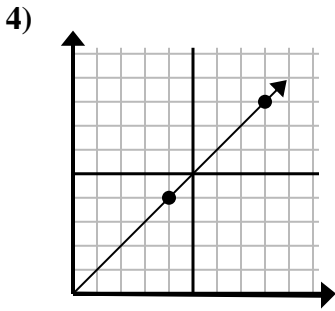
- A. (12 30)
- B. (8 20)
- C. (8 10)
- D. (6 15)



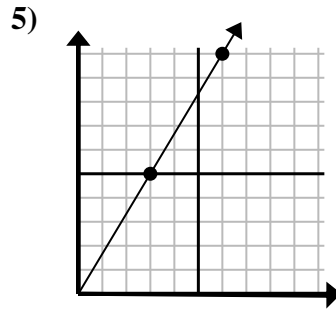
- A. (9 3)
- B. (10 6)
- C. (15 5)
- D. (18 6)



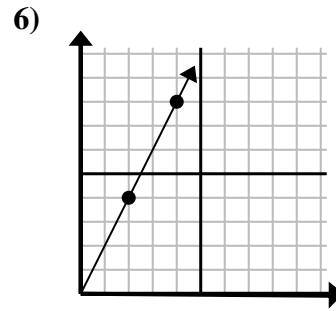
- A. (11 9)
- B. (15 12)
- C. (20 16)
- D. (25 20)



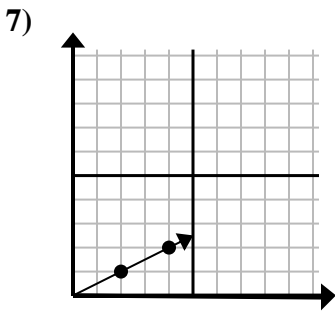
- A. (16 16)
- B. (12 12)
- C. (13 5)
- D. (28 28)



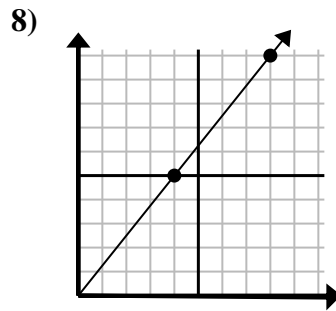
- A. (8 10)
- B. (15 25)
- C. (7 6)
- D. (9 15)



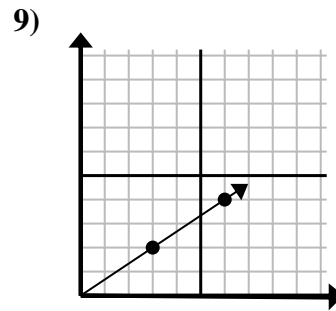
- A. (6 5)
- B. (6 12)
- C. (12 24)
- D. (8 16)



- A. (9 2)
- B. (6 3)
- C. (14 7)
- D. (7 4)



- A. (9 10)
- B. (12 15)
- C. (20 25)
- D. (24 30)

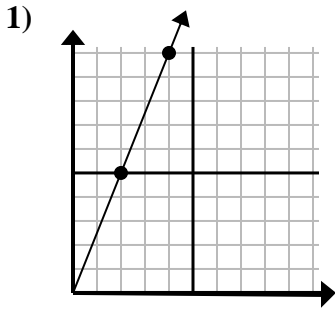


- A. (18 12)
- B. (8 7)
- C. (11 5)
- D. (9 6)

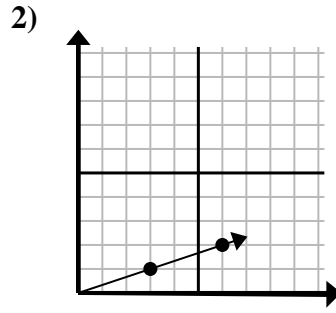
1. \_\_\_\_\_
2. \_\_\_\_\_
3. \_\_\_\_\_
4. \_\_\_\_\_
5. \_\_\_\_\_
6. \_\_\_\_\_
7. \_\_\_\_\_
8. \_\_\_\_\_
9. \_\_\_\_\_



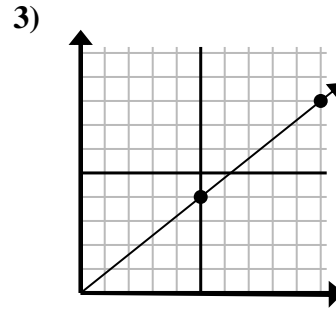
Déterminez quel choix représente un point sur la ligne s'il devait continuer.

**Réponses**

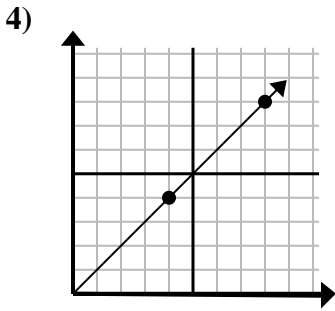
- A. (12 30)  
 B. (8 20)  
 C. (8 10)  
 D. (6 15)



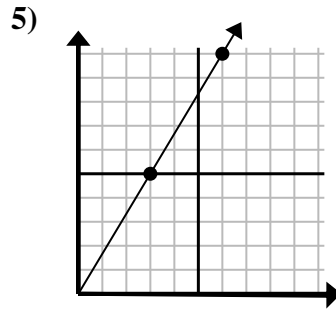
- A. (9 3)  
 B. (10 6)  
 C. (15 5)  
 D. (18 6)



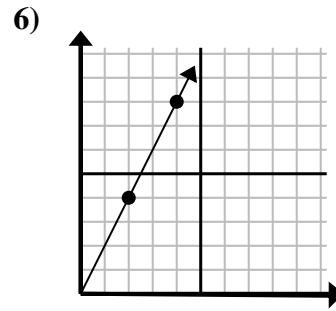
- A. (11 9)  
 B. (15 12)  
 C. (20 16)  
 D. (25 20)



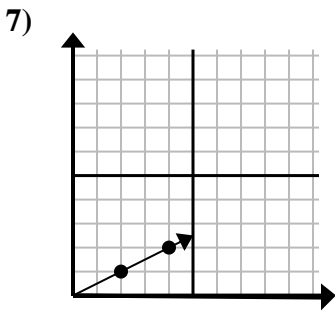
- A. (16 16)  
 B. (12 12)  
 C. (13 5)  
 D. (28 28)



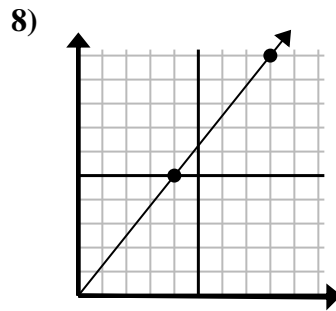
- A. (8 10)  
 B. (15 25)  
 C. (7 6)  
 D. (9 15)



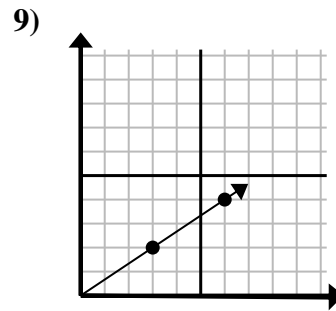
- A. (6 5)  
 B. (6 12)  
 C. (12 24)  
 D. (8 16)



- A. (9 2)  
 B. (6 3)  
 C. (14 7)  
 D. (7 4)



- A. (9 10)  
 B. (12 15)  
 C. (20 25)  
 D. (24 30)



- A. (18 12)  
 B. (8 7)  
 C. (11 5)  
 D. (9 6)

1. **D**  
 2. **A**  
 3. **B**  
 4. **B**  
 5. **D**  
 6. **B**  
 7. **B**  
 8. **B**  
 9. **D**

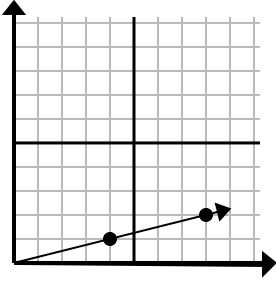




Déterminez quel choix représente un point sur la ligne s'il devait continuer.

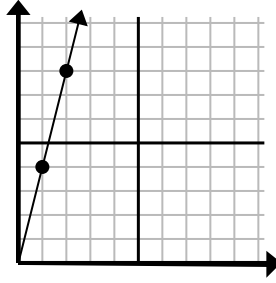
**Réponses**

1)



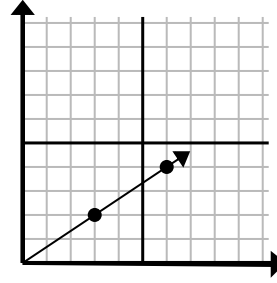
- A. (10 4)  
 B. (13 5)  
 C. (12 3)  
 D. (9 3)

2)



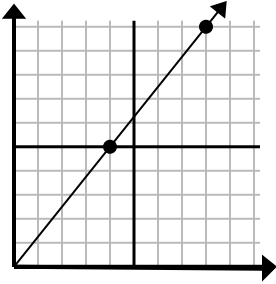
- A. (3 9)  
 B. (7 8)  
 C. (5 5)  
 D. (3 12)

3)



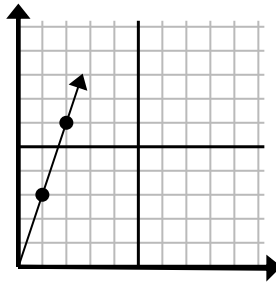
- A. (12 8)  
 B. (9 6)  
 C. (18 12)  
 D. (11 3)

4)



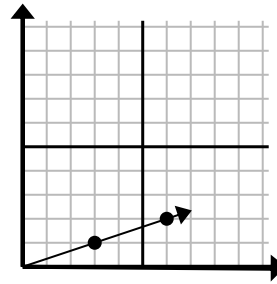
- A. (9 9)  
 B. (12 15)  
 C. (12 7)  
 D. (28 35)

5)



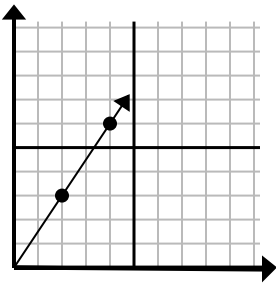
- A. (3 9)  
 B. (4 12)  
 C. (3 5)  
 D. (7 4)

6)



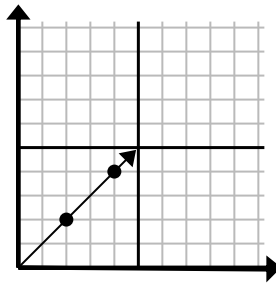
- A. (9 3)  
 B. (11 4)  
 C. (11 5)  
 D. (15 5)

7)



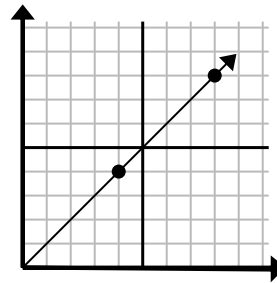
- A. (8 7)  
 B. (6 4)  
 C. (6 9)  
 D. (12 18)

8)



- A. (6 6)  
 B. (8 8)  
 C. (10 10)  
 D. (14 14)

9)

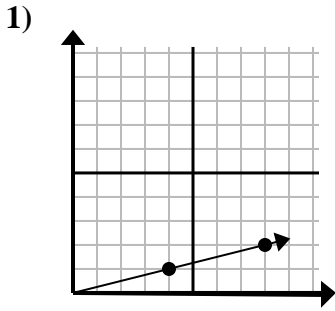


- A. (24 24)  
 B. (12 12)  
 C. (28 28)  
 D. (20 20)

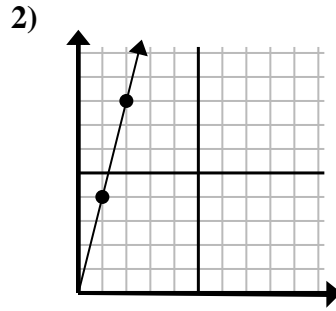
1. \_\_\_\_\_  
 2. \_\_\_\_\_  
 3. \_\_\_\_\_  
 4. \_\_\_\_\_  
 5. \_\_\_\_\_  
 6. \_\_\_\_\_  
 7. \_\_\_\_\_  
 8. \_\_\_\_\_  
 9. \_\_\_\_\_



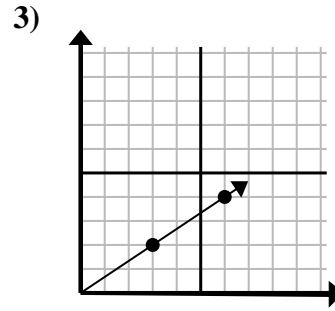
Déterminez quel choix représente un point sur la ligne s'il devait continuer.

**Réponses**

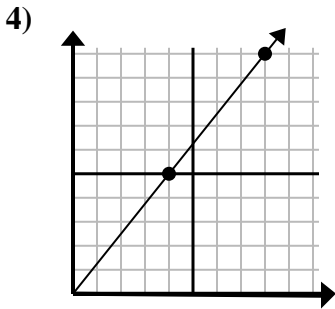
- A. (10 4)  
 B. (13 5)  
 C. (12 3)  
 D. (9 3)



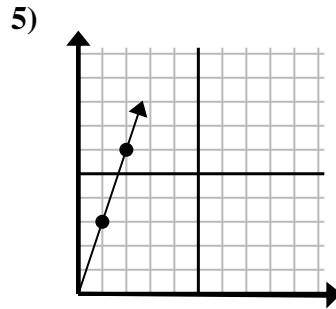
- A. (3 9)  
 B. (7 8)  
 C. (5 5)  
 D. (3 12)



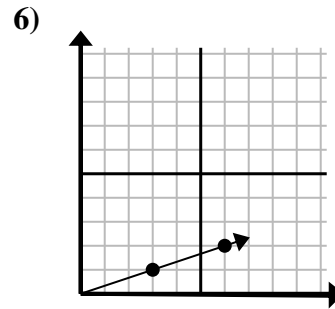
- A. (12 8)  
 B. (9 6)  
 C. (18 12)  
 D. (11 3)



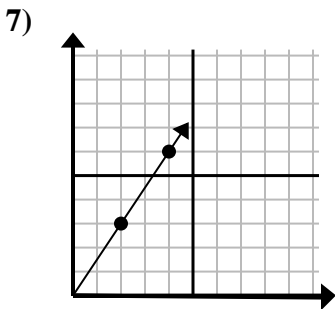
- A. (9 9)  
 B. (12 15)  
 C. (12 7)  
 D. (28 35)



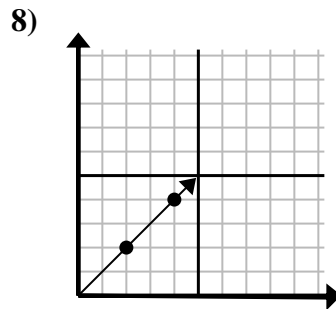
- A. (3 9)  
 B. (4 12)  
 C. (3 5)  
 D. (7 4)



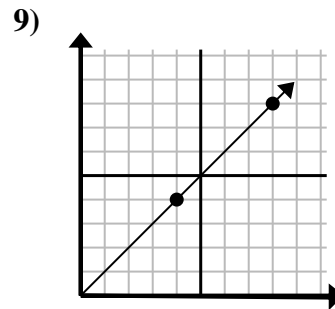
- A. (9 3)  
 B. (11 4)  
 C. (11 5)  
 D. (15 5)



- A. (8 7)  
 B. (6 4)  
 C. (6 9)  
 D. (12 18)



- A. (6 6)  
 B. (8 8)  
 C. (10 10)  
 D. (14 14)



- A. (24 24)  
 B. (12 12)  
 C. (28 28)  
 D. (20 20)

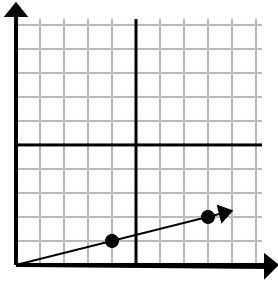
1. **C**  
 2. **D**  
 3. **B**  
 4. **B**  
 5. **A**  
 6. **A**  
 7. **C**  
 8. **A**  
 9. **B**



Déterminez quel choix représente un point sur la ligne s'il devait continuer.

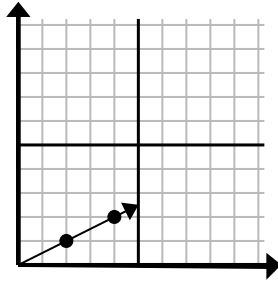
**Réponses**

1)



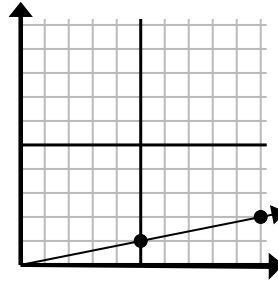
- A. (12 3)
- B. (28 7)
- C. (20 5)
- D. (10 2)

2)



- A. (6 3)
- B. (10 5)
- C. (14 7)
- D. (7 3)

3)



- A. (14 3)
- B. (13 5)
- C. (15 3)
- D. (35 7)

1. \_\_\_\_\_

2. \_\_\_\_\_

3. \_\_\_\_\_

4. \_\_\_\_\_

5. \_\_\_\_\_

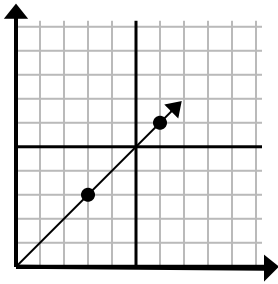
6. \_\_\_\_\_

7. \_\_\_\_\_

8. \_\_\_\_\_

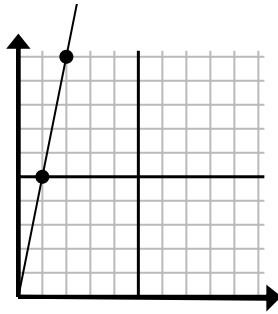
9. \_\_\_\_\_

4)



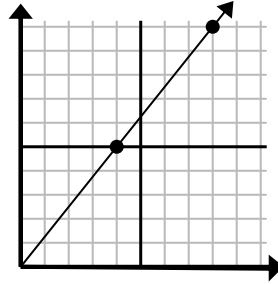
- A. (8 7)
- B. (15 15)
- C. (9 9)
- D. (21 21)

5)



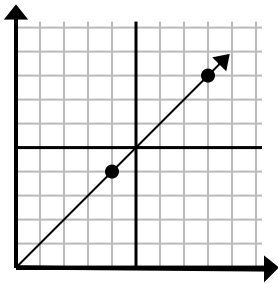
- A. (3 15)
- B. (3 7)
- C. (7 35)
- D. (5 25)

6)



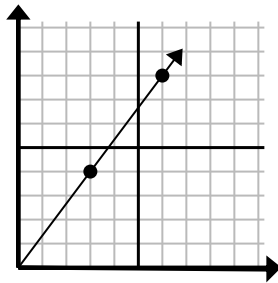
- A. (12 10)
- B. (24 30)
- C. (13 9)
- D. (12 15)

7)



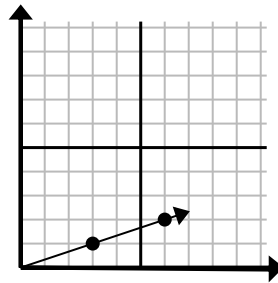
- A. (12 8)
- B. (12 12)
- C. (13 8)
- D. (20 20)

8)



- A. (21 28)
- B. (8 6)
- C. (9 12)
- D. (9 7)

9)



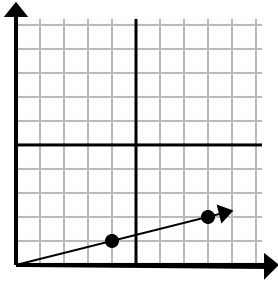
- A. (15 5)
- B. (9 3)
- C. (10 2)
- D. (12 4)



Déterminez quel choix représente un point sur la ligne s'il devait continuer.

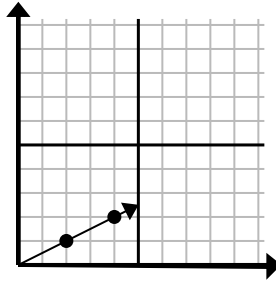
**Réponses**

1)



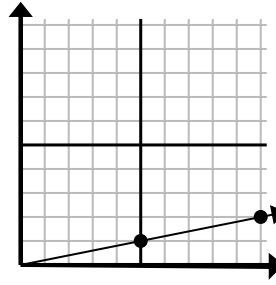
- A. (12 3)  
 B. (28 7)  
 C. (20 5)  
 D. (10 2)

2)



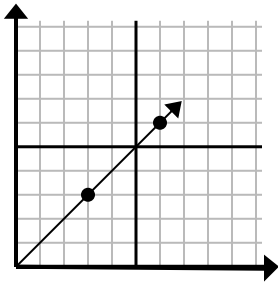
- A. (6 3)  
 B. (10 5)  
 C. (14 7)  
 D. (7 3)

3)



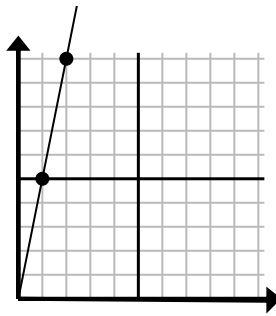
- A. (14 3)  
 B. (13 5)  
 C. (15 3)  
 D. (35 7)

4)



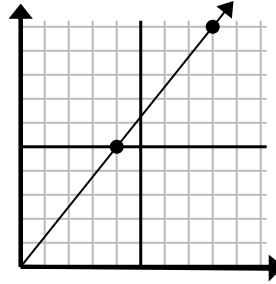
- A. (8 7)  
 B. (15 15)  
 C. (9 9)  
 D. (21 21)

5)



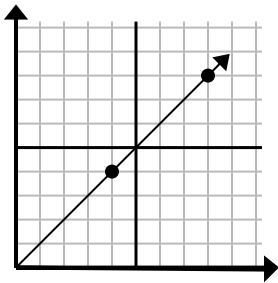
- A. (3 15)  
 B. (3 7)  
 C. (7 35)  
 D. (5 25)

6)



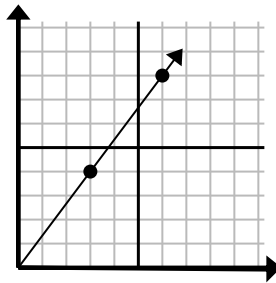
- A. (12 10)  
 B. (24 30)  
 C. (13 9)  
 D. (12 15)

7)



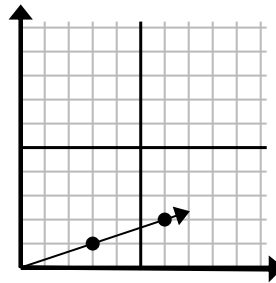
- A. (12 8)  
 B. (12 12)  
 C. (13 8)  
 D. (20 20)

8)



- A. (21 28)  
 B. (8 6)  
 C. (9 12)  
 D. (9 7)

9)



- A. (15 5)  
 B. (9 3)  
 C. (10 2)  
 D. (12 4)

1. **A**  
 2. **A**  
 3. **C**  
 4. **C**  
 5. **A**  
 6. **D**  
 7. **B**  
 8. **C**  
 9. **B**