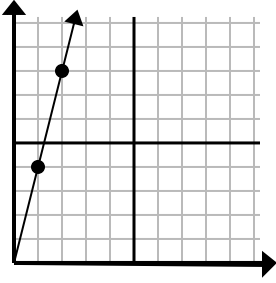




Déterminez quel choix représente un point sur la ligne s'il devait continuer.

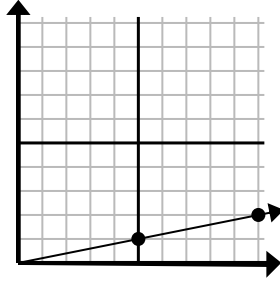
Réponses

1)



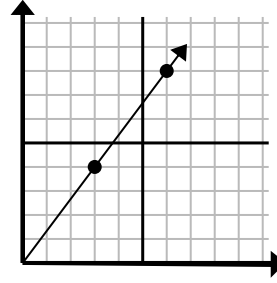
- A. (7 7)
- B. (5 20)
- C. (6 24)
- D. (3 12)

2)



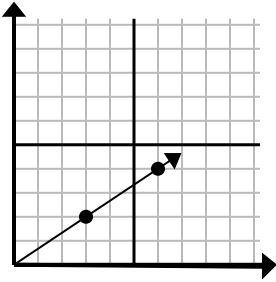
- A. (30 6)
- B. (12 5)
- C. (11 4)
- D. (15 3)

3)



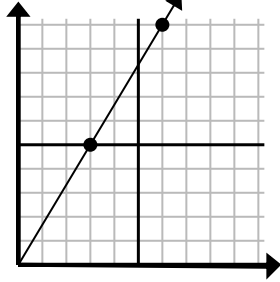
- A. (9 12)
- B. (8 5)
- C. (21 28)
- D. (7 8)

4)



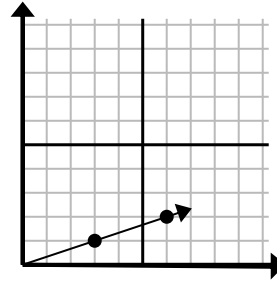
- A. (12 8)
- B. (9 6)
- C. (15 10)
- D. (9 7)

5)



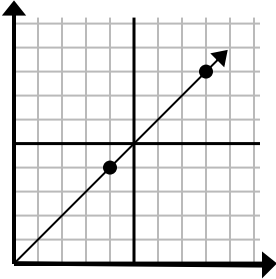
- A. (7 7)
- B. (9 15)
- C. (21 35)
- D. (12 20)

6)



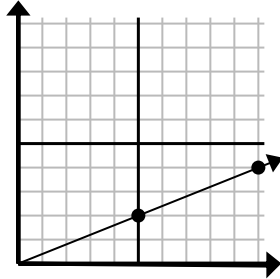
- A. (9 3)
- B. (15 5)
- C. (11 4)
- D. (18 6)

7)



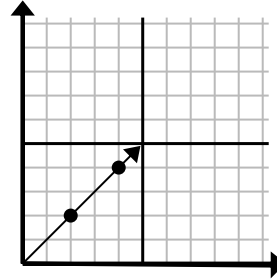
- A. (12 12)
- B. (28 28)
- C. (16 16)
- D. (11 8)

8)



- A. (35 14)
- B. (15 6)
- C. (11 3)
- D. (30 12)

9)



- A. (8 8)
- B. (7 3)
- C. (6 6)
- D. (14 14)

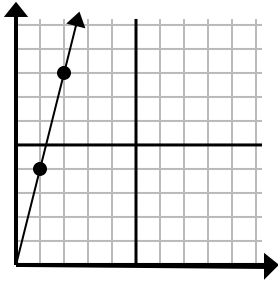
1. _____
2. _____
3. _____
4. _____
5. _____
6. _____
7. _____
8. _____
9. _____



Déterminez quel choix représente un point sur la ligne s'il devait continuer.

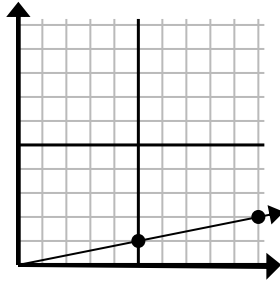
Réponses

1)



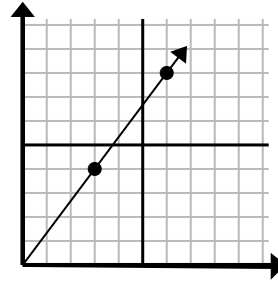
- A. (7 7)
 B. (5 20)
 C. (6 24)
 D. (3 12)

2)



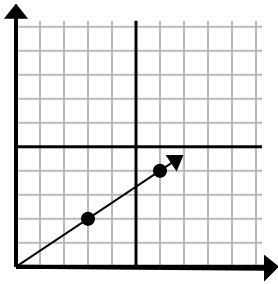
- A. (30 6)
 B. (12 5)
 C. (11 4)
 D. (15 3)

3)



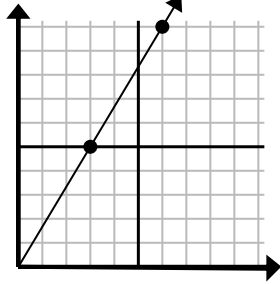
- A. (9 12)
 B. (8 5)
 C. (21 28)
 D. (7 8)

4)



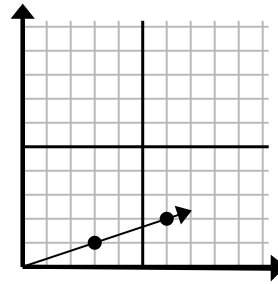
- A. (12 8)
 B. (9 6)
 C. (15 10)
 D. (9 7)

5)



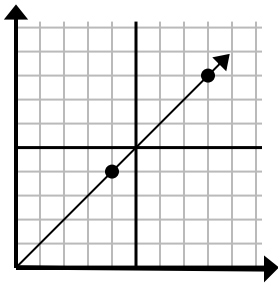
- A. (7 7)
 B. (9 15)
 C. (21 35)
 D. (12 20)

6)



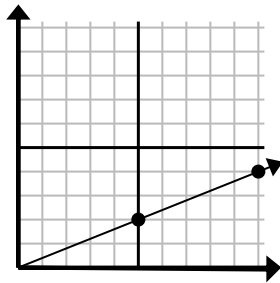
- A. (9 3)
 B. (15 5)
 C. (11 4)
 D. (18 6)

7)



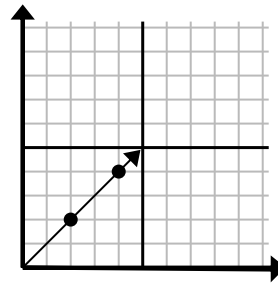
- A. (12 12)
 B. (28 28)
 C. (16 16)
 D. (11 8)

8)



- A. (35 14)
 B. (15 6)
 C. (11 3)
 D. (30 12)

9)



- A. (8 8)
 B. (7 3)
 C. (6 6)
 D. (14 14)

1. **D**
 2. **D**
 3. **A**
 4. **B**
 5. **B**
 6. **A**
 7. **A**
 8. **B**
 9. **C**