



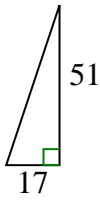
Déterminez quel choix a la même pente que celui illustré.

**Réponses**

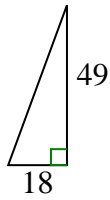
1)



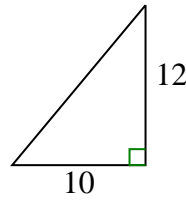
A.



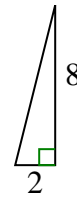
B.



C.



D.



1. \_\_\_\_\_

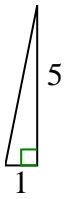
2. \_\_\_\_\_

3. \_\_\_\_\_

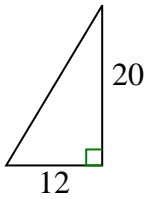
4. \_\_\_\_\_

5. \_\_\_\_\_

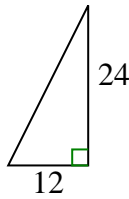
2)



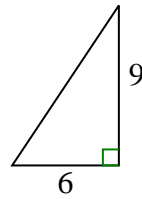
A.



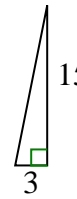
B.



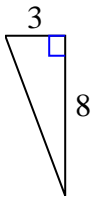
C.



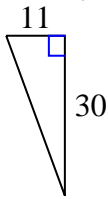
D.



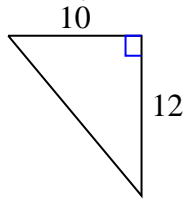
3)



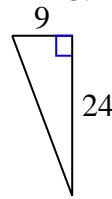
A.



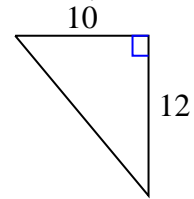
B.



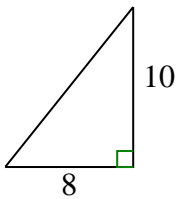
C.



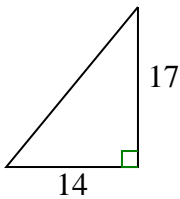
D.



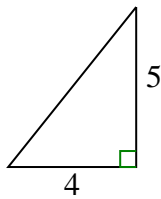
4)



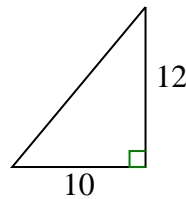
A.



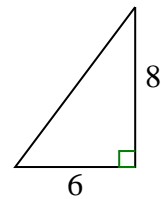
B.



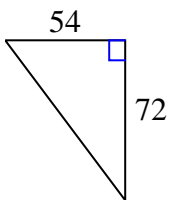
C.



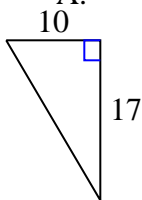
D.



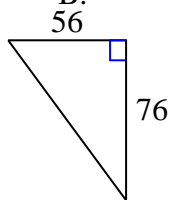
5)



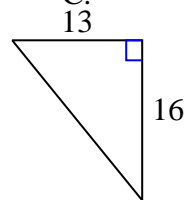
A.



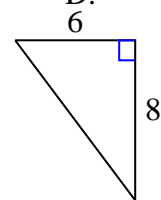
B.



C.



D.





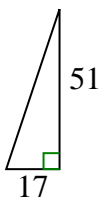
Déterminez quel choix a la même pente que celui illustré.

**Réponses**

1)



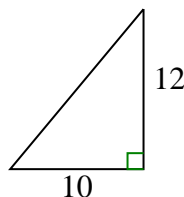
A.



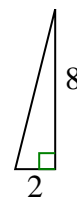
B.



C.

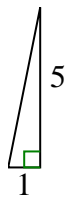


D.

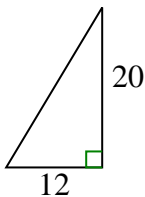


1. **D**

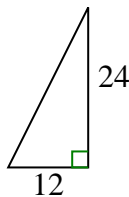
2)



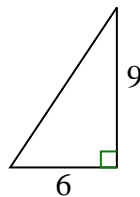
A.



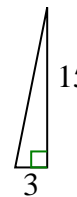
B.



C.



D.



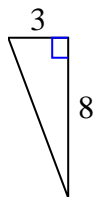
2. **D**

3. **C**

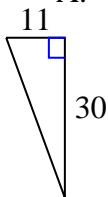
4. **B**

5. **D**

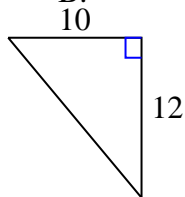
3)



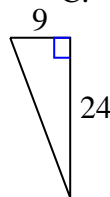
A.



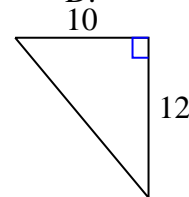
B.



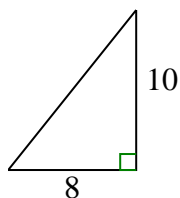
C.



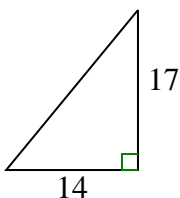
D.



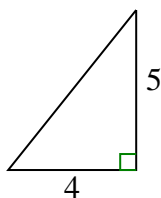
4)



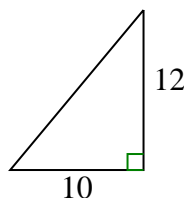
A.



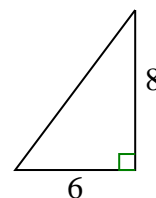
B.



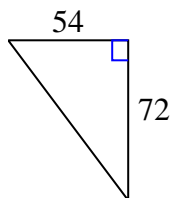
C.



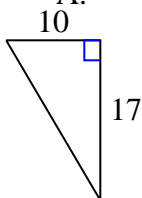
D.



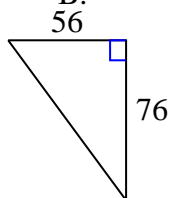
5)



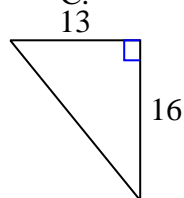
A.



B.



C.



D.

