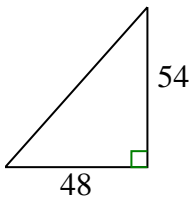




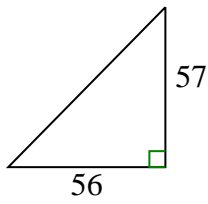
Déterminez quel choix a la même pente que celui illustré.

Réponses

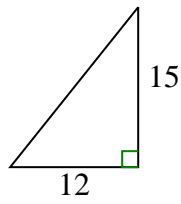
1)



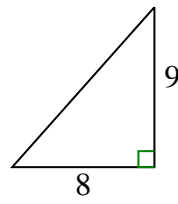
A.



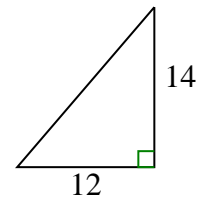
B.



C.



D.



1. _____

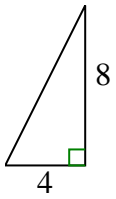
2. _____

3. _____

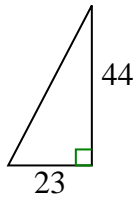
4. _____

5. _____

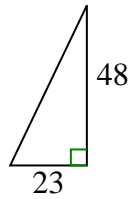
2)



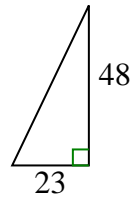
A.



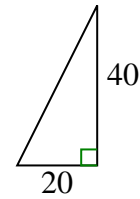
B.



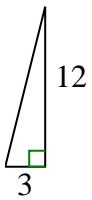
C.



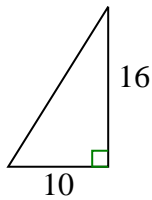
D.



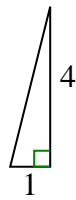
3)



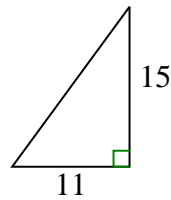
A.



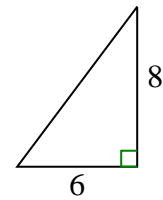
B.



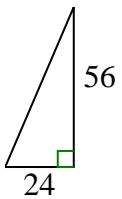
C.



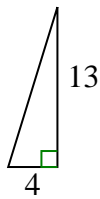
D.



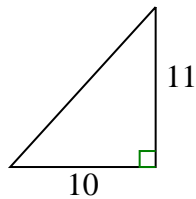
4)



A.



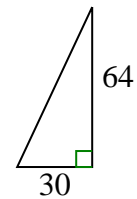
B.



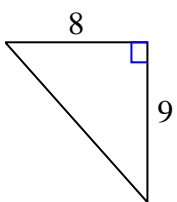
C.



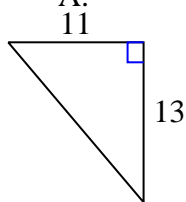
D.



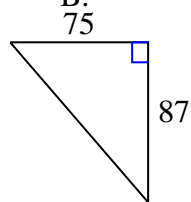
5)



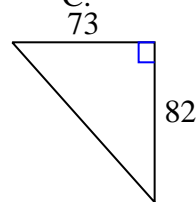
A.



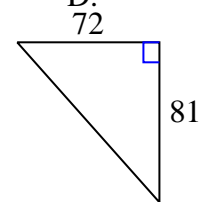
B.



C.



D.

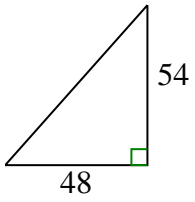




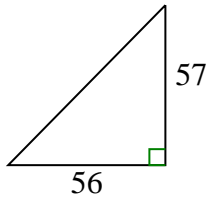
Déterminez quel choix a la même pente que celui illustré.

Réponses

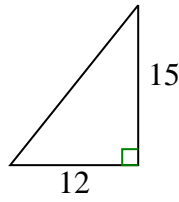
1)



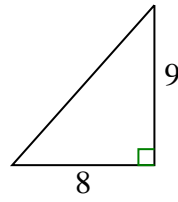
A.



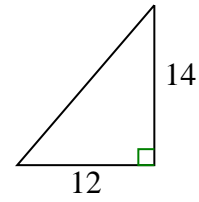
B.



C.

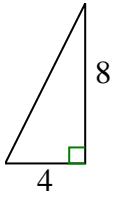


D.

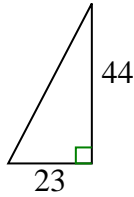


1. **C**

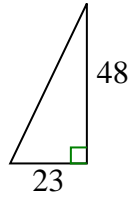
2)



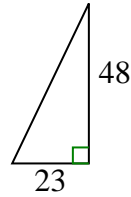
A.



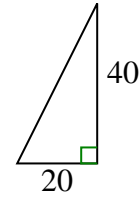
B.



C.



D.



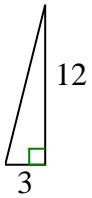
2. **D**

3. **B**

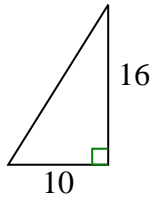
4. **C**

5. **D**

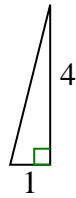
3)



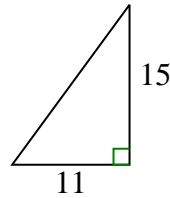
A.



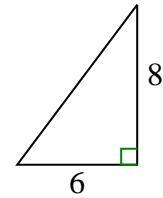
B.



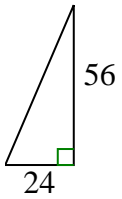
C.



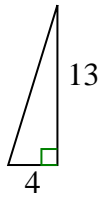
D.



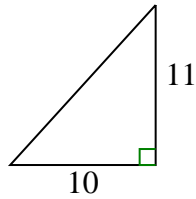
4)



A.



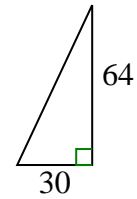
B.



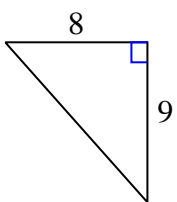
C.



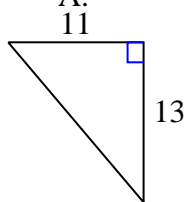
D.



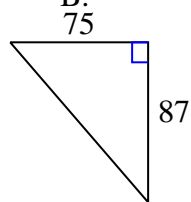
5)



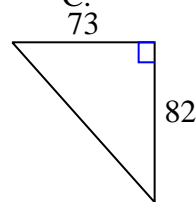
A.



B.



C.



D.

