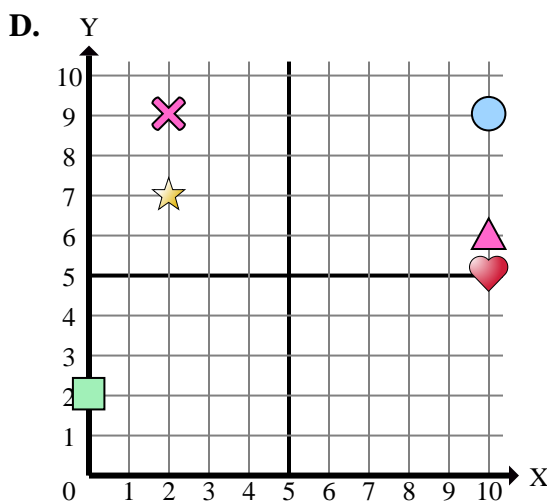
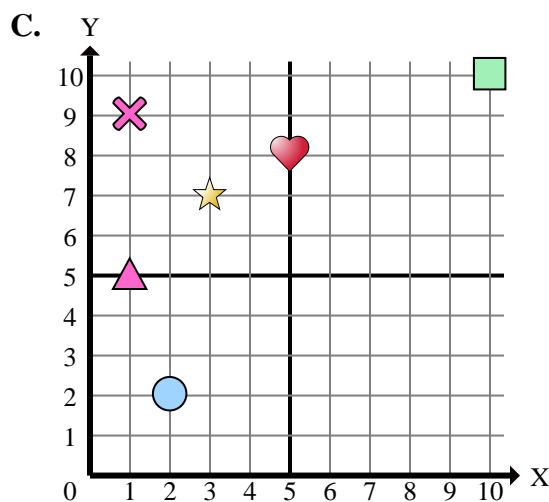
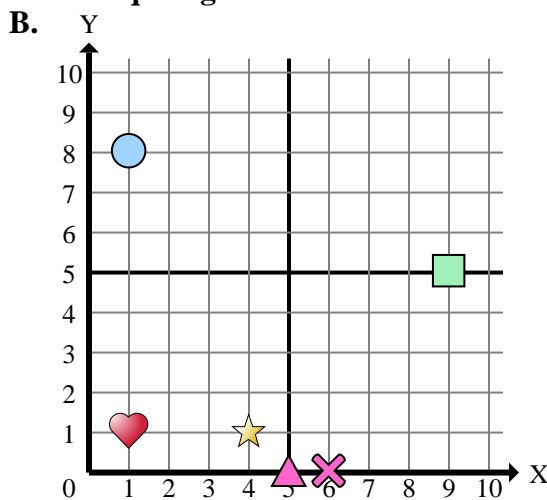
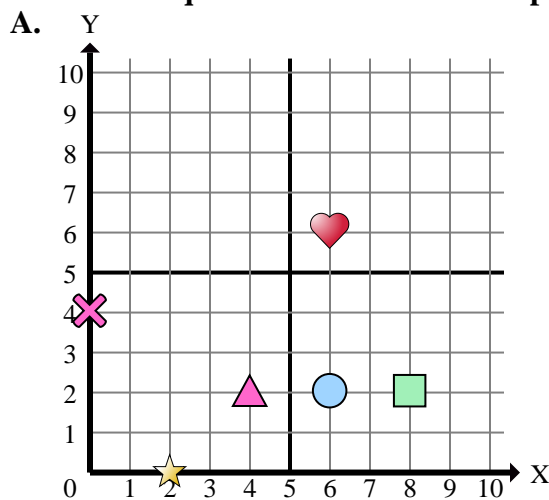




Déterminez quelle coordonnées correspondant à chaque figure.

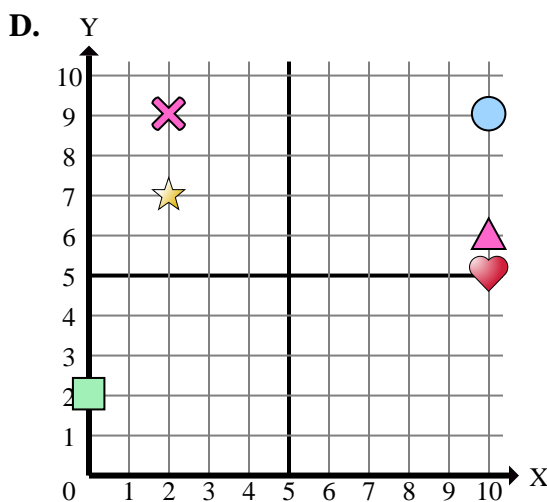
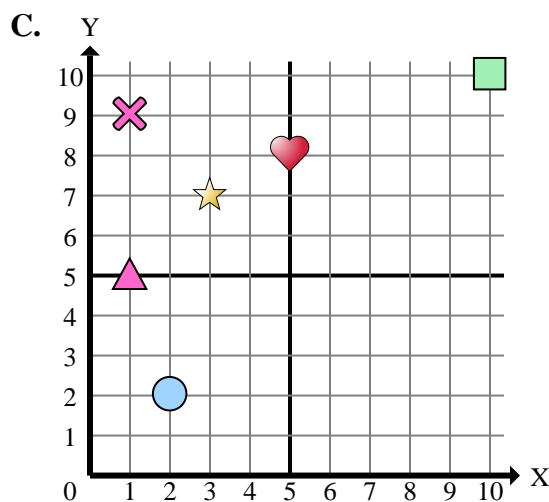
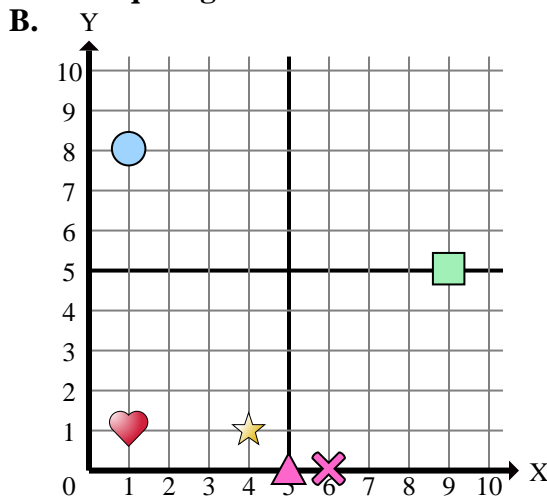
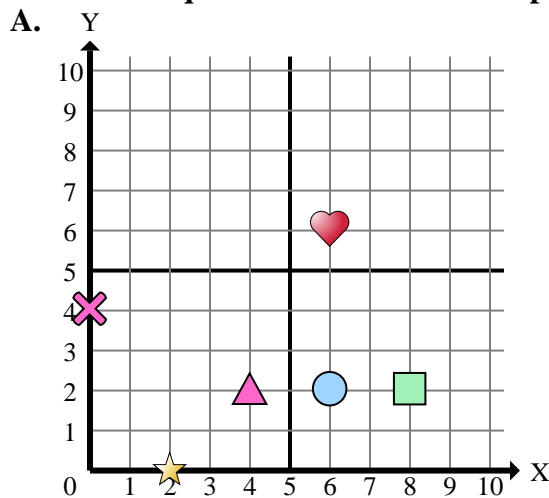
**Réponses**

1. \_\_\_\_\_
2. \_\_\_\_\_
3. \_\_\_\_\_
4. \_\_\_\_\_
5. \_\_\_\_\_
6. \_\_\_\_\_
7. \_\_\_\_\_
8. \_\_\_\_\_
9. \_\_\_\_\_
10. \_\_\_\_\_
11. \_\_\_\_\_
12. \_\_\_\_\_
13. \_\_\_\_\_
14. \_\_\_\_\_
15. \_\_\_\_\_

- 1) Which coordinate plane has a shape at (1 , 8)?
- 2) Which coordinate plane has a shape at (0 , 4)?
- 3) Which coordinate plane has a shape at (1 , 1)?
- 4) Which coordinate plane has a shape at (6 , 0)?
- 5) Which coordinate plane has a shape at (10 , 5)?
- 6) Which coordinate plane has a shape at (9 , 5)?
- 7) Which coordinate plane has a shape at (2 , 0)?
- 8) Which coordinate plane has a shape at (6 , 2)?
- 9) Which coordinate plane has a shape at (4 , 2)?
- 10) Which coordinate plane has a shape at (10 , 10)?
- 11) Which coordinate plane has a shape at (8 , 2)?
- 12) Which coordinate plane has a shape at (2 , 7)?
- 13) Which coordinate plane has a shape at (1 , 5)?
- 14) Which coordinate plane has a shape at (6 , 6)?
- 15) Which coordinate plane has a shape at (3 , 7)?



Déterminez quelle coordonnées correspondant à chaque figure.

**Réponses**

1. **B**
2. **A**
3. **B**
4. **B**
5. **D**
6. **B**
7. **A**
8. **A**
9. **A**
10. **C**
11. **A**
12. **D**
13. **C**
14. **A**
15. **C**

- 1) Which coordinate plane has a shape at (1 , 8)?
- 2) Which coordinate plane has a shape at (0 , 4)?
- 3) Which coordinate plane has a shape at (1 , 1)?
- 4) Which coordinate plane has a shape at (6 , 0)?
- 5) Which coordinate plane has a shape at (10 , 5)?
- 6) Which coordinate plane has a shape at (9 , 5)?
- 7) Which coordinate plane has a shape at (2 , 0)?
- 8) Which coordinate plane has a shape at (6 , 2)?
- 9) Which coordinate plane has a shape at (4 , 2)?
- 10) Which coordinate plane has a shape at (10 , 10)?
- 11) Which coordinate plane has a shape at (8 , 2)?
- 12) Which coordinate plane has a shape at (2 , 7)?
- 13) Which coordinate plane has a shape at (1 , 5)?
- 14) Which coordinate plane has a shape at (6 , 6)?
- 15) Which coordinate plane has a shape at (3 , 7)?