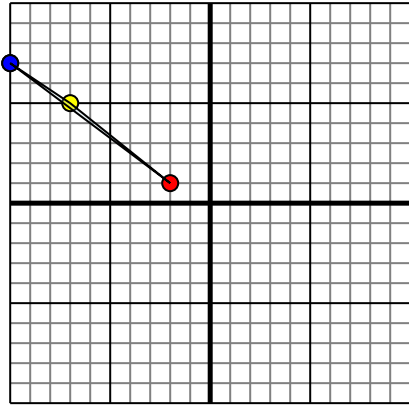




Reflétez chaque forme comme décrit.

**Réponses**

1)

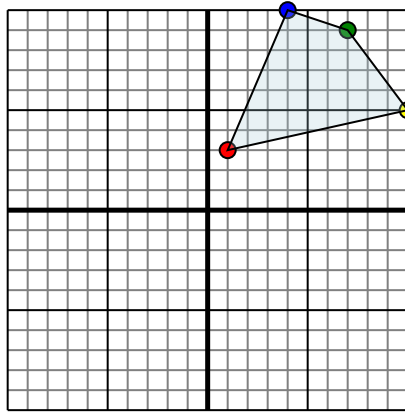


The shape above has the following coordinates:

- A. (-2,1)
- B. (-7,5)
- C. (-10,7)

Reflect the shape over the Y axis.

2)

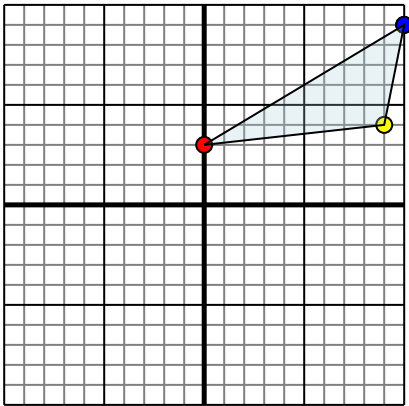


The shape above has the following coordinates:

- A. (1,3)
- B. (10,5)
- C. (7,9)
- D. (4,10)

Reflect the shape over the Y axis.

3)

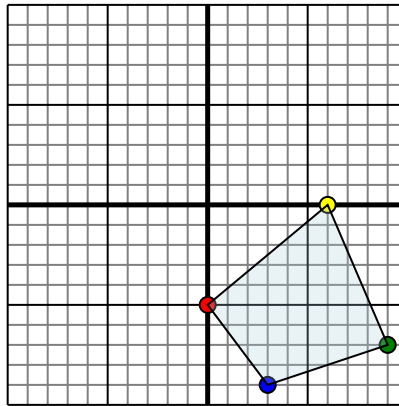


The shape above has the following coordinates:

- A. (0,3)
- B. (9,4)
- C. (10,9)

Reflect the shape over the Y axis.

4)



The shape above has the following coordinates:

- A. (0,-5)
- B. (6,0)
- C. (9,-7)
- D. (3,-9)

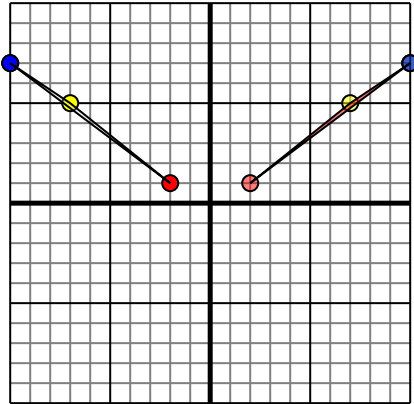
Reflect the shape over the Y axis.

- 1. \_\_\_\_\_
- 2. \_\_\_\_\_
- 3. \_\_\_\_\_
- 4. \_\_\_\_\_



Reflétez chaque forme comme décrit.

1)

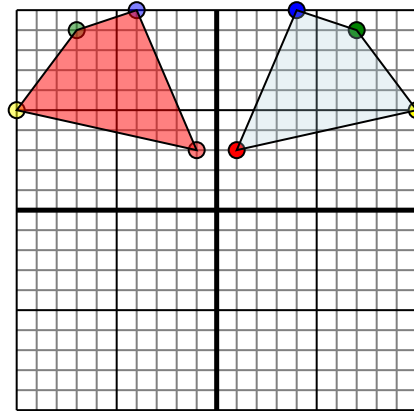


The shape above has the following coordinates:

- A. (-2,1)
- B. (-7,5)
- C. (-10,7)

Reflect the shape over the Y axis.

2)

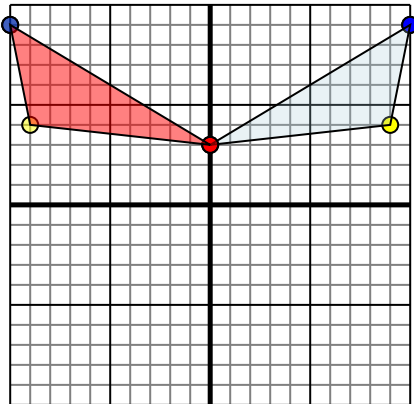


The shape above has the following coordinates:

- A. (1,3)
- B. (10,5)
- C. (7,9)
- D. (4,10)

Reflect the shape over the Y axis.

3)

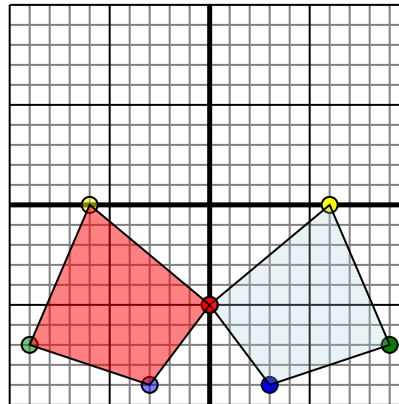


The shape above has the following coordinates:

- A. (0,3)
- B. (9,4)
- C. (10,9)

Reflect the shape over the Y axis.

4)



The shape above has the following coordinates:

- A. (0,-5)
- B. (6,0)
- C. (9,-7)
- D. (3,-9)

Reflect the shape over the Y axis.

## Réponses

1. **21** **75** **107** Graph

2. **-13** **-105** **-79** **-410** Graph

3. **03** **-94** **-109** Graph

4. **0-5** **-60** **-9-7** **-3-9** Graph