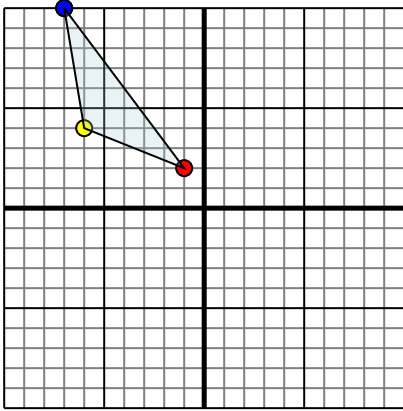




Reflétez chaque forme comme décrit.

Réponses

1)

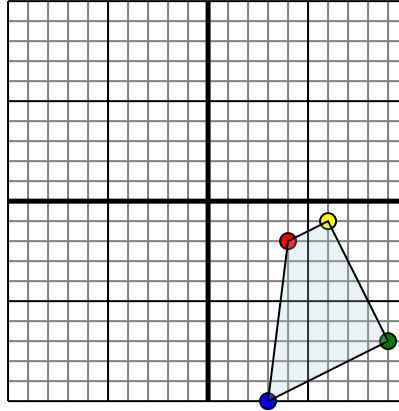


The shape above has the following coordinates:

- A. (-1,2)
- B. (-6,4)
- C. (-7,10)

Reflect the shape over the Y axis.

2)

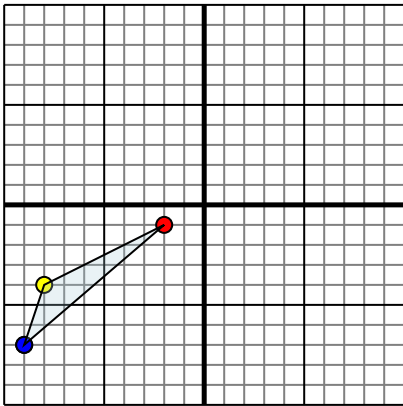


The shape above has the following coordinates:

- A. (4,-2)
- B. (6,-1)
- C. (9,-7)
- D. (3,-10)

Reflect the shape over the X axis.

3)

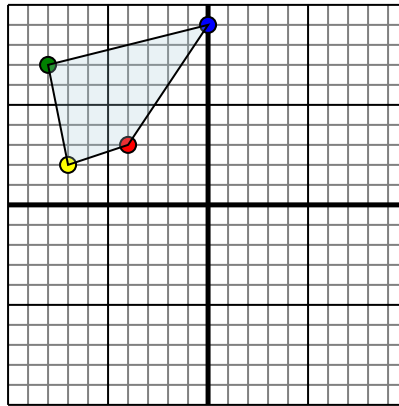


The shape above has the following coordinates:

- A. (-2,-1)
- B. (-8,-4)
- C. (-9,-7)

Reflect the shape over the X axis.

4)



The shape above has the following coordinates:

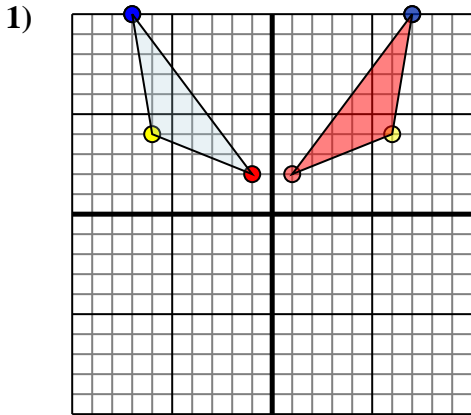
- A. (-4,3)
- B. (-7,2)
- C. (-8,7)
- D. (0,9)

Reflect the shape over the Y axis.

- 1. _____
- 2. _____
- 3. _____
- 4. _____



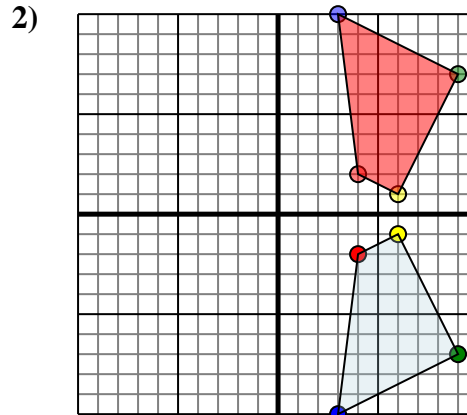
Reflétez chaque forme comme décrit.



The shape above has the following coordinates:

- A. (-1,2)
- B. (-6,4)
- C. (-7,10)

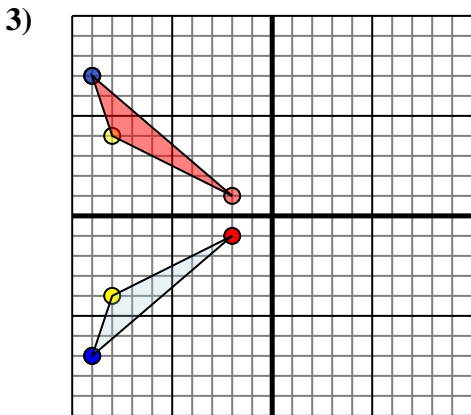
Reflect the shape over the Y axis.



The shape above has the following coordinates:

- A. (4,-2)
- B. (6,-1)
- C. (9,-7)
- D. (3,-10)

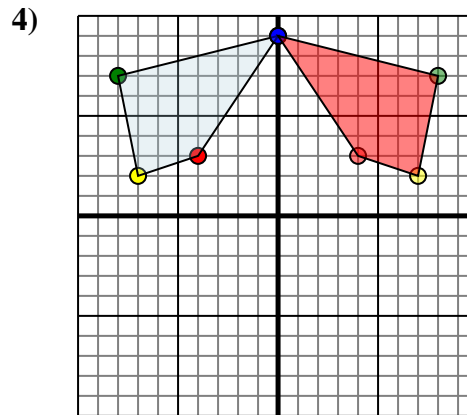
Reflect the shape over the X axis.



The shape above has the following coordinates:

- A. (-2,-1)
- B. (-8,-4)
- C. (-9,-7)

Reflect the shape over the X axis.



The shape above has the following coordinates:

- A. (-4,3)
- B. (-7,2)
- C. (-8,7)
- D. (0,9)

Reflect the shape over the Y axis.

Réponses

1. **1 2 6 4 7 10** Graph
2. **4 2 1 9 7 3 10** Graph
3. **-2 1 -8 4 -9 7** Graph
4. **4 3 7 2 8 7 0 9** Graph