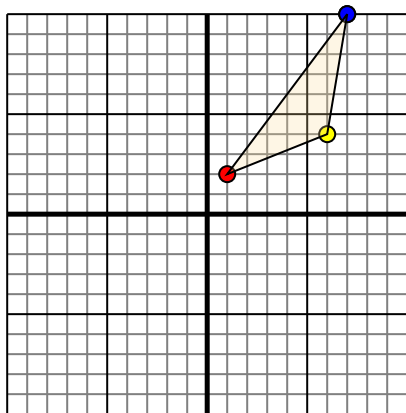




Effectuez une translation comme demandé.

Réponses

1)

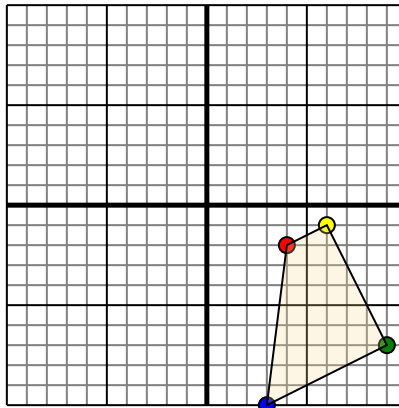


The shape above has the following coordinates:

- A. (1,2)
- B. (6,4)
- C. (7,10)

Move the shape 5 units left and 7 units down.

2)

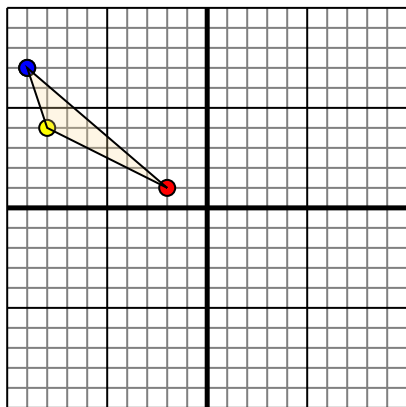


The shape above has the following coordinates:

- A. (4,-2)
- B. (6,-1)
- C. (9,-7)
- D. (3,-10)

Move the shape 3 units left and 6 units up.

3)

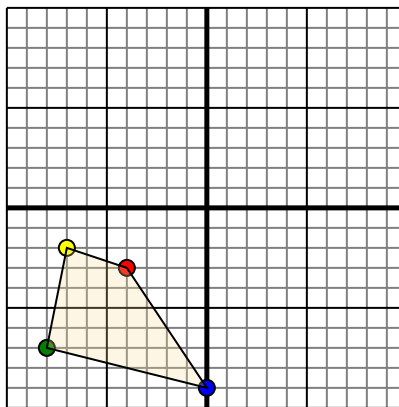


The shape above has the following coordinates:

- A. (-2,1)
- B. (-8,4)
- C. (-9,7)

Move the shape 9 units obtus and 6 units down.

4)



The shape above has the following coordinates:

- A. (-4,-3)
- B. (-7,-2)
- C. (-8,-7)
- D. (0,-9)

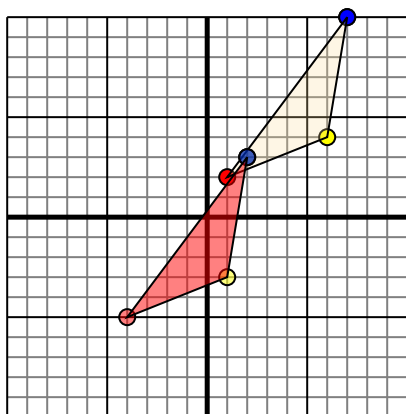
Move the shape 5 units obtus and 3 units up.

- 1. _____ [Graph](#)
- 2. _____ [Graph](#)
- 3. _____ [Graph](#)
- 4. _____ [Graph](#)



Effectuez une translation comme demandé.

1)

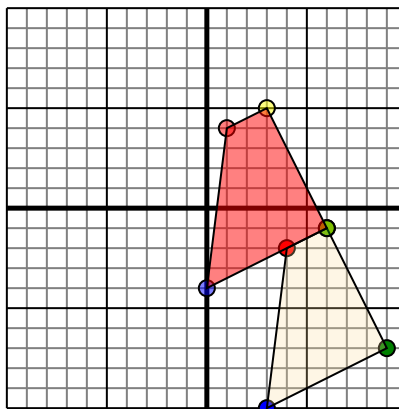


The shape above has the following coordinates:

- A. (1,2)
- B. (6,4)
- C. (7,10)

Move the shape 5 units left and 7 units down.

2)

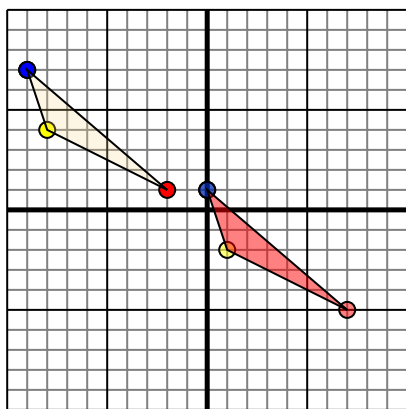


The shape above has the following coordinates:

- A. (4,-2)
- B. (6,-1)
- C. (9,-7)
- D. (3,-10)

Move the shape 3 units left and 6 units up.

3)

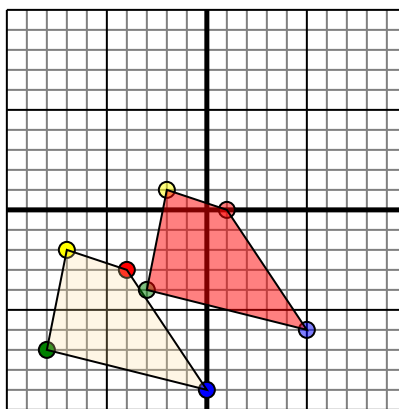


The shape above has the following coordinates:

- A. (-2,1)
- B. (-8,4)
- C. (-9,7)

Move the shape 9 units obtus and 6 units down.

4)



The shape above has the following coordinates:

- A. (-4,-3)
- B. (-7,-2)
- C. (-8,-7)
- D. (0,-9)

Move the shape 5 units obtus and 3 units up.

Réponses

1. -4-5 1-3 2 3 [Graph](#)
1
2. 4 3 5 6-1 0-4 [Graph](#)
1
3. 7-5 1-2 0 1 [Graph](#)
1
4. 0 -2 1 -3-4 5-6 [Graph](#)