

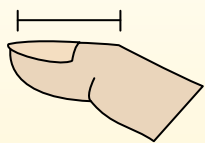


Déterminez quelle lettre représente le mieux la longueur / hauteur.

Réponses

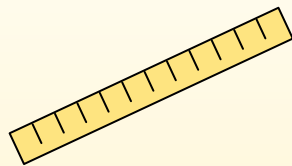
Polegadas (in)

Una pulgada es aproximadamente la distancia de la última articulación de su dedo.



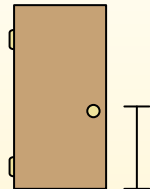
Pie (pies)

Um pé mede 12 polegadas. O comprimento de uma régua.



Jarda (jd)

1 jarda é o mesmo que 3 pés. Do chão até a maçaneta da porta são cerca de 1 jarda.



Milla (mi)

Uma milha equivale a 5.280 pés. A maioria das estradas principais tem pelo menos uma milha de comprimento.



1. _____
2. _____
3. _____
4. _____
5. _____
6. _____
7. _____
8. _____
9. _____

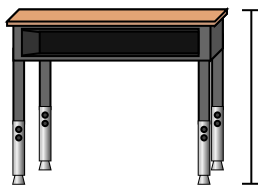
1)



Stylo

- A. 5 inches
- B. 12 inches
- C. 1 foot
- D. 5 yards

2)



Bureau

- A. 6 inches
- B. 2 yards
- C. 2 feet
- D. 11 inches

3)



Grenouille

- A. 9 inches
- B. 3 inches
- C. 1 foot
- D. 2 feet

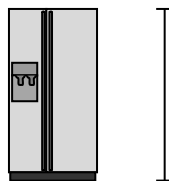
4)



Bicyclette

- A. 3 inches
- B. 1 yard
- C. 3 yards
- D. 10 inches

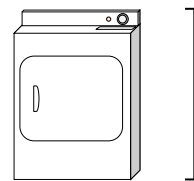
5)



Réfrigérateur

- A. 6 feet
- B. 1 foot
- C. 12 inches
- D. 4 yards

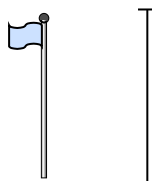
6)



Sèche-linge

- A. 2 feet
- B. 1 yard
- C. 11 inches
- D. 6 inches


7)



mât de drapeau

- A. 5 feet
- B. 10 yards
- C. 1 mile
- D. 12 inches

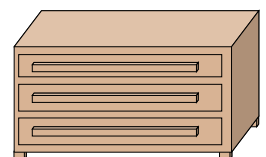
8)



Balle de tennis

- A. 1 foot
- B. 7 inches
- C. 3 inches
- D. 2 feet

9)



Une commode

- A. 18 inches
- B. 3 feet
- C. 3 yards
- D. 12 inches

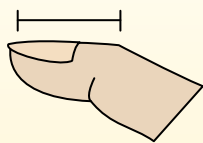


Déterminez quelle lettre représente le mieux la longueur / hauteur.

Réponses

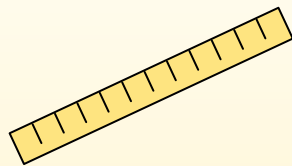
Polegadas (in)

Una pulgada es aproximadamente la distancia de la última articulación de su dedo.



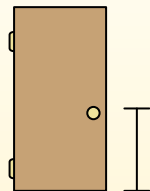
Pie (pies)

Um pé mede 12 polegadas. O comprimento de uma régua.



Jarda (jd)

1 jarda é o mesmo que 3 pés. Do chão até a maçaneta da porta são cerca de 1 jarda.



Milla (mi)

Uma milha equivale a 5.280 pés. A maioria das estradas principais tem pelo menos uma milha de comprimento.



1. **A**

2. **C**

3. **B**

4. **B**

5. **A**

6. **B**

7. **B**

8. **C**

9. **B**

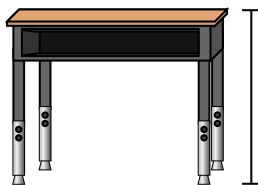
1)



Stylo

- A. 5 inches
- B. 12 inches
- C. 1 foot
- D. 5 yards

2)



Bureau

- A. 6 inches
- B. 2 yards
- C. 2 feet
- D. 11 inches

3)



Grenouille

- A. 9 inches
- B. 3 inches
- C. 1 foot
- D. 2 feet

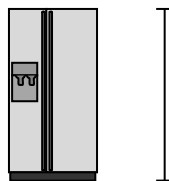
4)



Bicyclette

- A. 3 inches
- B. 1 yard
- C. 3 yards
- D. 10 inches

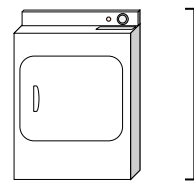
5)



Réfrigérateur

- A. 6 feet
- B. 1 foot
- C. 12 inches
- D. 4 yards

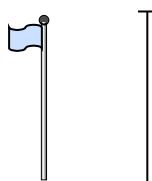
6)



Sèche-linge

- A. 2 feet
- B. 1 yard
- C. 11 inches
- D. 6 inches


7)



mât de drapeau

- A. 5 feet
- B. 10 yards
- C. 1 mile
- D. 12 inches

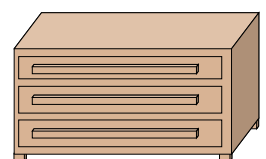
8)



Balle de tennis

- A. 1 foot
- B. 7 inches
- C. 3 inches
- D. 2 feet

9)



Une commode

- A. 18 inches
- B. 3 feet
- C. 3 yards
- D. 12 inches