

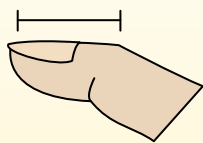


Déterminez quelle lettre représente le mieux la longueur / hauteur.

Réponses

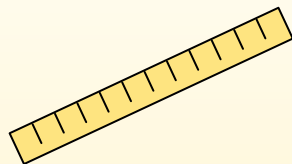
Polegadas (in)

Una pulgada es aproximadamente la distancia de la última articulación de su dedo.



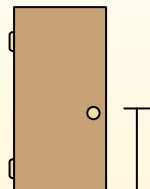
Pie (pies)

Um pé mede 12 polegadas. O comprimento de uma régua.



Jarda (jd)

1 jarda é o mesmo que 3 pés. Do chão até a maçaneta da porta são cerca de 1 jarda.



Milla (mi)

Uma milha equivale a 5.280 pés. A maioria das estradas principais tem pelo menos uma milha de comprimento.



1. _____
2. _____
3. _____
4. _____
5. _____
6. _____
7. _____
8. _____
9. _____

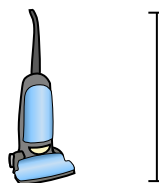
1)



Bicyclette

- A. 3 inches
- B. 10 inches
- C. 1 yard
- D. 3 yards

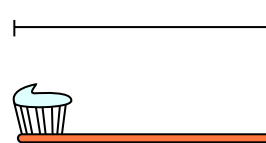
2)



Vide

- A. 11 inches
- B. 4 feet
- C. 3 yards
- D. 1 foot


3)



Brosse à dents

- A. 1 yard
- B. 10 feet
- C. 7 inches
- D. 4 inches


4)



Hauteur de la boîte de céréales

- A. 4 inches
- B. 2 feet
- C. 1 inch
- D. 1 foot


5)



l'éléphant

- A. 1 mile
- B. 5 feet
- C. 18 inches
- D. 4 yards

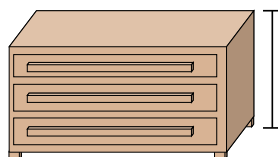
6)



Sèche-linge

- A. 6 inches
- B. 2 feet
- C. 11 inches
- D. 1 yard

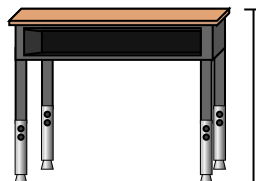
7)



Une commode

- A. 12 inches
- B. 3 yards
- C. 3 feet
- D. 18 inches

8)



Bureau

- A. 6 inches
- B. 11 inches
- C. 2 feet
- D. 2 yards

9)



Bogue

- A. 3 yards
- B. 3 inches
- C. 1 foot
- D. 1 inch

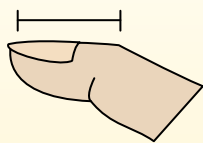


Déterminez quelle lettre représente le mieux la longueur / hauteur.

Réponses

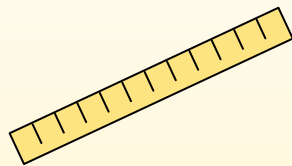
Polegadas (in)

Una pulgada es aproximadamente la distancia de la última articulación de su dedo.



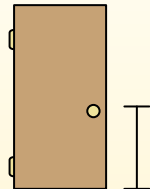
Pie (pies)

Um pé mede 12 polegadas. O comprimento de uma régua.



Jarda (jd)

1 jarda é o mesmo que 3 pés. Do chão até a maçaneta da porta são cerca de 1 jarda.



Milla (mi)

Uma milha equivale a 5.280 pés. A maioria das estradas principais tem pelo menos uma milha de comprimento.



1. **C**

2. **B**

3. **C**

4. **D**

5. **D**




Bicyclette

- A. 3 inches
- B. 10 inches
- C. 1 yard
- D. 3 yards



Vide

- A. 11 inches
- B. 4 feet
- C. 3 yards
- D. 1 foot



Brosse à dents


- A. 1 yard
- B. 10 feet
- C. 7 inches
- D. 4 inches

6. **D**

7. **C**


8. **C**

9. **D**



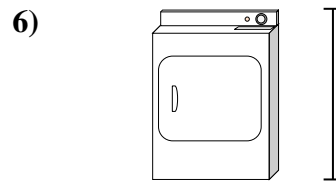
Hauteur de la boîte de céréales

- A. 4 inches
- B. 2 feet
- C. 1 inch
- D. 1 foot



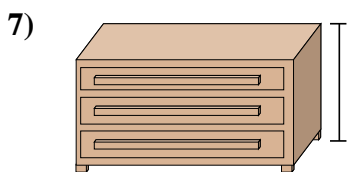
l'éléphant

- A. 1 mile
- B. 5 feet
- C. 18 inches
- D. 4 yards



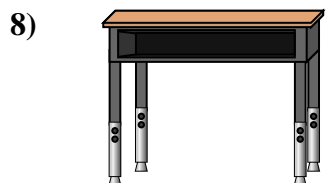
Sèche-linge

- A. 6 inches
- B. 2 feet
- C. 11 inches
- D. 1 yard



Une commode

- A. 12 inches
- B. 3 yards
- C. 3 feet
- D. 18 inches



Bureau

- A. 6 inches
- B. 11 inches
- C. 2 feet
- D. 2 yards



Bogue

- A. 3 yards
- B. 3 inches
- C. 1 foot
- D. 1 inch