

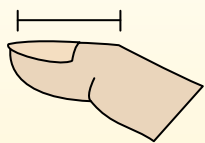


Déterminez quelle lettre représente le mieux la longueur / hauteur.

Réponses

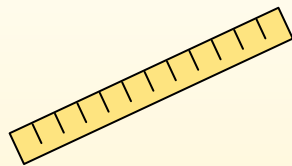
Polegadas (in)

Una pulgada es aproximadamente la distancia de la última articulación de su dedo.



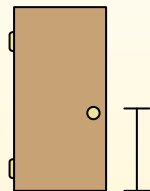
Pie (pies)

Um pé mede 12 polegadas. O comprimento de uma régua.



Jarda (jd)

1 jarda é o mesmo que 3 pés. Do chão até a maçaneta da porta são cerca de 1 jarda.




Milla (mi)

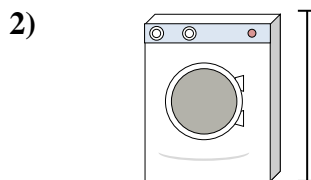
Uma milha equivale a 5.280 pés. A maioria das estradas principais tem pelo menos uma milha de comprimento.




1. _____
2. _____
3. _____
4. _____
5. _____
6. _____
7. _____
8. _____
9. _____



Canette de soda
A. 1 foot
B. 1 inch
C. 1 yard
D. 4 inches




Machine à laver
A. 3 feet
B. 1 foot
C. 2 yards
D. 4 inches




Sucette
A. 1 foot
B. 3 inches
C. 1 mile
D. 5 inches



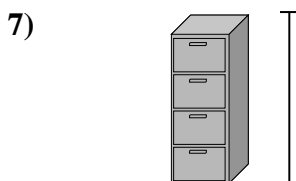
Bicyclette
A. 10 inches
B. 3 inches
C. 1 yard
D. 3 yards



Pelle
A. 11 inches
B. 2 feet
C. 4 feet
D. 3 yards



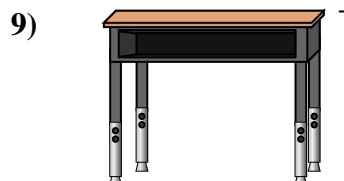
Hauteur de la boule de bowling
A. 10 inches
B. 10 feet
C. 1 yard
D. 4 inches



FichierCabinet
A. 11 inches
B. 5 feet
C. 1 foot
D. 2 feet



Crayon
A. 1 yard
B. 7 inches
C. 1 foot
D. 1 inch



Bureau
A. 2 yards
B. 6 inches
C. 11 inches
D. 2 feet

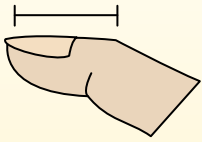


Déterminez quelle lettre représente le mieux la longueur / hauteur.

Réponses

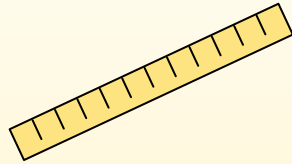
Polegadas (in)

Una pulgada es aproximadamente la distancia de la última articulación de su dedo.



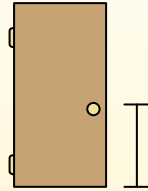
Pie (pies)

Um pé mede 12 polegadas. O comprimento de uma régua.



Jarda (jd)

1 jarda é o mesmo que 3 pés. Do chão até a maçaneta da porta são cerca de 1 jarda.




Milla (mi)

Uma milha equivale a 5.280 pés. A maioria das estradas principais tem pelo menos uma milha de comprimento.



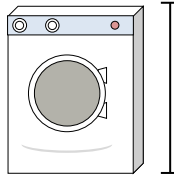
1)



Canette de soda

- A. 1 foot
- B. 1 inch
- C. 1 yard
- D. 4 inches


2)



Machine à laver

- A. 3 feet
- B. 1 foot
- C. 2 yards
- D. 4 inches

3)



Sucette

- A. 1 foot
- B. 3 inches
- C. 1 mile
- D. 5 inches

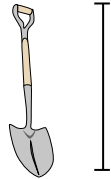
4)



Bicyclette

- A. 10 inches
- B. 3 inches
- C. 1 yard
- D. 3 yards

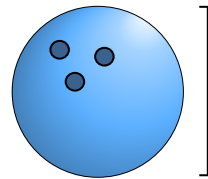
5)



Pelle

- A. 11 inches
- B. 2 feet
- C. 4 feet
- D. 3 yards

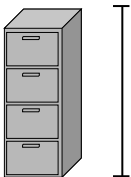
6)



Hauteur de la boule de bowling

- A. 10 inches
- B. 10 feet
- C. 1 yard
- D. 4 inches

7)



FichierCabinet

- A. 11 inches
- B. 5 feet
- C. 1 foot
- D. 2 feet

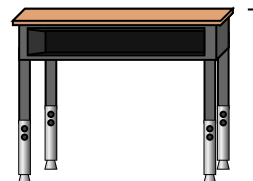
8)



Crayon

- A. 1 yard
- B. 7 inches
- C. 1 foot
- D. 1 inch

9)



Bureau

- A. 2 yards
- B. 6 inches
- C. 11 inches
- D. 2 feet

1. **D**
2. **A**
3. **D**
4. **C**
5. **C**
6. **A**
7. **B**
8. **B**
9. **D**