

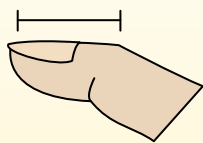


Déterminez quelle lettre représente le mieux la longueur / hauteur.

Réponses

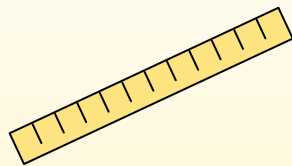
Polegadas (in)

Una pulgada es aproximadamente la distancia de la última articulación de su dedo.



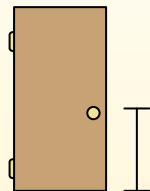
Pie (pies)

Um pé mede 12 polegadas. O comprimento de uma régua.



Jarda (jd)

1 jarda é o mesmo que 3 pés. Do chão até a maçaneta da porta são cerca de 1 jarda.



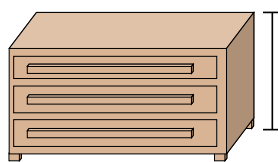
Milla (mi)

Uma milha equivale a 5.280 pés. A maioria das estradas principais tem pelo menos uma milha de comprimento.



1. _____
2. _____
3. _____
4. _____
5. _____
6. _____
7. _____
8. _____
9. _____


1)



Une commode

- A. 3 yards
- B. 12 inches
- C. 18 inches
- D. 3 feet

2)



Auto

- A. 5 feet
- B. 3 feet
- C. 5 yards
- D. 8 inches

3)



2 litre de soda

- A. 1 inch
- B. 6 yards
- C. 1 mile
- D. 1 foot


4)



fraise

- A. 10 inches
- B. 1 yard
- C. 6 inches
- D. 2 inches

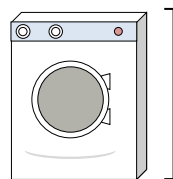
5)



Grande roue

- A. 100 inches
- B. 75 feet
- C. 1 mile
- D. 6 yards


6)



Machine à laver

- A. 3 feet
- B. 4 inches
- C. 2 yards
- D. 1 foot


7)



Marteau

- A. 16 inches
- B. 1 yard
- C. 4 inches
- D. 1 inch


8)



Sucette

- A. 1 mile
- B. 3 inches
- C. 5 inches
- D. 1 foot

9)



Hauteur de la boîte de céréales

- A. 2 feet
- B. 1 foot
- C. 4 inches
- D. 1 inch

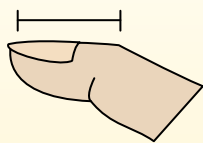


Déterminez quelle lettre représente le mieux la longueur / hauteur.

Réponses

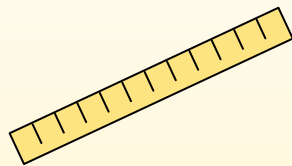
Polegadas (in)

Una pulgada es aproximadamente la distancia de la última articulación de su dedo.



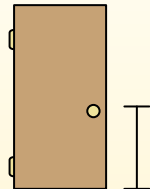
Pie (pies)

Um pé mede 12 polegadas. O comprimento de uma régua.



Jarda (jd)

1 jarda é o mesmo que 3 pés. Do chão até a maçaneta da porta são cerca de 1 jarda.



Milla (mi)

Uma milha equivale a 5.280 pés. A maioria das estradas principais tem pelo menos uma milha de comprimento.



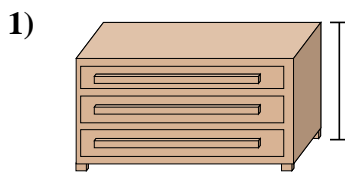
1. **D**

2. **A**

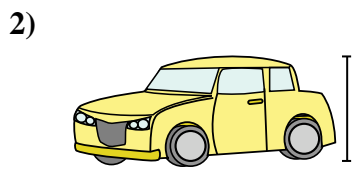
3. **D**

4. **D**

5. **B**



Une commode
A. 3 yards
B. 12 inches
C. 18 inches
D. 3 feet




Auto
A. 5 feet
B. 3 feet
C. 5 yards
D. 8 inches




2 litre de soda
A. 1 inch
B. 6 yards
C. 1 mile
D. 1 foot

6. **A**

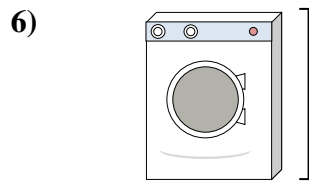
7. **A**



fraise
A. 10 inches
B. 1 yard
C. 6 inches
D. 2 inches




Grande roue
A. 100 inches
B. 75 feet
C. 1 mile
D. 6 yards




Machine à laver
A. 3 feet
B. 4 inches
C. 2 yards
D. 1 foot

8. **C**


9. **B**



Marteau
A. 16 inches
B. 1 yard
C. 4 inches
D. 1 inch



Sucette
A. 1 mile
B. 3 inches
C. 5 inches
D. 1 foot



Hauteur de la boîte de céréales
A. 2 feet
B. 1 foot
C. 4 inches
D. 1 inch