



Mesurez la longueur et la largeur de chaque barre en centimètres.

Réponses

Ex)



Ex. $3\frac{1}{2}$ $0\frac{1}{2}$ **8,9** **1,3**


1. _____

2. _____

3. _____

4. _____


1)




2)



3)



4)





Mesurez la longueur et la largeur de chaque barre en centimètres.

Ex)



Réponses

Ex. 3 1/2 0 1/2 **8,9** **1,3**


1. **1** 1 1/2 **2,5** **3,8**

2. 1 1/2 **1** **3,8** 2,5

3. 5 1/2 1 1/2 **14** **3,8**

4. **5** 1 12,7 2,5


1)



2)



3)



4)

