



Déterminez quelle lettre représente le mieux la longueur / hauteur.

Réponses

Milímetro (mm)

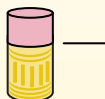
Un milímetro equivale al grosor de una tarjeta de crédito.



Centímetro (cm)

10 mm = 1 cm.

La parte metálica de un lápiz mide aproximadamente 1 cm. Una regla mide unos 30 centímetros.



Metro (m)

100 cm = 1 m

Desde el suelo hasta la perilla de una puerta hay aproximadamente 1 metro.



Kilómetro (km)

1,000 m = 1 km

La mayoría de las carreteras principales tienen al menos un kilómetro de largo.



1. _____
2. _____
3. _____
4. _____
5. _____
6. _____
7. _____
8. _____
9. _____

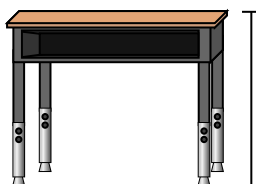
1)



Stylo

- A. 12 centimeters
- B. 30 millimeters
- C. 30 centimeters
- D. 5 meters

2)



Bureau

- A. 15 centimeters
- B. 2 meters
- C. 70 centimeters
- D. 30 centimeters

3)



Grenouille

- A. 20 centimeters
- B. 8 centimeters
- C. 4 millimeters
- D. 60 centimeters

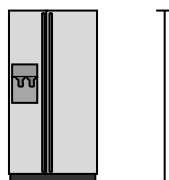
4)



Bicyclette

- A. 10 centimeters
- B. 1 meter
- C. 3 meters
- D. 25 centimeters

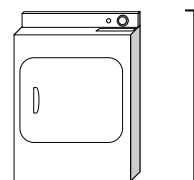
5)



Réfrigérateur

- A. 180 centimeters
- B. 30 centimeters
- C. 5 kilometers
- D. 4 meters

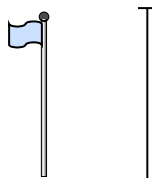
6)



Sèche-linge

- A. 60 centimeters
- B. 1 meter
- C. 25 centimeters
- D. 15 centimeters

7)



mât de drapeau

- A. 2 kilometers
- B. 9 meters
- C. 300 centimeters
- D. 2 meters

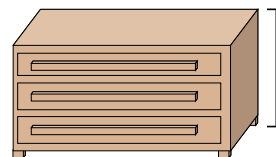
8)



Balle de tennis

- A. 3 millimeters
- B. 25 centimeters
- C. 8 centimeters
- D. 60 centimeters

9)



Une commode

- A. 45 centimeters
- B. 90 centimeters
- C. 3 meters
- D. 30 centimeters



Déterminez quelle lettre représente le mieux la longueur / hauteur.

Réponses

Milímetro (mm)

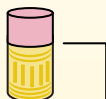
Un milímetro equivale al grosor de una tarjeta de crédito.



Centímetro (cm)

10 mm = 1 cm.

La parte metálica de un lápiz mide aproximadamente 1 cm. Una regla mide unos 30 centímetros.



Metro (m)

100 cm = 1 m

Desde el suelo hasta la perilla de una puerta hay aproximadamente 1 metro.



Kilómetro (km)

1,000 m = 1 km

La mayoría de las carreteras principales tienen al menos un kilómetro de largo.



1. **A**

2. **C**

3. **B**

4. **B**

5. **A**

6. **B**

7. **B**

8. **C**

9. **B**

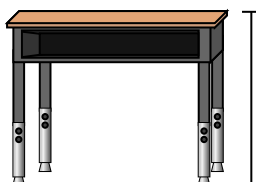
1)



Stylo

- A. 12 centimeters
- B. 30 millimeters
- C. 30 centimeters
- D. 5 meters

2)



Bureau

- A. 15 centimeters
- B. 2 meters
- C. 70 centimeters
- D. 30 centimeters

3)



Grenouille

- A. 20 centimeters
- B. 8 centimeters
- C. 4 millimeters
- D. 60 centimeters

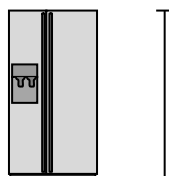
4)



Bicyclette

- A. 10 centimeters
- B. 1 meter
- C. 3 meters
- D. 25 centimeters

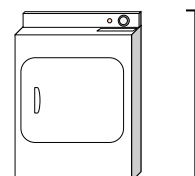
5)



Réfrigérateur

- A. 180 centimeters
- B. 30 centimeters
- C. 5 kilometers
- D. 4 meters

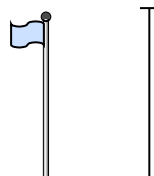
6)



Sèche-linge

- A. 60 centimeters
- B. 1 meter
- C. 25 centimeters
- D. 15 centimeters


7)



mât de drapeau

- A. 2 kilometers
- B. 9 meters
- C. 300 centimeters
- D. 2 meters

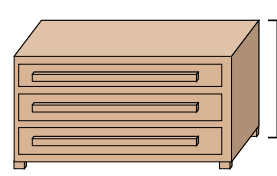
8)



Balle de tennis

- A. 3 millimeters
- B. 25 centimeters
- C. 8 centimeters
- D. 60 centimeters

9)



Une commode

- A. 45 centimeters
- B. 90 centimeters
- C. 3 meters
- D. 30 centimeters