



Déterminez quelle lettre représente le mieux la longueur / hauteur.

Réponses

Milímetro (mm)

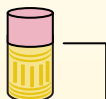
Un milímetro equivale al grosor de una tarjeta de crédito.



Centímetro (cm)

10 mm = 1 cm.

La parte metálica de un lápiz mide aproximadamente 1 cm. Una regla mide unos 30 centímetros.



Metro (m)

100 cm = 1 m

Desde el suelo hasta la perilla de una puerta hay aproximadamente 1 metro.



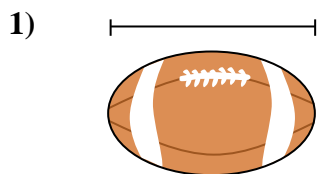
Kilómetro (km)

1,000 m = 1 km

La mayoría de las carreteras principales tienen al menos un kilómetro de largo.

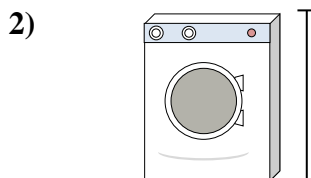


1. _____
2. _____
3. _____
4. _____
5. _____
6. _____
7. _____
8. _____
9. _____



Football

- A. 25 centimeters
- B. 1 meter
- C. 3 centimeters
- D. 60 centimeters



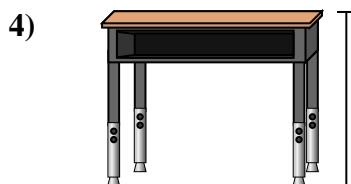
Machine à laver

- A. 10 centimeters
- B. 2 meters
- C. 30 centimeters
- D. 1 meter




Pop corn

- A. 2 kilometers
- B. 3 millimeters
- C. 90 centimeters
- D. 3 centimeters



Bureau

- A. 2 meters
- B. 70 centimeters
- C. 30 centimeters
- D. 15 centimeters



Tranche de pain

- A. 10 centimeters
- B. 25 centimeters
- C. 2 meters
- D. 120 centimeters

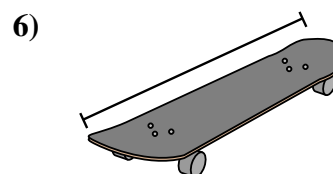


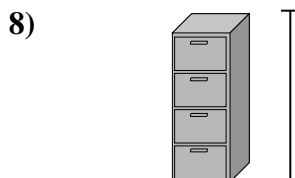
planche à roulette

- A. 30 centimeters
- B. 2 meters
- C. 3 centimeters
- D. 80 centimeters




Boîte de haricots

- A. 10 centimeters
- B. 120 centimeters
- C. 2 kilometers
- D. 2 meters



FichierCabinet

- A. 30 centimeters
- B. 60 centimeters
- C. 1.5 millimeters
- D. 30 millimeters



Auto

- A. 20 centimeters
- B. 150 centimeters
- C. 5 meters
- D. 90 centimeters



Déterminez quelle lettre représente le mieux la longueur / hauteur.

Réponses

Milímetro (mm)

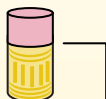
Un milímetro equivale al grosor de una tarjeta de crédito.



Centímetro (cm)

10 mm = 1 cm.

La parte metálica de un lápiz mide aproximadamente 1 cm. Una regla mide unos 30 centímetros.



Metro (m)

100 cm = 1 m

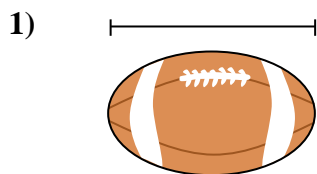
Desde el suelo hasta la perilla de una puerta hay aproximadamente 1 metro.



Kilómetro (km)

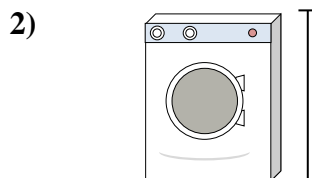
1,000 m = 1 km

La mayoría de las carreteras principales tienen al menos un kilómetro de largo.



Football

- A. 25 centimeters
- B. 1 meter
- C. 3 centimeters
- D. 60 centimeters



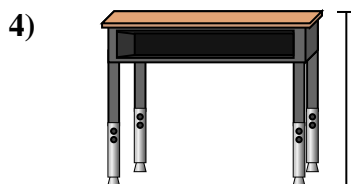
Machine à laver

- A. 10 centimeters
- B. 2 meters
- C. 30 centimeters
- D. 1 meter




Pop corn

- A. 2 kilometers
- B. 3 millimeters
- C. 90 centimeters
- D. 3 centimeters



Bureau

- A. 2 meters
- B. 70 centimeters
- C. 30 centimeters
- D. 15 centimeters



Tranche de pain

- A. 10 centimeters
- B. 25 centimeters
- C. 2 meters
- D. 120 centimeters

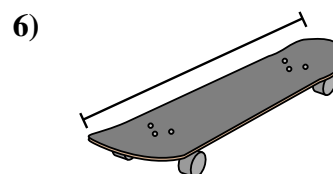


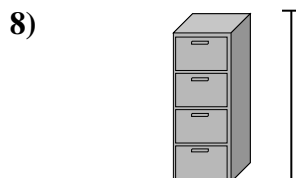
planche à roulette

- A. 30 centimeters
- B. 2 meters
- C. 3 centimeters
- D. 80 centimeters




Boîte de haricots

- A. 10 centimeters
- B. 120 centimeters
- C. 2 kilometers
- D. 2 meters



FichierCabinet

- A. 30 centimeters
- B. 60 centimeters
- C. 1.5 millimeters
- D. 30 millimeters



Auto

- A. 20 centimeters
- B. 150 centimeters
- C. 5 meters
- D. 90 centimeters

- 1. **A**
- 2. **D**
- 3. **D**
- 4. **B**
- 5. **A**
- 6. **D**
- 7. **A**
- 8. **C**
- 9. **B**