



Déterminez le montant d'argent indiqué.


**Réponses**



1. \_\_\_\_\_



2. \_\_\_\_\_



3. \_\_\_\_\_

4. \_\_\_\_\_



5. \_\_\_\_\_

6. \_\_\_\_\_




7. \_\_\_\_\_

8. \_\_\_\_\_



9. \_\_\_\_\_

10. \_\_\_\_\_





Déterminez le montant d'argent indiqué.


**Réponses**



1. \$0,43



2. \$0,85



3. \$0,71



4. \$0,69




5. \$0,96



6. \$0,96



7. \$0,81



8. \$0,93



9. \$0,96



10. \$0,99