




Comptez le nombre de quarters (25¢), dimes (10¢), nickels (5¢) et pennies (1¢).

**Réponses**

Ex)




Ex. 3 2 2 2

1)



1. \_\_\_\_\_

2)



2. \_\_\_\_\_

3)



3. \_\_\_\_\_

4)



4. \_\_\_\_\_

5)



5. \_\_\_\_\_

6)



6. \_\_\_\_\_

7)




7. \_\_\_\_\_

8)



8. \_\_\_\_\_

9)



9. \_\_\_\_\_

10)




10. \_\_\_\_\_



Comptez le nombre de quarters (25¢), dimes (10¢), nickels (5¢) et pennies (1¢).

Ex)




Ex. 3 2 2 2

1)



1. 2 2 3 2

2)



2. 2 2 2 3

3)



3. 2 5 1 1

4)



4. 2 3 2 2

5)



5. 2 2 2 3

6)



6. 2 4 1 2

7)




7. 3 1 1 4

8)



8. 3 2 2 2

9)



9. 3 2 1 3

10)



10. 1 2 2 4