
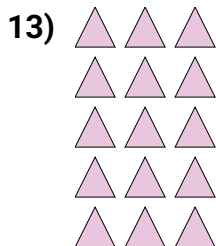

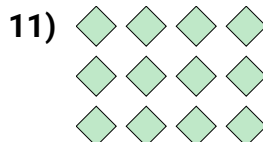

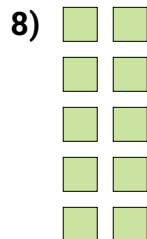

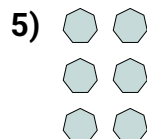
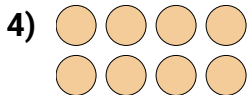
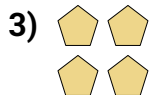
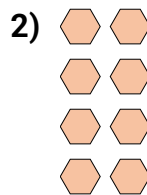
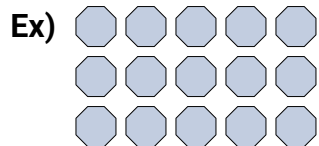




Écrivez chaque tableau sous la forme d'un problème d'addition et résolvez-le.

RéponsesEx. **5+5+5=15**

1. _____

2. _____

3. _____

4. _____

5. _____

6. _____

7. _____

8. _____

9. _____

10. _____

11. _____


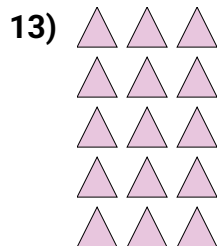

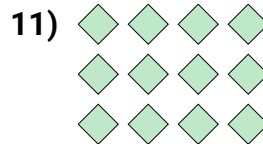

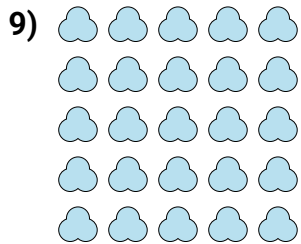
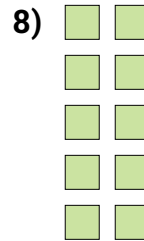
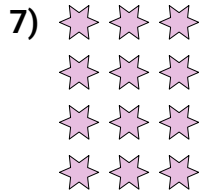
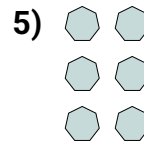
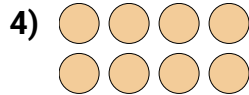
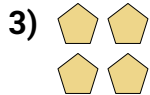
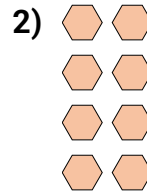
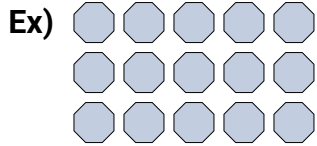
12. _____

13. _____

14. _____



Écrivez chaque tableau sous la forme d'un problème d'addition et résolvez-le.

Réponses

Ex. 5+5+5=15

1. 3+3=6

2. 2+2+2+2=8

3. 2+2=4

4. 4+4=8

5. 2+2+2=6

6. 3+3+3=9

7. 3+3+3+3=12

8. 2+2+2+2+2=10

9. 5+5+5+5+5=25

10. 4+4+4+4+4=20

11. 4+4+4=12

12. 5+5=10

13. 3+3+3+3+3=15

14. 4+4+4+4=16